

**RING MIDWAYS SR. SEC. PUBLIC SCHOOL**  
**Main Najafgarh Road, Vipin Garden, New Delhi-110059**  
**Assessment For - I Perodic Assessment - I (A)**  
**Class -K.G**  
**Subject-Hindi**

प्रश्न -1 अ से अः तक लिखों।

.....

.....

.....

प्रश्न-2 क से झ तक लिखों

.....

.....

.....

.....

.....

.....

.....

प्रश्न-3 दो अक्षरों का जोड़ लिखो

ह + ल = .....

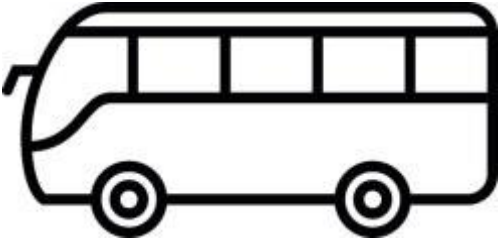

न + भ = .....

ज + ल = .....

ज + ग = .....

न + थ = .....

प्रश्न-4 चित्र देखकर नाम लिखो।



प्रश्न- 5 मिलान करो।

हल	मन
मन	बस
तन	हल
बस	थन
थन	तन

क्रियालकलाप

प्रश्न-6 क से झ तक चार्ट पेपर पर लिखो:-

**RING MIDWAYS SR. SEC. PUBLIC SCHOOL**  
**Main Najafgarh Road, Vipin Garden, New Delhi-110059**  
**Assessment For - I Perodic Assessment - II (B)**  
**Class -K.G**  
**Subject-Hindi**

प्रश्न -1 तीन अक्षरों का जोड़

म + ह + ल = .....

न + म + क = .....

न + र + म = .....

च + म + क = .....

ग + र + म = .....

प्रश्न-2 फलों के नाम लिखो :-

.....

.....

.....

.....

.....

प्रश्न-3 रिक्त स्थान भरें:-

च .....क

म ..... ल

भ ..... न

ब ..... न

म ..... र

प्रश्न-4 नीचे लिखे शब्दों को जोड़कर लिखिए :-

क ल श =.....

च ह ल =.....

स फ र =.....

अ म न =.....

क ल म =.....

प्रश्न-5 मिलान करो।

चमन	रमन
-----	-----

रमन	अमर
-----	-----

अमर	चमन
-----	-----

बहक	गरम
-----	-----

गरम	बहक
-----	-----

क्रियाकलाप

प्रश्न-6 फलो के नाम पेपर पर लिखिए (चित्र सहित)

**RING MIDWAYS SR. SEC. PUBLIC SCHOOL**  
**Main Najafgarh Road, Vipin Garden, New Delhi-110059**  
**Assessment For - I Term Assessment - III (A)**  
**Class -K.G**  
**Subject-Hindi**

प्रश्न -1 चार अक्षरों के पाँच शब्द लिखिए:-

1. ....
2. ....
3. ....
4. ....
5. ....

प्रश्न - 2 नीचे लिखे अक्षरों से तीन अक्षर के शब्द लिखिए:-

अ .....  
स .....  
ब .....

प्रश्न -3 पाँच रंगों के नाम लिखो :-

1. ....
2. ....
3. ....
4. ....
5. ....

प्रश्न -4 चार अक्षरों का जोड़।

ख + ट + म + ल = .....

न + ट + ख + ट = .....

अ + च + क + न = .....

श + ब + न + म = .....

क + ट + ह + ल = .....

प्रश्न - 5 चित्र देखकर नाम लिखो:-



.....



.....



.....



.....



.....

.

क्रियाकलाप

प्रश्न -6 आ (i) की मात्रा के पाँच शब्द फ्लैश कार्ड पर लिखो :-

**RING MIDWAYS SR. SEC. PUBLIC SCHOOL**  
**Main Najafgarh Road, Vipin Garden, New Delhi-110059**  
**Assessment For - I Term Assessment - IV (B)**  
**Class -K.G**  
**Subject-Hindi**

प्रश्न -1 पाँच अंगों के नाम लिखो।

1. .... 2. .... 3. .... 4. .... 5. ....

प्रश्न -2 पाँच सब्जियों के नाम लिखो।

1. .... 2. .... 3. .... 4. .... 5. ....

प्रश्न -3 इ ( ि ) की मात्रा के पाँच शब्द लिखो।

1. .... 2. .... 3. .... 4. .... 5. ....

प्रश्न -4 सात दिनों के नाम लिखो:-

.....

.....

.....

.....

.....

.....

.....

प्रश्न - 5 सही शब्द पर गोला बनाओ:-

गिलास      गलास      गीलास

विमान      वीमान      वमान

रबिवार      रविबार      रविवार

क्रियाकलाप

प्रश्न-6 चार्ट पेपर पर रंग बिरंगी तितली बनाओ:-

**RING MIDWAYS SR. SEC. PUBLIC SCHOOL**  
**Main Najafgarh Road, Vipin Garden, New Delhi-110059**  
**Assessment For - II Perodic Assessment - V (A)**  
**Class -K.G**  
**Subject-Hindi**

प्रश्न :- मेरा परिचय लिखो:-

1. ....
2. ....
3. ....
4. ....
5. ....

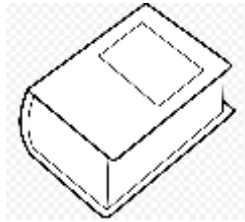
प्रश्न -2 ई (ी ) की मात्रा लगाकर शब्द लिखिए :-

- बकर .....
- मछल .....
- असल .....
- ककड़ .....
- नकल .....


प्रश्न -3 चित्र देखकर नाम लिखो



.....



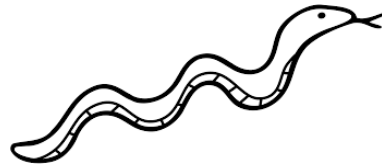
.....



.....




.....



.....

प्रश्न - 4 झंडे में रंग भरें।



प्रश्न - 5 शब्द पूरे करें।

ख ..... रा

द ..... वक

श..... तन

व..... र

क्रियाकलाप

प्रश्न-6 कागज से हवाई जहाज बनाओ।

**RING MIDWAYS SR. SEC. PUBLIC SCHOOL**  
**Main Najafgarh Road, Vipin Garden, New Delhi-110059**  
**Assessment For - II Perodic Assessment - VI (B)**  
**Class -K.G**  
**Subject-Hindi**

प्रश्न -1 लिंग बदलो।

1. मामा .....
2. शेर .....
3. मोर .....
4. भाई .....
5. चूहा .....

प्रश्न-2 'उ' ( उ ) की मात्रा लगाकर शब्द लिखिए।

- गलाब .....
- पजारी .....
- साबन .....
- सपारी .....
- बखार .....

प्रश्न-3 जिन वर्णों में जरूरी हो, उनमें उ की मात्रा लगाओ :-

बलबल आ। बलबल आ


मधर-मधर कछ गीत सना।

दाना चगकर जा।

आ बगिया की रानी आ।

गनग गीत सनाती जा।

प्रश्न-4 बुलबुल के चित्र व नाम में रंग भरिए :-

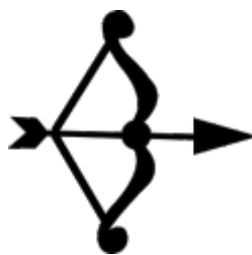


बुलबुल

प्रश्न-5 चित्र देखकर नाम लिखो :-



.....



.....



.....



.....

क्रियाकलाप

प्रश्न-6 चार्ट पेपर पर सप्ताह के दिनों के नाम लिखो :-

**RING MIDWAYS SR. SEC. PUBLIC SCHOOL**  
**Main Najafgarh Road, Vipin Garden, New Delhi-110059**  
**Assessment For - II Term Assessment - VII (A)**  
**Class -K.G**  
**Subject-Hindi**




प्रश्न -1 वचन बदलों।

1. मेला .....
2. पुस्तक .....
3. ताला .....
4. किताब .....
5. कमरा .....

प्रश्न -2 12 महीनों के नाम लिखो

- |         |          |
|---------|----------|
| 1. .... | 7. ....  |
| 2. .... | 8. ....  |
| 3. .... | 9. ....  |
| 4. .... | 10. .... |
| 5. .... | 11. .... |
| 6. .... | 12. .... |

प्रश्न-3 शब्दों को चित्रों में मिलाइए।

- |    |   |       |
|----|---|-------|
| 1  |  | चश्मा |
| 2. |  | तराजू |
| 3. |  | सूरज  |

प्रश्न-4 रंग भरो।



प्रश्न-5 गोले में दिए व्यजन की सहायता से शब्द पूरे कीजिए-

भा	.....
आ	.....
चा	.....
कचा	.....
का	.....

क्रियाकलाप

प्रश्न-6

चार्ट पेपर पर महीनों के नाम लिखो।

**RING MIDWAYS SR. SEC. PUBLIC SCHOOL**  
**Main Najafgarh Road, Vipin Garden, New Delhi-110059**  
**Assessment For - II Term Assessment - VIII (B)**  
**Class -K.G**  
**Subject-Hindi**

प्रश्न-1 वर्णों को सही क्रम में जोड़कर शब्द बनाइए।

न मा ह मे .....

ढ़ क मे .....

ले के .....

ली मे च .....

ली वे ह .....

प्रश्न -1 जिन शब्दों में 'ए' की मात्रा है, उनमें गोले लगाओ।

रमेश चमेली सवेरा नाव खेलना सपने

फूल शेर मेहमान महेश तालाब सितार

प्रश्न-3 'ए' ( ` ) की मात्रा लगाकर शब्द लिखिए :-

शर .....

सपरा .....

सपन .....

ममना .....

अकला .....

प्रश्न-4 गाय का प्रस्ताव लिखिए :-

.....	.....	.....	.....	.....
.....	.....	.....	.....	.....
.....	.....	.....	.....	.....
.....	.....	.....	.....	.....
.....	.....	.....	.....	.....

प्रश्न-5 उदाहरण देकर नए शब्द बनाइए-

.....

.....

.....

.....

.....

.....

क्रियाकलाप



प्रश्न-6 चार्ट पेपर पर राष्ट्रीय ध्वज बनाओं।

**RING MIDWAYS SR. SEC. PUBLIC SCHOOL**  
**Main Najafgarh Road, Vipin Garden, New Delhi-110059**  
**Assessment For - I Perodic Assessment - I (A)**  
**Class - K.G**  
**Subject- English**

**Q.1 Write the alphabets in cursive capital letters.**

**A TO Z**

.....	.....	.....	.....	.....
.....	.....	.....	.....	.....
.....	.....	.....	.....	.....
.....	.....	.....	.....	.....
.....	.....	.....	.....	.....
.....				

**Q.2 Write the alphabets in cursive small letters.**

**a to z**

.....	.....	.....	.....	.....
.....	.....	.....	.....	.....
.....	.....	.....	.....	.....
.....	.....	.....	.....	.....

.....

.....


**Q.3 Write 5 word of Sound 'a'**

1. .... 2. .... 3. ....
4. .... 5. ....

**Q.4 Match the rhyming words**

Ball	Tall
Gap	Cat
Rat	Lap
Cab	Mall
Wall	Tab

**Q.5 Trace the given Letters over balloons**



**Activity**

Make a beautiful chart A to Z

**RING MIDWAYS SR. SEC. PUBLIC SCHOOL**  
**Main Najafgarh Road, Vipin Garden, New Delhi-110059**  
**Assessment For - I Perodic Assessment - II (B)**  
**Class - K.G**  
**Subject- English**

**Q.1 Write 5 words of sound 'e'**

1.

2.

3.

4.

5.

**Q.2 Fill in the blanks with sound 'a' and 'e'**

C.....N

B.....T

P.....N

H.....N

B.....LL

B.....RN

P.....T

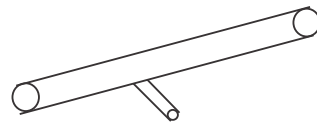
W.....LL

**Q.2 Colour the Mango**



**Q.4 Read the word and circle the correct Picture.**

1. Bell



2. Egg




3. Bus



4. Tap



**Name the following words Withe the help of Picture**






.....



.....



.....

Activity :- Make a Beautiful chart of sound ‘e’

**RING MIDWAYS SR. SEC. PUBLIC SCHOOL**  
**Main Najafgarh Road, Vipin Garden, New Delhi-110059**  
**Assessment For - I Term Assessment - III (A)**  
**Class - K.G**  
**Subject- English**

**Q.1 Write 5 words of sound 'i'**

- 1.
- 2.
- 3.
- 4.
- 5.

**Q.2 Write 5 words of sound 'o'**

- 1.
- 2.
- 3.
- 4.
- 5.

**Q.3 Match me things which goes together:-**



**Q.4 Write 5 words of sound 'u'**

- 1.
- 2.
- 3.
- 4.

**5. Q.4 Match the picture with their Names :-**



**Shirt**

**Lock**



**Right**



**Stick**



**Clock**

### **Activity**

**Make a beautiful Chart Sound of ('a') ('e') ('I')**

**RING MIDWAYS SR. SEC. PUBLIC SCHOOL**  
**Main Najafgarh Road, Vipin Garden, New Delhi-110059**  
**Assessment For - I Term Assessment - IV (B)**  
**Class - K.G**  
**Subject- English**

**Q.1 Match the words the Picture**

Bell



Hut



Mat



Pen



**Q.2 Fill in the blanks 'a' an and the**

1. This is ..... Mango
2. This is ..... Kite
3. This is ..... elephant..
4. This is ..... Pen

**Q.3 Match the Rhyming Words :-**

Till	Ring
Wing	Fill
Win	Kite
Bite	Fine
Line	Bin

**Q.4 Answer the following questions :-**

1. What colour is the Milk?.....
2. What colour is the Rose? .....
3. What colour is the Parrot?.....

**Activity**

Make a beautiful chart of vowels with examples

**RING MIDWAYS SR. SEC. PUBLIC SCHOOL**  
**Main Najafgarh Road, Vipin Garden, New Delhi-110059**  
**Assessment For - II Perodic Assessment - V (A)**  
**Class - K.G**  
**Subject- English**

**Q.1 Supply the missing letters.**

Mo...d...y	Tu...sday...
Fr...day	S...t...day
S...n d...y	Thu...sday

**Q.2 Give the opposites of following words.**

In	.....
Up	.....
New	.....
Heavy	.....
Hot	.....

**Q.3 Make sentences by arranging the words in the right order!**

1. This/book/ my/is
2. This/my/bag/ is
3. This/my/pen/ is
4. This/my/Bat/ is
5. This/my/room/ is

**Q.5 Write five lines on 'My self'**

1. ....
2. ....
3. ....

4. ....

5. ....

### Activity

Make a beautiful chart of days of week

**RING MIDWAYS SR. SEC. PUBLIC SCHOOL**  
**Main Najafgarh Road, Vipin Garden, New Delhi-110059**  
**Assessment For - II Perodic Assessment - VI (B)**  
**Class - K.G**  
**Subject- English**

**Q.1 Fill in the blanks**

First Day =.....

Third day =.....

Fifth day =.....

Sixth day =.....

**Q.2 Match the singular words with there plural**

Girl	Bells
Cap	Girls
Bell	Kites
Kite	Flowers
Flower	Caps

**Q.3 Answer the following questions :-**

1. What colour is the crow?

.....

2. What colour is the Sun?

.....

3. What colour is the rose?

.....

4. What colour is the Parrot?

.....

5. What colour is the moon?

.....

#### Q.4 Write meaning of the following words

I = .....

My = .....

We = .....

He = .....

She = .....

#### Activity

Write five sentence of my self on beautiful chart.

**RING MIDWAYS SR. SEC. PUBLIC SCHOOL**  
**Main Najafgarh Road, Vipin Garden, New Delhi-110059**  
**Assessment For - II Term Assessment - VII (A)**  
**Class - K.G**  
**Subject- English**

**Q.1 Correct the spelling of :-**

January	febery	Agast	Stember
.....	.....	.....	.....
Uprel	room	Aetuber	Moarch
.....	.....	.....	.....

**Q.2 Cross the word which does not Rhyme.**

<div style="border: 1px solid black; padding: 2px 10px;">ad</div>	had	sad	man	lad
<div style="border: 1px solid black; padding: 2px 10px;">en</div>	bet	den	ten	pen
<div style="border: 1px solid black; padding: 2px 10px;">it</div>	hit	wig	bit	sit
<div style="border: 1px solid black; padding: 2px 10px;">op</div>	mop	hop	top	dog
<div style="border: 1px solid black; padding: 2px 10px;">ug</div>	bug	mug	hug	sun

**Q.3 Answer the following questions :-**

1. How many months have 30 days?

.....

2. How many months have 31 days?

.....

3. How many days are there in a Year?

.....

4. How many days are there in February?

.....

**Q.4 Say yes or no**

1. I walk with my legs ☐
2. I have one leg ☐
3. I See with my eyes ☐
4. I Stand on my hands ☐
5. I Smell with my nose ☐

**Q.5 Answers the following question :-**

1. How many heads do you have? .....
2. How many legs do you have?.....

**Activity**

Make a beautiful chart of Months name.



Lamb          Tiger

Chick        Cat

Kitten       Hen

### **Activity**

Write five sentence of the cow on beautiful chart.

# RING MIDWAYS SR. SEC. PUBLIC SCHOOL


Main Najafgarh Road, Vipin Garden, New Delhi-110059

Assessment For - I Perodic Assessment - I (A)

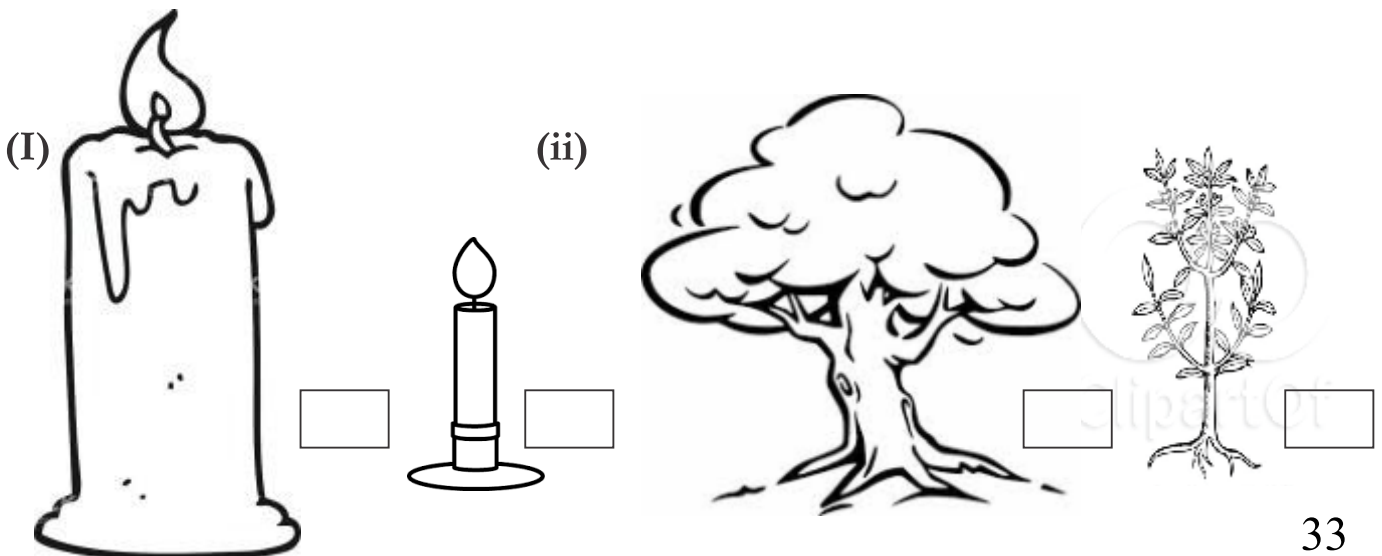
Class - K.G

Subject- Maths

Q.1 Trace sleeping lines with crayon

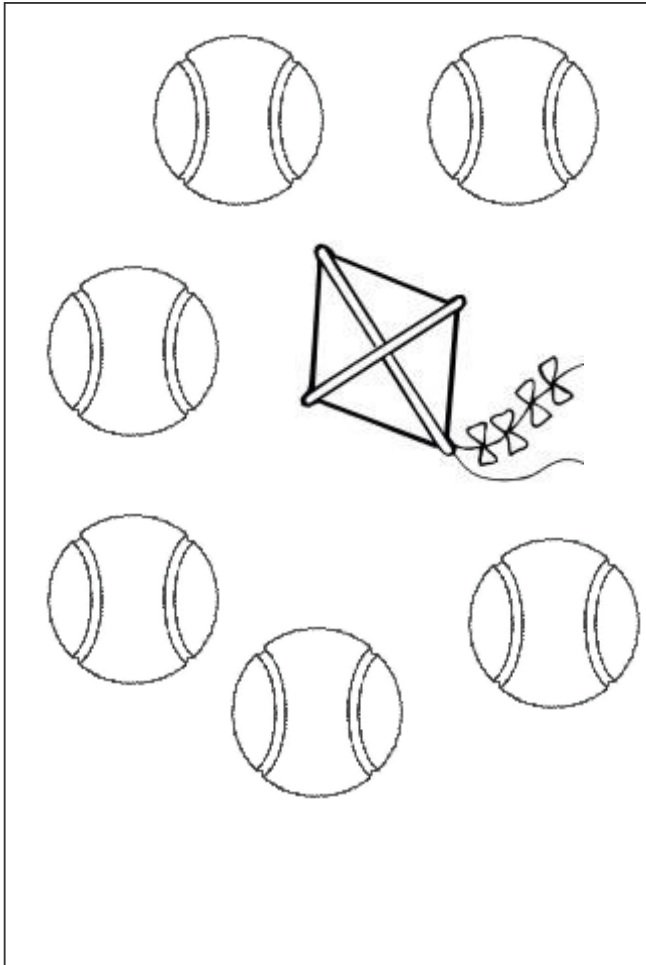


Q.2 Tick (✓) the biggest and cross (x) the smallest and colour.




Q.3 Circle one add object in picture.

(I)

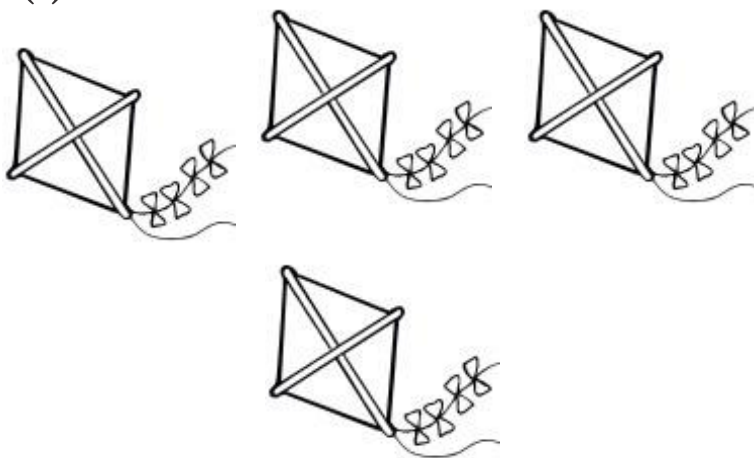


(ii)




Q.4 Count and Write :-

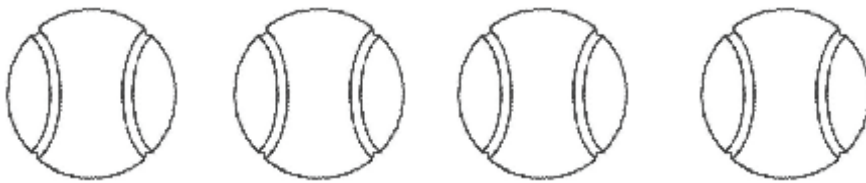
(I)




(ii)



**Q.5 Count and match the following**




3



2



4



5

**Activity**

**Read the number and draw circles for each number**

(I)      2      =

(ii)      7      =





























(iii)      9      =

(iv)      5      =














**RING MIDWAYS SR. SEC. PUBLIC SCHOOL**  
**Main Najafgarh Road, Vipin Garden, New Delhi-110059**  
**Assessment For - I Perodic Assessment - II (B)**  
**Class - K.G**  
**Subject- Maths**

**Q.1 Write counting 1 to 100**


**Q.2 Complete the for word Counting.**

- (I)  1   4   7   10
- (ii) 11  13   16   19  
- (iii) 21   24   27   30 
- (iv) 31  33   36    40 

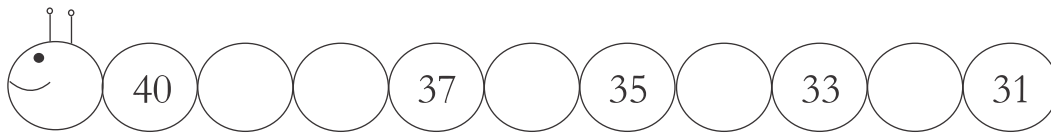
**Q.3 Write the missing numbers.**

- (I)  10  8  6  4  2 
- (ii)  20  17   14    11


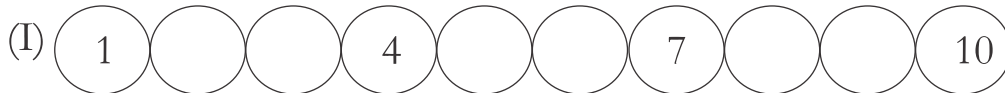
(iii)



(iv)



#### Q.4 Write the missing numbers



#### Q.4 Reverse counting 50 to 1

#### Activity

Write 1 to 10 in words on a chart paper with picture

**RING MIDWAYS SR. SEC. PUBLIC SCHOOL**  
**Main Najafgarh Road, Vipin Garden, New Delhi-110059**  
**Assessment For - I Term Assessment - III (A)**  
**Class - K.G**  
**Subject- Maths**

**Q.1 Reverse counting 100 to 1**

**Q.2 Put the sign  $>$ ,  $<$  or  $=$**

(i) 

9		5
---	--	---

(ii) 

10		10
----	--	----

(iii) 

23		32
----	--	----

(iv) 

42		30
----	--	----

(v) 

50		05
----	--	----

(vi) 

30		23
----	--	----

(vii) 

66		66
----	--	----

**Q.3 Write What comes just before :-**

1. ....6

2. ....9

3. ....19

4. ....36

5. ....45

6. ....54

7. ....81

8. ....92

**Q.4 Write what comes just after**

1. 7 .....

2. 14 .....

3. 37 .....

4. 54 .....

5. 67 .....

6. 73 .....

7. 87.....

8. 99.....

**Q.5 What comes just in between.**

1. 7  9

2. 12  14

3. 18  20

4. 40  42

5. 53  55

6. 66  68

7. 82  84

8. 98  100

**Activity**

Do put ths sing  $>$ ,  $<$  or  $=$  on 2x2 cartage sheet.

**RING MIDWAYS SR. SEC. PUBLIC SCHOOL**  
**Main Najafgarh Road, Vipin Garden, New Delhi-110059**  
**Assessment For - I Term Assessment - IV (B)**  
**Class - K.G**  
**Subject- Maths**

**Q.1 Write Counting 100-200**

**Q.2 Fill in the boxes :-**

(i)  is before 12

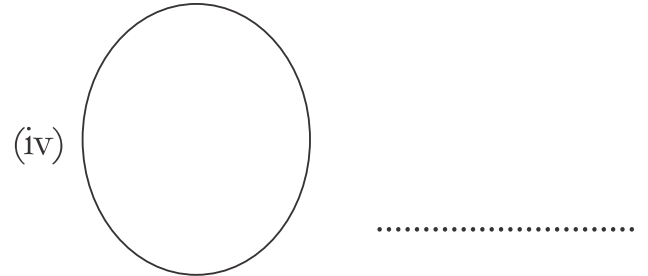


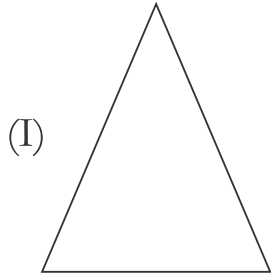
(ii) 19 is after

(iii)  is before 47

(iv)  is after 21

(v) 40 is between  and

**Q.3 Write the name of the following shapes :-**



**Q.4 Write in words 1 to 10**

1. ....

2. ....

3. ....

4. ....

5. ....

6. ....

7. ....

8. ....

9. ....

10. ....

**Q.5 Colour the 2nd and 8th abject :-**



## Activity

Continue writing backwards



**RING MIDWAYS SR. SEC. PUBLIC SCHOOL**  
**Main Najafgarh Road, Vipin Garden, New Delhi-110059**  
**Assessment For - II Perodic Assessment - V (A)**  
**Class - K.G**  
**Subject- Maths**

**Q.1 Write reverse counting 200-101**

**Q.2 Write in the words 11 to 20**

- (i) 11 .....
- (ii) 12 .....
- (ii) 13 .....
- (iv) 14 .....
- (v) 15 .....
- (vi) 16 .....
- (vii) 17 .....
- (viii) 18 .....
- (ix) 19 .....
- (x) 20 .....

**Q.3 Match the numerals with their number name. (1 to 50)**

- |       |            |
|-------|------------|
| 1. 12 | Fifty      |
| 2. 15 | Thirty six |
| 3. 49 | Twelve     |
| 4. 36 | Fifteen    |
| 5. 50 | Forty nine |

**Q.4 Write the tables '2' & '3'**

$$2 \times 1 = 2$$

$$3 \times 1 = 1$$

**Q.5 Arrange the number in increasing order :-**

$$1. 16 \quad 19 \quad 5 \quad 23 \quad = \quad \dots\dots\dots$$

$$2. 11 \quad 31 \quad 21 \quad 53 \quad = \quad \dots\dots\dots$$

$$3. 23 \quad 10 \quad 20 \quad 13 \quad = \quad \dots\dots\dots$$

$$4. 7 \quad 10 \quad 14 \quad 19 \quad = \quad \dots\dots\dots$$

$$5. 40 \quad 42 \quad 36 \quad 20 \quad = \quad \dots\dots\dots$$

**Activity**

Write Tables (2-5) on a chart Paper.

# RING MIDWAYS SR. SEC. PUBLIC SCHOOL

**Main Najafgarh Road, Vipin Garden, New Delhi-110059**


## Assessment For - II Perodic Assessment - VI (B)

## Class - K.G


## Subject- Maths


### Q.1 Fill in the missing numbers.

(I) 

(ii) 

(iii) 

(iv) 

(v) 

### Q.2 Write the number names of the following

1. 11 = .....
2. 14 = .....
3. 19 = .....
4. 20 = .....

### Q.3 Match the numerals with their number names. (51 to 10)

1. 60 Fifty on
2. 85 Hundred
3. 70 Sixty

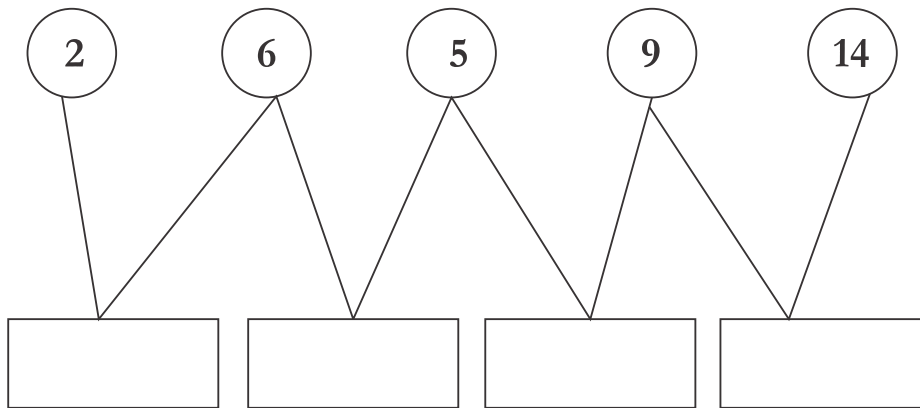
4. 100

Eighty five

5. 51

Seventy

**Q.4** Look at the patten and fill the boxes



**Q.5** Write the tables '4' & '5'

$$4 \times 1 = 4$$

$$5 \times 1 = 5$$

**Activity**

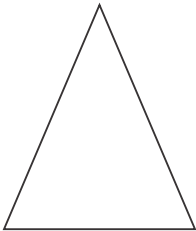

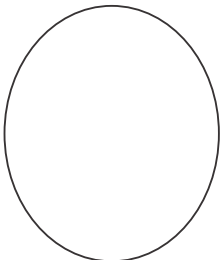
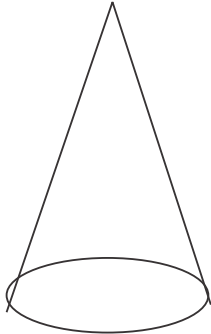
Make a beautiful chart of shapes :-

**RING MIDWAYS SR. SEC. PUBLIC SCHOOL**  
**Main Najafgarh Road, Vipin Garden, New Delhi-110059**  
**Assessment For - II Term Assessment - VII (A)**  
**Class - K.G**  
**Subject- Maths**















**Q.1 Complete the following**


1. The sum of 7 and 4 is .....
2. The sum of 6 and 6 is .....
3. The sum of 9 and 10 is .....
4. The sum of 5 and 8 is .....
5. The sum of 0 and 7 is .....

**Q.2 Write the name of the following shapes :-**

1.  .....	3.  .....
2.  .....	4.  .....

**Q.3 Count the object and add**

1.    +  	= 
2.      +  	=  47

3.  +  =

#### Q.4 Add the following

1. $\begin{array}{r} 33 \\ + 44 \\ \hline \end{array}$	2. $\begin{array}{r} 42 \\ + 24 \\ \hline \end{array}$	3. $\begin{array}{r} 63 \\ + 24 \\ \hline \end{array}$	4. $\begin{array}{r} 47 \\ + 32 \\ \hline \end{array}$	5. $\begin{array}{r} 46 \\ + 63 \\ \hline \end{array}$
--	--	--	--	--

#### Q.5 Solve these problem :-

1. Reema ate 2 ice creams. She ate 2 more. How many ice creams did she eat in all?

#### Activity

Make a chart days of week name:-

**RING MIDWAYS SR. SEC. PUBLIC SCHOOL**  
**Main Najafgarh Road, Vipin Garden, New Delhi-110059**  
**Assessment For - II Term Assessment - VIII (B)**  
**Class - K.G**

**Subject- Maths**

**Q.1 Match the numerals with their number names :-**

Seventy Seven	55	
	51	Seventy one
Eighty	62	
	71	Ninety nine
Fifty five	77	
	88	Fifty one
Sixty two	80	
	99	Eight Eight

**Q.2 Subtract**

(I)  -  =

(ii)  -  =

(iii)  -  =

**Q.3** There are 10 boys in a class -8 girls join them. How many children are in all?

**Q.4** There are 7 Apples, 3 Apples are eaten. How apples are left now?

**Q.3** Multiply the following

$$\begin{array}{r} \text{(i)} \quad 5 \\ \times 2 \\ \hline \\ \hline \end{array}$$

$$\begin{array}{r} \text{(ii)} \quad 6 \\ \times 3 \\ \hline \\ \hline \end{array}$$

$$\begin{array}{r} \text{(ii)} \quad 4 \\ \times 4 \\ \hline \\ \hline \end{array}$$

$$\begin{array}{r} \text{(iv)} \quad 5 \\ \times 4 \\ \hline \\ \hline \end{array}$$

$$\begin{array}{r} \text{(v)} \quad 6 \\ \times 0 \\ \hline \\ \hline \end{array}$$

$$\begin{array}{r} \text{(vi)} \quad 10 \\ \times 1 \\ \hline \\ \hline \end{array}$$

$$\begin{array}{r} \text{(vii)} \quad 8 \\ \times 3 \\ \hline \\ \hline \end{array}$$


$$\begin{array}{r} \text{(vii)} \quad 9 \\ \times 2 \\ \hline \\ \hline \end{array}$$

### Activity

**Make a beautiful clock on card board.**

**RING MIDWAYS SR. SEC. PUBLIC SCHOOL**  
**Main Najafgarh Road, Vipin Garden, New Delhi-110059**  
**Assessment For - I Perodic Assessment - I (A)**  
**Class - K.G**  
**Subject- G.K/E.V.S**

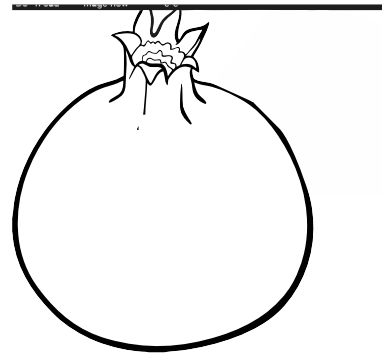
Q1. Colour the pictures and name it.



.....



.....



.....


Q.2 Colour the vegetables and name it.



.....

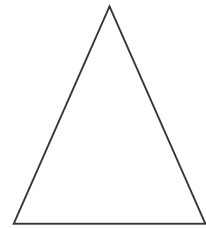




.....



.....

**Q.3 Colour it and name the shapes**




.....

.....

.....

**Q.4 Paste the picture of any 4 fruits in the space provided.**



**Q.5 Activity**

**Make a beautiful chart of colours name.**

**RING MIDWAYS SR. SEC. PUBLIC SCHOOL**  
**Main Najafgarh Road, Vipin Garden, New Delhi-110059**  
**Assessment For - I Perodic Assessment - II (B)**  
**Class - K.G**  
**Subject- G.K\E.V.S**

**Q1. Fill in the blanks**

1. I See with my .....
2. ....is a faithful pet.
3. What is th colour of tomato ?.....
4. How many legs do you have .....
5. Honey bee gives us.....

**Q.2 Count your body parts**

1



.....

2.



.....

3.



.....

4.



.....

5.



.....

**Q.4**Make a beautiful chart of fruits name.

or

**Q.5 Activity**

Make a beautiful chart of vegetables name.

**RING MIDWAYS SR. SEC. PUBLIC SCHOOL**  
**Main Najafgarh Road, Vipin Garden, New Delhi-110059**

**Assessment For - I Term Assessment - III (A)**

**Class - K.G**

**Subject- G.K./ E.V.S**

**Q1. Fill in the blanks**

1. The leaves are.....
2. The king of all the fruits is .....
3. .... give us wool.
4. Salads are made of ..... and .....
5. .... has eight legs.

**Q2. Tick (✓) the correct answer.**

- |                                   |                |
|-----------------------------------|----------------|
| 1. Which is our National Animal?  | Tiger/Cheetah  |
| 2. Which is the national bird?    | Pigeon/Peacock |
| 3. What is the colour of brinjal? | Black/ Violet  |
| 4. Which fruit has more seeds?    | Papaya/Banana  |
| 5. Chickoo is seedless fruit?     | Yes/No         |

**Activity**

Make X mas tree and colour it.

**RING MIDWAYS SR. SEC. PUBLIC SCHOOL**  
**Main Najafgarh Road, Vipin Garden, New Delhi-110059**

**Assessment For - I Term Assessment - IV (B)**

**Class - K.G**

**Subject- G.K./E.V.S**

**Q.1 Fill in the blanks :-**

1. My .....helps me in doing my home work.
2. .... are red in colour.
3. .... is the king of the forest.
4. .... have colourful wings
5. Printed is used to ..... matter on paper.

**Q.2 Tick (✓) the correct answer :-**

- |  |                 |
|--|-----------------|
| 1. How many lags do you have?                | Two/ Three.     |
| 2. What is the colour of a tomato?           | Red/Orange.     |
| 3. Which is called 'The king of the Jungle?' | Elephant/ Lion. |
| 4. Which is our national Animal?             | Tiger/Cheetah.  |
| 5. What is the colour of strawberry?         | Orange/ Red.    |

**Activity**

**Make Traffic signs on chart paper and colour it.**

**RING MIDWAYS SR. SEC. PUBLIC SCHOOL**  
**Main Najafgarh Road, Vipin Garden, New Delhi-110059**  
**Assessment For - II Perodic Assessment - V (A)**

**Class - K.G**

**Subject- G.K./E.V.S**

**Q.1 Fill in the blanks :-**

1. My favourite indoor game is .....
2. .... Flies in the sky.
3. My Favourite cartoon Character is.....
4. .... is the festival of colours and..... is festival of crackers.
5. When I fall sick, I to the.....

**Q.2 Tick (✓) the correct answer :-**

- |  |                     |
|--|---------------------|
| 1. Which is the insect that makes web?       | Spider/Wasp         |
| 2. The national flower of India?             | Rose/Lotus          |
| 3. Which article is used to toast the bread? | Iron/Toaster        |
| 4. What would you like to eat with bread?    | Butter/Milk         |
| 5. Where should we throw waste materials?    | In dustbin/ In soon |

**Activity**

Draw your favourite ice-cream and colour it.

**RING MIDWAYS SR. SEC. PUBLIC SCHOOL**  
**Main Najafgarh Road, Vipin Garden, New Delhi-110059**

**Assessment For - II Perodic Assessment - VI (B)**

**Class - K.G**

**Subject- G.K./E.V.S**

**Q.1 Fill in the blanks :-**

1. .... brings letters to us.
2. My mum look beautiful in .....
3. French fries are made up of.....
4. We wear woolen cloths in ..... Season.
5. We should drink a glass of ..... every days.


**Q.2 Tick (✓) the correct answer :-**

- |   |                  |
|---|------------------|
| 1. The national flower of India         | Rose/Lotus       |
| 2. What is the colour of milk           | Blue/White       |
| 3. In which you carry you lunch         | Purse/Tiffinbox  |
| 4. Which article is used to watch movie | Television/ Oven |
| 5. Which cloth do we wear on our head?  | Cap/White        |


**Activity**

Paste the picture of a fruit with

No seed



One Seed



**RING MIDWAYS SR. SEC. PUBLIC SCHOOL**  
**Main Najafgarh Road, Vipin Garden, New Delhi-110059**  
**Assessment For - II Term Assessment - VII (A)**

**Class - K.G**

**Subject- G.K./E.V.S**

**Q.1 Fill in the blanks :-**

1. .... give us coconuts.
2. My.....makes yummy food at home.
3. My favourite vegetable is.....
4. .... gives us wool.
5. In olden day.....were used to send mails.

**Q.2 Tick (✓) the correct answer :-**

1. What do you do on sofa? Stand/Sit.
2. What do you use for washing your hair Shampoo/oil.
3. What do you use for cleaning your teeth? Soap/Tooth paste.
4. Which game is played with a dice? Ludo/Cartoon.
5. Which thing you use to write on black board? Pencil/Chalk.

**Activity**

Draw different types of house on chart paper

**RING MIDWAYS SR. SEC. PUBLIC SCHOOL**  
**Main Najafgarh Road, Vipin Garden, New Delhi-110059**  
**Assessment For - II Term Assessment - VIII (B)**  
**Class - K.G**  
**Subject- G.K./E.V.S**

**Q.1 Fill in the blanks :-**


1. I brush my..... twice a day.
2. My mum cooks on.....
3. .... is celebrated on the birth of Jesus
4. .... is the harvest festival of Punjab
5. If I found a cut on my hand. I have to use.....

**Q.2 Tick (✓) the correct answer :-**

1. Who grow crops ? Doctor/Farmer
  2. Who brings our mail? Postman/Police man
  3. What is the colour of milk? Blue/White
  4. What is the shape of sun? Circle/ square
  5. Name any three famous characters of your choice
- 1) .....      2) .....      3) .....

**Activity**


Draw a Sun, Moon, or stars in the boxes



**RING MIDWAYS SR. SEC. PUBLIC SCHOOL**  
**Main Najafgarh Road, Vipin Garden, New Delhi-110059**  
**Assessment For - I Perodic Assessment - I (A)**

**Class - K.G**  
**Subject-Drawing**


**Q1. Colour the Sun**



**Q.2 Colour the umbrella :-**



**Q.4 Colour the Grapes :-**



**Q.4 Colour the softy beautiful :-**



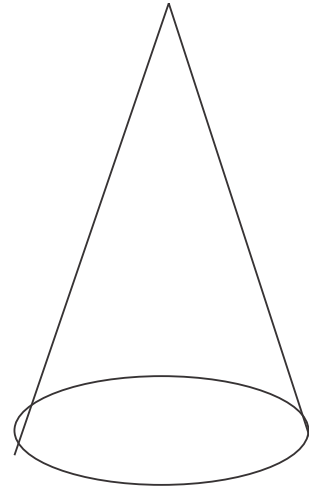

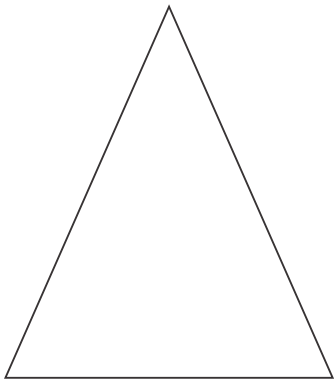
**Activity**

**Make flower with ladyfinger impression on 2x2 cartage sheete**

**RING MIDWAYS SR. SEC. PUBLIC SCHOOL**  
**Main Najafgarh Road, Vipin Garden, New Delhi-110059**  
**Assessment For - I Perodic Assessment - II (B)**

**Class - K.G**  
**Subject-Drawing**

**Q1. Colour the Shapes :-**



**Q .2 Colour it :-**



Q.3 Colour it :-



Q.4 Colour it :-




Activity

1. Make a beautiful chart of vegetables.

**RING MIDWAYS SR. SEC. PUBLIC SCHOOL**  
**Main Najafgarh Road, Vipin Garden, New Delhi-110059**  
**Assessment For - I Term Assessment - III (A)**

**Class - K.G**  
**Subject-Drawing**

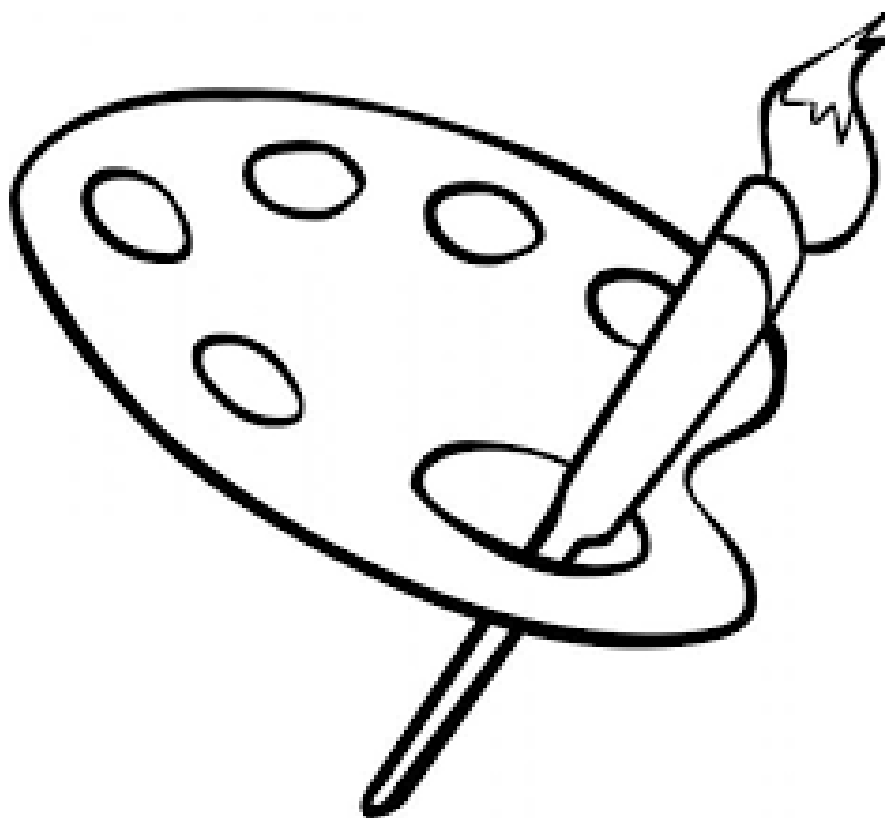
Q1. Colour it.




Q2. Colour the Delicious Cake :-



Q.3 Colour it.



Q.4 Colour it.



Activity

Q.5 Make any one mask, any animal


**RING MIDWAYS SR. SEC. PUBLIC SCHOOL**  
**Main Najafgarh Road, Vipin Garden, New Delhi-110059**  
**Assessment For - I Term Assessment - IV (B)**

**Class - K.G**  
**Subject-Drawing**



**Q1. Colour the Hut mode up of basic shapes beautifully.**



**Q .2 Colour the Rakhi**



**Q.3 Colour it :-**



**Q.4 Colour it :-**




**Activity**

**Q.5 Make a beautiful Butterfly colourful paper.**


**RING MIDWAYS SR. SEC. PUBLIC SCHOOL**  
**Main Najafgarh Road, Vipin Garden, New Delhi-110059**  
**Assessment For - II Perodic Assessment - V (A)**

**Class - K.G**  
**Subject-Drawing**


**Q.1 Colour the Cat and say meow meow**



**Q2. Colour it:-**



**Q.3 Colour the National Flag.**



**Q4. Make a snowmen by cotton.**

**Activity**

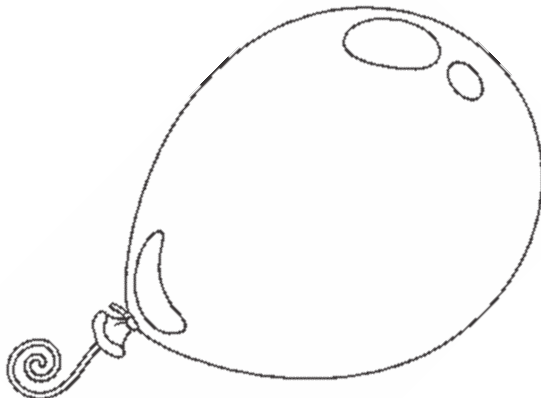
**Q.5 Make a red light on 2x2 cartoge sheet.**

**RING MIDWAYS SR. SEC. PUBLIC SCHOOL**  
**Main Najafgarh Road, Vipin Garden, New Delhi-110059**  
**Assessment For - II Perodic Assessment - VI (B)**  
**Class - K.G**  
**Subject-Drawing**


**Q1. Colour the Funny Joker.**



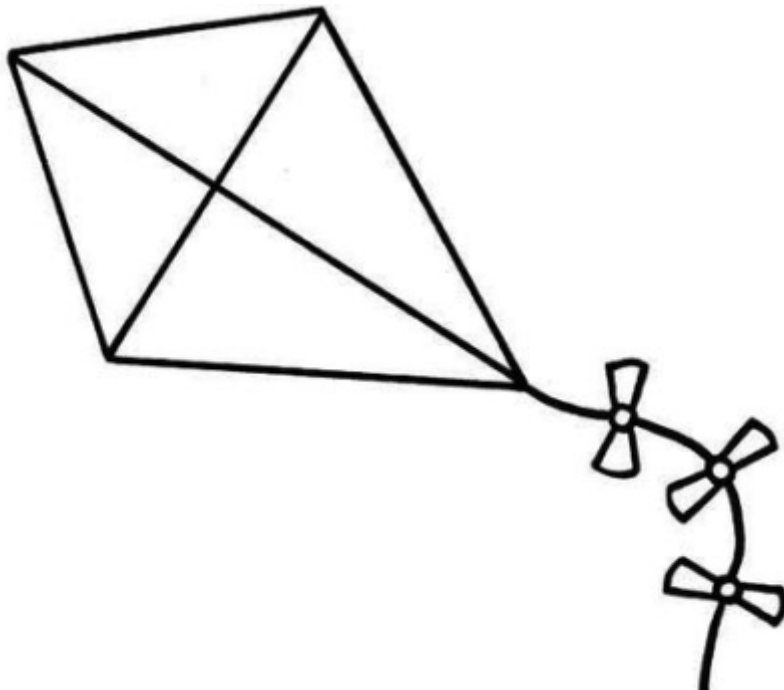
**Q2. Colour it :-**



**Q.3 Colour the beautiful butterfly by crayons.**



**Q.4 Colour the beautiful kite :-**




**Activity**

**Q.5 Make a cap bu paper**

**RING MIDWAYS SR. SEC. PUBLIC SCHOOL**  
**Main Najafgarh Road, Vipin Garden, New Delhi-110059**  
**Assessment For - II Term Assessment - VII (A)**  
**Class - K.G**  
**Subject-Drawing**


**Q1. Colour it :-**




**Q2. Colour the Picture :-**




### Q.3 Colour Holi Festival :-



### Q.4 Colour the Faces !



Happy




Sad

### Activity

### Q.5 Make a X-Mas tree chart

**RING MIDWAYS SR. SEC. PUBLIC SCHOOL**  
**Main Najafgarh Road, Vipin Garden, New Delhi-110059**  
**Assessment For - II Term Assessment - VIII (B)**  
**Class - K.G**  
**Subject-Drawing**

**Q.1 Do colourful colour in caterpillar**




**Q2. Colour the Handsome boy**



**Q.3 Colour it :-**



**Q.4 Colour it :-**



**Activity**

**Q.5 Make a Greeting Card :-**