

RING MIDWAYS SR. SEC. PUBLIC SCHOOL
Main Najafgarh Road, Vipin Garden, New Delhi-110059

Assessment For - I Periodic Assessment - A

Class - VIIth

Subject- Hindi

प्रश्न-1 शुद्ध वाक्य के सामने ☒ तथा अशुद्ध वाक्य के सामने ☒ का निशान लगाइए -

- क - स्पष्ट बोलने की शक्ति के कारण मनुष्य सभी प्राणियों में श्रेष्ठ बन गया ☐
- ख - भाषा का लिखित रूप ही मानक रूप माना जाता है। ☐
- ग - भारतीय संविधान में 16 भाषाओं का मान्यता हैं। ☐
- घ - ध्वनियों को लिखित रूप देने के लिए बनाए गए चिह्न अक्षर कहलाते हैं। ☐

प्रश्न-2 कोष्ठक में से उचित शब्द चुनकर रिक्त स्थान भरिए -

- क - वह साधन है, जिसके द्वारा मन के भाव प्रकट किए जाते हैं। (भाषा / बोली)
- ख - 'भाषा' धातु का अर्थ है (लिखना / बोलना)
- ग - पत्र-लेखन भाषा का (मौखिक / लिखित)
- घ - प्रति वर्ष हिन्दी दिवस (14 सितम्बर / 14 दिसम्बर)

प्रश्न -3 दिए गए शब्दों का वर्ण-विच्छेद कीजिए-

1. अंग्रेजी
2. भावात्मक
3. विद्यालय
4. सेवक

प्रश्न -4 सभी प्रश्नों के उत्तर दीजिए-

1. किसने स्वतंत्रता की चिंगारी सुलगाने में अपनी अस्थियाँ जला दी ?
2. सूर्य, चंद्र, भूगोल और खगोल किसकी महिमा के साक्षी है ?
3. हवेली की छत पर दुलहन क्या कर रही थी ?
4. चंद्रमुखी शब्द का अर्थ बताइए-

प्रश्न-5 रचनात्मक कार्य :-

1. व्याकरण का अर्थ तथा परिभाषा देकर इसके तीन विभाग दशाते हुए एक चार्ट बनाइए।
2. देश के लिए अपनी कुर्बानी देने वाले अमर शहीदों के बारे में अपने माता पिता तथा संगे - संबंधियों से जानकारी प्राप्त कर लिखिए।

RING MIDWAYS SR. SEC. PUBLIC SCHOOL
Main Najafgarh Road, Vipin Garden, New Delhi-110059
Assessment For - I Periodic Assessment - B
Class - VIIth
Subject- Hindi

प्रश्न-1 निम्नलिखित शब्दों पर अनुस्वार अथवा अनुनासिक लिखिए -

हड़डिया	काच
अलकांर	हिंसा
साप	ग्रथ
शकु	ऊचा

प्रश्न-2 दिए गए व्यंजन के उच्चारण स्थान बताओ -

व्यंजन	उच्चारण
क - क, ख, ग, घ, तथा ह, क, ख, ग
ख - प, फ, ब, भ
ग - ड, ज, ण, न, म
घ - व तथा फ

प्रश्न-3 स्वर के कितने भेद होते हैं उनके नाम लिखो-

1.
2.
3.
4.
5.

प्रश्न -4 सभी प्रश्नों के उत्तर दीजिए-

1. इराक की राजधानी कहाँ है ?
2. अनील कहाँ सोया हुआ था ?
3. 'व्योम' शब्द का अर्थ बताइए।
4. ओलंपिन घाटी में किन दो नदियों का संगम है ?

प्रश्न-5 सृजनात्मक गतिविधियाँ -

1. यदि आपके आस पास कागज़ बनाने का कारखाना हो तो वहाँ काम करने वालों से कागज़ बनाने की कार्य विधि के बारे में जानकारी प्राप्त किजिए। तथा लिखिए।
2. हिंदी भाषा के स्वरों के उच्चारण स्थानों को दर्शाते हुए एक चार्ट बनाकर कक्षा के कमरे में लटकाएँ।

RING MIDWAYS SR. SEC. PUBLIC SCHOOL
Main Najafgarh Road, Vipin Garden, New Delhi-110059
Assessment For - I Term Assessment - A
Class - VIIth
Subject- Hindi

प्रश्न-1 स्तंभ 'क' के प्रत्येक शब्द का स्तंभ 'ख' से मिलान किजिए-

स्तंभ क	स्तंभ ख
स्वर्ग	कुरंग, मृग
हिरण	मानव, व्यक्ति
लहु	सुरलोक, अमरपुरी
मनुष्य	चाह, कामना
इच्छा	रुधिर, रक्त
किरण	अंशु, रश्मि

प्रश्न-2 निम्नलिखित शब्दों का विलोम लिखिए-

1. अग्रज
2. गहरा
3. कोमल
4. विरोध
5. वरदान
6. गरमी

प्रश्न-3 सभी प्रश्नों के उत्तर दीजिए-

1. सभी प्रकार के जीव जंतुओं का ध्यान रखने वाला कौन है ?
2. अपने आस पास सदैव किसे रखना चाहिए ?
3. बिखारी ने नब्बे रूपयों वाली पोटली कहाँ छुपा कर रख लिया ?
4. मंदिर का पुजारी कैसा था ?

प्रश्न-4 सृजनात्मक गतिविधियाँ -

1. धृत एव कपटी लोगो से बचने हेतु अपने बड़े-बुजुगो से यथोचित मार्ग दर्शन प्राप्त किजिए तथा अपने विचार लिखिए-
2. मिलते जुलते भाव वाले अन्य दोहो को लिखिए-

RING MIDWAYS SR. SEC. PUBLIC SCHOOL
Main Najafgarh Road, Vipin Garden, New Delhi-110059
Assessment For - I Term Assessment - B
Class - VIIth
Subject- Hindi

प्रश्न-1 संधि-विच्छेद कीजिए।

1. महात्मा
2. प्रत्येक
3. रजनीश
4. स्वागतम

प्रश्न-2 'तत्सत' शब्दों का 'तद्भव' रूप लिखिए-

1. उष्ट्र
2. कर्ण
3. शत
4. दिवस

प्रश्न-3 अनेक शब्दों के लिए एक शब्द लिखिए-

1. जिसका मूल्य न आकाँ जा सके
2. किसी संस्था का प्रधान
3. स्वर का नीचा होना
4. जो किए गए उपकार का न माने

प्रश्न-4 सभी प्रश्नों के उत्तर दीजिए-

1. 'रोबॉट' शब्द का क्या अर्थ है ?
2. 'पर्यावरण' की तुलना किससे की गई है ?
3. 'पर्यावरण' का संतुलन बिगड़ जाने से सबसे ज्यादा दावरा किसपर होता है ?
4. किस प्रकार के व्यक्ति से हर कोई दूर रहना का प्रयास करता है

प्रश्न-5 सृजनात्मक गतिविधियाँ -

1. 'पर्यावरण' का संतुलन बिगड़ने से हमें किन-किन समस्याओं का सामना करना पड़ सकता है, लिखिए
2. "हमेशा गुमसुम तथा उदास दिखने वाले व्यक्तियों की तुलना में हँसमुख शारीरिक तथा मानसिक तौर से ज्यादा स्वस्थ होते हैं।" इस कथन पर अपने विचार लिखिए -

RING MIDWAYS SR. SEC. PUBLIC SCHOOL
Main Najafgarh Road, Vipin Garden, New Delhi-110059
Assessment For - II Periodic Assessment - A
Class - VIIth
Subject- Hindi

प्रश्न-1 प्रत्येक शब्द युग्म के अर्थ लिखिए -

क - तरंग

तुरंग

ख - पथ

पथ्य

प्रश्न-2 निम्नलिखित उपसर्गों सहित दो - दो शब्द बनाइए -

1. उप

2. खुश

3. स्व

4. निर्

प्रश्न-3 निम्नलिखित शब्दों में से मूल शब्द व प्रत्यय अलग किजिए -

1. चिकनाहट

2. सुनवाई

3. बिछौना

4. मार्मिक

प्रश्न-4 सभी प्रश्नों के उत्तर दीजिए-

1. मादान चोरी का आरोप किस पर लगाया गया था ?

2. कृष्ण का शेष देख कर कौन हँस पड़ी ?

3. बिच्छु का स्वभाव कैसा होता है ?

4. मुनिवर के चरणों में कौन गिर पड़ा ?

प्रश्न-5 सृजनात्मक गतिविधियाँ -

1. सूरदास, रसदान व मीरा के चित्र चार्ट पर लगाइए तथा उनके बारे में लिखिए -

2. “सज्जनों के लिए क्षमा सबसे बड़ा अस्त्र है।” इस विषय पर अपने विचार लिखिए -

RING MIDWAYS SR. SEC. PUBLIC SCHOOL
Main Najafgarh Road, Vipin Garden, New Delhi-110059
Assessment For - II Periodic Assessment - B

Class - VIIth
Subject- Hindi

प्रश्न-1 निम्नलिखित समस्त - पदों का विग्रह कर समास का नाम लिखिए -

समस्त - पद	विग्रह	समास का नाम
1. धर्म विमुख		
2. शोकाकुल		
3. अपना - पराया		
4. बेखटके		

प्रश्न-2 निम्नलिखित शब्दों के सामने सजा के भेद लिखिए -

1. मुस्कराहट
2. अनिल
3. बच्चा
4. आलस्य

प्रश्न-3 प्रत्येक वाक्य में से सर्वनाम चुनकर उनके भेद भी लिखिए -

	सर्वनाम	वेद
1. आप कहाँ जा रहे हैं ?		
2. सीता स्वयं गृह कार्य कर लेगी।		
3. किसी ने दरवाजा खटखटाया।		
4. यह उसी की पुस्तक है।		

प्रश्न-4 सभी प्रश्नों के उत्तर दीजिए-

1. दंत के नीचे के भाग को क्या कहते हैं ?
2. छायादार वृक्ष के नीचे शिकारी क्यों आराम करने लगा ?
3. किसकी आँखों में आँसु भर आया ?
4. तीनों चोरो ने सेठ के घर से क्या चुरा लिया ?

प्रश्न -5 सृजनात्मक गतिविधियाँ -

1. आप ने कभी बहेलिए को पक्षी का शिकार करते हुए देखा है। क्या आप की नजर में यह उचित हैं ? इस पर अपने विचार प्रकट कीजिए।
2. मानव मुखकृति का चित्र बनाकर दाँतों के विभिन्न भागों को दशाइए (चार्ट पेपर पर)

RING MIDWAYS SR. SEC. PUBLIC SCHOOL
Main Najafgarh Road, Vipin Garden, New Delhi-110059

Assessment For - II Term Assessment - A

Class - VIIth

Subject- Hindi

प्रश्न-1 लिंग बदलो -

- | | |
|----------|-------------|
| 1. विधवा | 2. गाय |
| 3. बेगम | 4. साधु |
| 5. युवक | 6. प्रिय |
| 7. नागिन | 8. क्षत्रिय |

प्रश्न-2 कोष्ठक में दिए गए उचित कारक को चुनकर वाक्य पूरे कीजिए -

- | | |
|--|--------------|
| 1. राम रावण मारा। | (ने, को, पर) |
| 2. वह दास बनकर दस मिनट आया था। | (में, पर) |
| 3. मोहन रमेश अधिक चालाक है। | (के, से) |
| 4. गरीबो दान - दक्षिणा देना पुण्य का कार्य है। | (को, की) |

प्रश्न-3 निम्नलिखित शब्दों से नामधातु क्रियाएँ बनाइए -

- | | |
|----------|--------------|
| 1. चक्कर | 2. दुख |
| 3. साठ | 4. लाज |
| 5. गर्म | 6. सुस्त |
| 7. हलका | 8. बुद - बुद |

प्रश्न-4 सभी प्रश्नों के उत्तर दीजिए-

1. अर्द्ध रात्रि में प्रेमिका के भवन में कौन आया ?
2. मन की तपन किस चीज से बुझती है ?
3. माँ ने बड़े राजकुमार से जंगल से क्या लाने के लिए भेजा ?
4. छोटे राजकुमार की हत्या किसने की ?

प्रश्न-5 सृजनात्मक गतिविधियाँ :-

1. ढोल, दिया, चाँद, तोता, तथा लोटा का चित्र बनाकर उसमें रंग भरिए।
2. “धन तथा शक्ति की बहुलता मनुष्य को आलसी तथा अहंकारी बना देता है” इसके बारे में अपने विचार दीजिए।

RING MIDWAYS SR. SEC. PUBLIC SCHOOL
Main Najafgarh Road, Vipin Garden, New Delhi-110059
Assessment For - II Term Assessment - B

Class - VIIth
Subject- Hindi

प्रश्न-1 विशिष्टता को रेखांकित करके दिए गए स्थान पर उनके भेद लिखिए- -

1. वह पुस्तक अच्छी है
2. चंचल बच्चे अधिक मेधावी होते हैं।
3. पंजाबी लोग हँसमुख होते हैं।
4. राम दो गलास दूध पीता है।

प्रश्न-2 उचित संबंधबोधक शब्द चुनकर रिक्त स्थान भरिए -

(के साथ, के पीछे, के भीतर, के इर्द-गिर्द)

1. परिवार की समस्याओं को घर ही सुलझाना चाहिए।
2. नगर बाग ही बाग दिखाई दे रहे हैं।
3. अस्पताल एक शिव - मंदिर बना हुआ है।
4. वरुण अपने माता - पिता सर्कस देखने गया।

प्रश्न-3 विराम चिह्नों के नाम लिखो -

1. (“ ”)
2. (-)
3. (0)
4. (:)

प्रश्न-4 सभी प्रश्नों के उत्तर दीजिए-

1. परीभ्रमण किसे कहते हैं ?
2. पुणिमा किस पक्ष के अंत में आती है ?
3. तुर्की में धूम्रपान करने वाले व्यक्ति को कौन - सी सजा दी जाती थी ?
4. गो - माता यमराज को अपने सिंगो पर उठाकर कहाँ घुमाने लगी ?

प्रश्न-5 सृजनात्मक गतिविधियाँ :-

1. “गाय का न केवल धार्मिक दृष्टिकोण से एक महत्वपूर्ण सीमा प्राप्त है बल्कि इसका सामाजिक - आर्थिक महत्व भी है।” इस कथन पर अपने विचार लिखिए
2. चार्ट पेपर पर सूर्य-ग्रहणका चित्र बनाकर रंग भरिए।

RING MIDWAYS SR. SEC. PUBLIC SCHOOL
Main Najafgarh Road, Vipin Garden, New Delhi-110059

Formative Assessment -I

Class - VIIth

Subject-English

Q 1. Under line the nouns & name their kind :-

- 1) Poverty is a curse.
- 2) Always speak the truth .
- 3) Mumbai is a big city .
- 4) The crowd was very big .
- 5) I love my country .

Q.2 Write Plural

- | | |
|------------------------|-------|
| 1) Daughter - in - law | _____ |
| 2) Step - son | _____ |
| 3) Axis | _____ |
| 4) Calf | _____ |
| 5) Half | _____ |
| 6) Child | _____ |

Q.3 Write whether the following sentence have reflexive pronouns or emphatic pronouns

- 1) You study yourself
- 2) I study myself
- 3) I myself can read it
- 4) Mohan himself confessed the truth
- 5) We study ourselves

Q.4 Make a Chart on kinds of noun.

RING MIDWAYS SR. SEC. PUBLIC SCHOOL
Main Najafgarh Road, Vipin Garden, New Delhi-110059
Formative Assessment -II
Class - VIIth

Q 1. Fill in the blanks with correct demonstrative and possessive objective.

- 1) This is _____ laptop
- 2) Put _____ box there in the next room.
- 3) Monica lost _____ job two week ago
- 4) I want to see _____ phone you purchased yesterday.
- 5) Mona gave _____ fun colour pens to his sister

Q.2 Complete the table :-

- 1) Angry
- 2) Pretty
- 3) Jealous
- 4) Afraid
- 5) Beautiful
- 6) Thin
- 7) Precious

Q.3 Write the meaning of the idioms :-

- 1) Under the wether
- 2) Live wire
- 3) A piece of cake
- 4) Let the cat out of the bag
- 5) Not my cup of tea
- 6) Go through fire & water

Q 4. You celebrated the children's day in your school. Write a diary entry of in on A3 Size sheet.

RING MIDWAYS SR. SEC. PUBLIC SCHOOL
Main Najafgarh Road, Vipin Garden, New Delhi-110059

Formative Assessment -III

Class - VIIth

Subject-English

Q 1. Use a suitable modals to complete the following sentence:-

Q 1. Use a suitable modals to complete the following sentence:-

- 1) _____ you join us for a cup of tea?
- 2) Come. I _____ help you lift his carton
- 3) She is following. She _____ be energy with you.
- 4) You _____ bring your own bed for the camp.

Q.2 Use appropriate auxiliary verb :-

- 1) She Should _____ treated by a specialist
- 2) She _____ not play the game of cards
- 3) Arun _____ left the job since last month
- 4) _____ you washed your Clothes

Q.3 Write the 'ing' forms of the following verbs :-

- 1) Put
- 2) Rain
- 3) Hit
- 4) Get

Q 4. Prepare a speech on the importance of planting trees.

RING MIDWAYS SR. SEC. PUBLIC SCHOOL
Main Najafgarh Road, Vipin Garden, New Delhi-110059

Formative Assessment -IV

Class - VIIth

Subject-English

Q 1. Fill in the Following blanks with correct tense form .

- 1) This road _____ to the post office. (lead)
- 2) They _____ (Sit) at the window and _____ (watch) the traffic.
- 3) She _____ (be) married next week
- 4) What you _____ (do) these days ?
- 5) We _____ (learn) enough to pass the exam.

Q.2 Change the voice of following sentences :-

- 1) Sonali Writes a poem.
- 2) They do not fly kites.
- 3) She is preparing tea
- 4) He ran a race
- 5) Who has broken the window pane?
- 6) Open the window.

Q.3 Pick out the noun clauses in the following sentence :-

- 1) I know why he has not come.
- 2) I am what you made me.
- 3) I spend whatever. I earn
- 4) That he will succeed is certain

Q 4. Make a chart on 'phrases'

or

Make a chart on 'clauses'

RING MIDWAYS SR. SEC. PUBLIC SCHOOL
Main Najafgarh Road, Vipin Garden, New Delhi-110059
Formative Assessment -V
Class - VIIth
Subject-English

Q 1. Write the all kind of adverb:-

1)

Q.2 Underline the word adverb & write kind of adverb:-

1) They started late

2) I'm feeling much better.

3) The show begins how

4) Come for word

5) Malinga can bowl fast

6) Open the window.

Q.3 Complete the table :-

1) High	_____	_____
2) Yearly	_____	_____
3) Little	_____	_____
4) Well	_____	_____
5) Often	_____	_____

Q 4. Write a latter to a friend who has failed in the final examination, giving him consolation.

RING MIDWAYS SR. SEC. PUBLIC SCHOOL
Main Najafgarh Road, Vipin Garden, New Delhi-110059

Formative Assessment -VI

Class - VIIth

Subject-English

Q 1. Fill in blanks with preposition :-

- 1) She is not interested _____ music
- 2) He is superior _____ me in age
- 3) He comes _____ a noble family
- 4) Taj Din died _____ starvation
- 5) He ran _____ debt

Q.2 Use Suitable subordinating conjunctions :-

- 1) _____ you are asking for it, I must give it.
- 2) _____ I Feel any doubt, I ask.
- 3) I had reached home _____ it started raining.
- 4) I hear _____ you are emigrating to chanda
- 5) The rabbit run faster _____ the tortoise.

Q.3 Make a chart of preposition using decorative material

or

Q 4. Write a kind of conjunction on A3 size sheet using decorative material

RING MIDWAYS SR. SEC. PUBLIC SCHOOL
Main Najafgarh Road, Vipin Garden, New Delhi-110059

Formative Assessment -VII

Class - VIIth

Subject-English

Q 1. Change the following sentence into reported speech :-

- 1) He said, “shyam is coming”.
- 2) She said, I have done my work”
- 3) he said to me, “ She will write a letter”.
- 4) Mohan said to Rohana, “Are you coming with me”.

Q.2 Change the direct question into reported questions :-

- 1) She asked me , “ What’s for dinner?”
- 2) She asked me , “ Why is mona sad?”
- 3) She asked me , “ When is the party?”
- 4) She asked me , “ Is raj at home?”

Q.3 Answer the following questions :-

- 1) What dose the poem illustrate about pilgrims?
- 2) What did Abel Choose for his job ?
- 3) Who are the most important people to work with ?
- 4) Why did Mr. Peters not use his third wish ?
- 5) Why is family called grumble ?

Q 4. You are sahil class of VII. You have nearly 40 students in your class. Describe the scene of an overcrowded classroom in not more them 100 words

RING MIDWAYS SR. SEC. PUBLIC SCHOOL
Main Najafgarh Road, Vipin Garden, New Delhi-110059
Formative Assessment -VIII

Class - VIIth
Subject-English

Q 1. Answer the following questions :-

- 1) What does the phrase “God great big family” means ?
- 2) Who was eve’s first born son ?
- 3) What kind or relationship do the mallards have ?
- 4) What does Richards represent ?
- 5) Who are the most important people to work with ?

Q.2 Write Meaning :-

- 1) Ambush
- 2) Absorbed
- 3) Veiled
- 4) Affiliated
- 5) Repression
- 6) Horror
- 7) Runt

Q.3 Recently your school held the scholar badge ceremony for the studentd of classes VI & VII. Write a report of the event for your school website in about 150 words in A3 size sheet.

Q 4. Write a story on actions speak louder than words.

RING MIDWAYS SR. SEC. PUBLIC SCHOOL
Main Najafgarh Road, Vipin Garden, New Delhi-110059

Formative Assessment - I

Class - VIIth

Subject-Mathematics

Solve the following questions :-

Q.1 Write a pair of integers whose sum gives (a) a negative integer (b) Zero (c) an integer smaller than both the integers

Q.2 Evaluate

$$2 + (-1) + 3(-2) - 2 + 6(-2)$$

Q.3 Verify $a \times (b+c) = a \times b + a \times c$, taking $a = 1, b = -2, c = 6$.

Q.4 The product of two numbers is -144. One of the numbers is 6. Find the other.

Q.5 The difference of two integers is -5. If one of them is -15, find the other one.

Q.6 Write a pair of negative integers whose difference is -4.

Q.7 Solve the equation :- $\frac{3p-2}{4} + p = \frac{2}{3} + \frac{2p-3}{4}$

Q.8 Divide 48 in two parts such that three times the greater part is 10 less than four times the smaller part.

Q.9 Rajiv is one-third his father's age. Twelve years hence, his father would be twice Rajeev's age. Find their present age.

Q.10 Check whether $p = \frac{1}{2}$ is a solution of $2(p-2)=5$

Activity :-

1. Find the product of a given decimal number with the help of square papers.
2. Express the method of multiplication of fractions (class then) with the help of square paper.

RING MIDWAYS SR. SEC. PUBLIC SCHOOL

Main Najafgarh Road, Vipin Garden, New Delhi-110059

Formative Assessment - II

Class - VIIth

Subject-Mathematics

Q 1. Solve the following questions :-

Q.1 Solve the following

i) $\frac{4}{9} + \frac{2}{8}$ ii) $4\frac{1}{2} + 2\frac{1}{3}$

Q.2 Write four equivalent fractions for the $\frac{1}{3}$ and $\frac{1}{5}$

Q.3 Find the value of $\frac{2}{3}$ of 51.

Q.4 Find the fraction which when multiplied by $\frac{3}{4}$ gives $\frac{66}{4}$

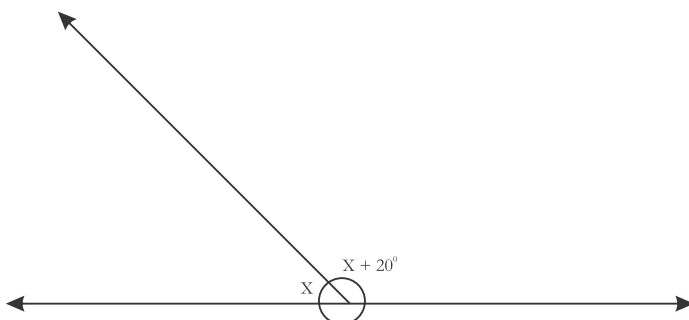
Q.5 The perimeter of a regular hexagon 37.2cm. Find the side of the hexagon.

Q.6 How many types of angles

Q.7 Find the complement angles

(1) 35 (2) 12 (3) 68 (4) 44

Q.8 Find x.



Q. 9 How many transversals can be draw for two given lines ?

Q.10 Find measure of angles, if $(Y-25^\circ)$ and $(Y+30^\circ)$ from a linear pair.

Activiti :-

1) To verify by paper cutting and pasting that if two parallel line are intersecting by a transversal.

2) To verify that sum of angles of a triangle is 180°

RING MIDWAYS SR. SEC. PUBLIC SCHOOL
Main Najafgarh Road, Vipin Garden, New Delhi-110059
Formative Assessment - III
Class - VIIth
Subject-Mathematics

Solve the following questions :-

Q.1 Find the range for data

12, 9, 10, 14, 16, 17, 28, 38.

Q.2 Find the probability of getting an odd number on throwing a dice.

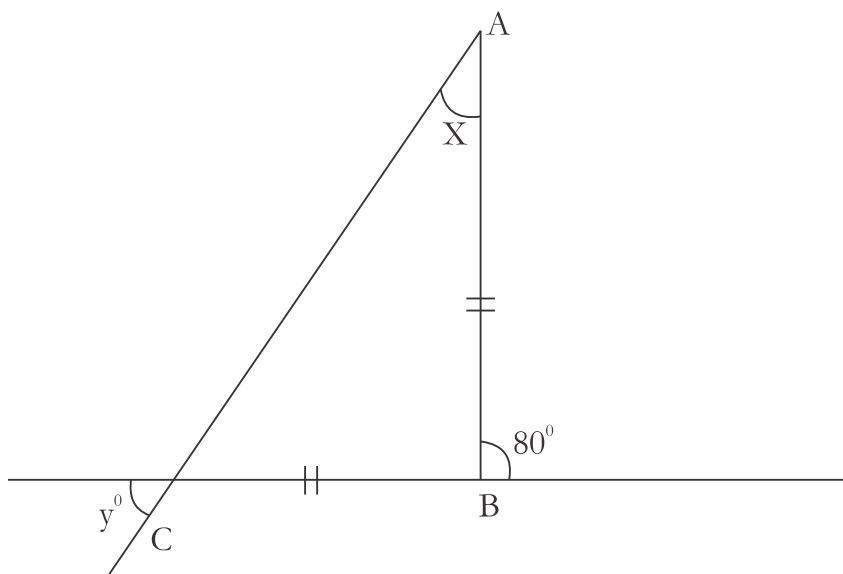
Q.3 Find the probability of Choosing a letter A from the word SATURDAY.

Q.4 Find the mean of first ten multiples of 5.

Q.5 How many types of triangles and explain it.

Q.6 Draw rough sketches for $\triangle ABC$, BM is an attitude in the exterior of the triangle.

Q.7 Find the angles X, Y in the given figures



Q.8 In $\triangle PQR$, $\angle Q = \frac{6}{4} \angle P$ and $\angle R = \frac{3}{4} \angle P$. Find $\angle P$, $\angle Q$ and $\angle R$.

Q.9 $\triangle PQR$ and $\triangle SQR$, right angled at P and S respectively have common

hypotenuse QR. $PQ = SR = 4\text{cm}$ prove that $\angle SQR = \angle PRQ$.

Q.10 Prove that the altitude in an isosceles triangle bisects the base.

Activity :-

1) To get an altitude of a given triangle from any vertex by paper folding and to verify that in a triangle altitudes pass through a single point.

2) To verify Pythagoras theorem.

RING MIDWAYS SR. SEC. PUBLIC SCHOOL
Main Najafgarh Road, Vipin Garden, New Delhi-110059

Formative Assessment - IV

Class - VIIth

Subject-Mathematics

Solve the following questions :-

- Q.1 Find the mean of first ten odd number.
- Q.2 What are the different ways to represent the data
- Q.3 The weights of few boys of class is recorded as below 40 kg, 43kg, 50 kg, 57kg, 60kg find the range of weights.
- Q.4 If two coins are tossed randomly, find the probability of getting head.
- Q.5 What is the probability of picking red colour from the colours of rainbow?
- Q.6 The mean of number 33, $X + 37$, is 35, find the value of X
- Q.7 Write the total number of possible outcome for the rolling two device simultaneously.
- Q.8 The mean, median, mode and range of the following data.
70, 50, 110, 120, 25, 35, 70, 80, 99
- Q.9 What is secondary data ? give example.
- Q.10 What do you understand by term probability?

Activity :-

- 1) To compare the marks obtained in all subject by girls and boys in an examination drawing a double bar graph.
- 2) Make a table how to find the probability using a coin.

RING MIDWAYS SR. SEC. PUBLIC SCHOOL
Main Najafgarh Road, Vipin Garden, New Delhi-110059
Formative Assessment - V
Class - VIIth
Subject-Mathematics

Solve the following questions :-

Q.1 The sides of a triangle are in the ratio 2 : 4 : 5. The perimeter of the triangle 65cm. find the sides of the triangles.

Q.2 Find the fourth proportion to 2, 5 and 6.

Q.3 A dozen bananas cost ₹ 54. How many bananas can be bought for ₹ 162?

Q.4 Ravi has $\frac{1}{4}$ times the sweets that Amit has. Amit has $\frac{3}{2}$ part of what Ravi has.
Who has more sweets? why?

Q.5 What fraction of PQ is RQ?



Q.6 15% increased price of a point is rs. 1380. Find the original price.

Q.7 Rohan makes a profit of 30% by selling a T.V. If the cost of T.V is rs 9000, find the selling price of the T.V.

Q.8 15% increased price of a point is rs. 1380. Find the original price.

Q.9 A man sold his car for ₹ 26,250 at a profit of 5%. How much did the laptop cost him?

Q.10 Calculate The amount paid by Anita if she borrowed ₹ 2 Lakh from the bank for three years at 12% p.a.

Activity :-

- 1) Draw a scale drawing of a square whose sides are 300m choose the scale as 1 cm representing 50m.
- 2) Write note on profit and loss.

RING MIDWAYS SR. SEC. PUBLIC SCHOOL
Main Najafgarh Road, Vipin Garden, New Delhi-110059
Formative Assessment - VI

Class - VIIth

Subject-Mathematics

Solve the following questions :-

- Q.1 Construct a $\triangle ABC$, $\angle C = 60^\circ$, $BC = 4\text{cm}$, $AC = 6\text{cm}$.
- Q.2 Construct a line m , and mark a point S on it.
- Q.3 Write the six elements in a triangle.
- Q.4 Which of the following triangles can be drawn? Justify.
- Q.5 Find the perimeter of regular pentagon whose side is 12cm .
- Q.6 A square washroom of side 5m has to be fixed with tiles. If the size of the tile is 250cm . How many tiles will be required for the washroom?
- Q.7 In rectangular Garden 100 m long and 75m board a walkway 5 m wide is built inside the garden find the area of the walkway.
- Q.8 Find the circumference of a circle having radius 14cm .
- Q.9 Write one English alphabet letter that shows linear symmetry only?
- Q.10 What is the angle of rotation of an
- 1) equilateral triangle 2) Rectangle

Activity :-

- 1) To find the circumference of a circle.
- 2) Verify by paper cutting and pasting, if two parallel lines are cut by a transverse, then each pair of alternate angles are equal.

RING MIDWAYS SR. SEC. PUBLIC SCHOOL
Main Najafgarh Road, Vipin Garden, New Delhi-110059
Formative Assessment - VII
Class - VIIth
Subject-Mathematics

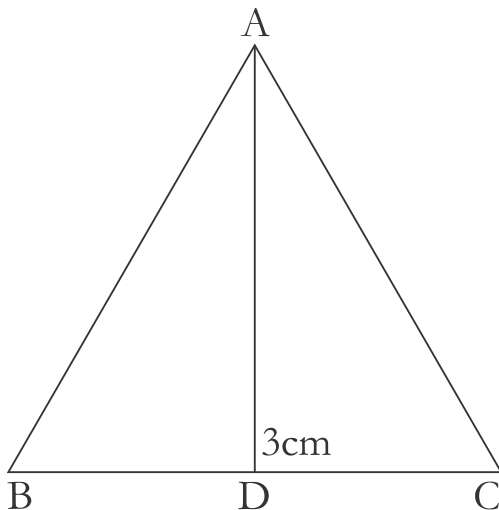
Solve the following questions :-

Q.1 A window of dimensions $2\text{m} \times 4\text{m}$ is fixed on the wall of dimensions $12\text{m} \times 10\text{m}$. Find the total cost of painting the wall @ ₹ 5.50 per m^2


Q.2 The perimeter of a rectangle is 178m. The length of the rectangle is 39m more than the breadth of the rectangle. Find the side of the square whose area is same as that of this rectangle.

Q.3 Find the perimeter of the square whose area is 162 cm^2 .

Q.4 Find BC it area if $\triangle ABC = 14\text{cm}^2$ and $AD = 3\text{cm}$.



Q.5 Find the area to shaded portion



Q.6 What type of triangle $\triangle ABC$ whose side $AB = BC = 5\text{cm}$ and $\angle B = 90^\circ$?

Q.7 Is it possible to construct $\triangle ABC$ if $AB = 4\text{cm} = AC = 6\text{cm}$ and $\angle ABC = 60^\circ$?

Q.8 Draw a shape

1) No line of symmetry. 2) three lines of symmetry.

Q.9 Fill in the blanks :-

1) Figures	Position of rotation	Position of rotation
Square	_____	_____
Circle	_____	_____
Rhombus	_____	_____

Activity :-

1) Draw a line symmetry of the following. (colour it.)

1) Circle 2) Equilateral triangle

2. Construct a $\triangle PQR$ such that $PQ = 4\text{cm}$, $\angle Q = 90^\circ$ and the hypotenuse $PR = 6\text{cm}$

RING MIDWAYS SR. SEC. PUBLIC SCHOOL
Main Najafgarh Road, Vipin Garden, New Delhi-110059
Formative Assessment - VIII

Class - VIIth
Subject-Mathematics

Solve the following questions :-

Q.1 Represent $\frac{-2}{7}$ on the number line.

Q.2 Simplify: $\left(\frac{2}{3}\right)^2 \times \left(\frac{2}{3}\right)^{-4} \times \left(\frac{-3}{2}\right)^2$

Q.3 Write the rational number in ascending order

$$\frac{1}{3}, \frac{1}{4}, \frac{3}{2}, \frac{3}{4}, \frac{2}{3}, \frac{1}{2}$$

Q.4 subtract the sum of $\frac{1}{3}$ and $\frac{1}{5}$ from $\frac{5}{6}$

Q.5 subtract the sum of $(4pq - 10q - p)$ from $(16pq + 12q + 14p)$

Q.6 What should be added to $5n^2 + 6mn + m^2$ to obtain $6m^2 + 6mn$?

Q.7 Find the 8th term of the pattern whose terms are given by rule

1) $n-1$ 2) $n^2 - 2$

Q.8 Write the general term for the following patterns

1) 5, 8, 11, 14..... 2) 4, 7, 10, 13.....

Q.9 Find the value of x in $7^{11} \div 7^x = 7^2$

Q.10 Change $(6^2 \times 6^3)$ into single exponent

Activity :-

1. Verify the law of exponent $x^3 \times x^n = x^{m+n}$ experimentally
2. To draw a cube with dimensions 5cm X 5cm X 5cm on an isometric dot paper

RING MIDWAYS SR. SEC. PUBLIC SCHOOL
Main Najafgarh Road, Vipin Garden, New Delhi-110059
Assessment For - I Periodic Assessment - A
Class - VIIth
Subject-Science

Q.1 What is Stomata ?

Q.2 What is parasites ? explain the type.

Q.3 How are Nutrition Replenished in the Soil ?

Q.4 How get Nutrition in Amoeba write their process?

Q.5 What are the function of small Intestine ?

Q.6 What is Scouring ?

Q.7 How can we get silk ?

Activity - 1)

Collect the fabrics Natural and Synthetic.

Activity - 2)

Write their characteristics and past the sample.

To grow fungi on a bread slice.

1) Take a bread Slice

2) Sprinkle some water on it and leave it in moist place for 2-3 days

(write the observation)

RING MIDWAYS SR. SEC. PUBLIC SCHOOL
Main Najafgarh Road, Vipin Garden, New Delhi-110059
Assessment For - I Periodic Assessment - B
Class - VIIth
Subject-Science

Q.1 Different between celsius scale and fahrenheit scale ?

Q.2 What is sea breeze ?

Q.3 What is land breeze ?

Q.4 List the good conductor of bad conductor of electricity ?

Q.5 Different between Real and Virtual Images ?

Q.6 Uses of curved mirror (spherical mirror) ?

Activity - 1)

- 1) Explain the Images Formation by a convex mirror ?
- 2) To make a model of kaleidoscope ?

RING MIDWAYS SR. SEC. PUBLIC SCHOOL
Main Najafgarh Road, Vipin Garden, New Delhi-110059
Assessment For - I Term Assessment - A
Class - VIIth
Subject-Science

Q.1 What is mineral Acids ?

Q.2 Different between climate and weather ?

Q.3 Explain the three layer of soil ?

Q.4 What are properties of Soil and explain it ?

Q.5 What are the method of Soil conservation ?

Q.6 What is Neutralization ?

1. Write the chemical name of there

- | | |
|--------------|-----------------------|
| 1.) Calium | 2.) Soclum |
| 3.) Potasium | 4.) Zinc 5.) Water |

Activity - 1)

Anlist the different animal and their adaption post with picture also

Activity - 2)

Do you no fats are made of fatty acids ? These acids one found in a aids and other fats that are made up of different foods clother move Information about fatty acid and prepare a report.

RING MIDWAYS SR. SEC. PUBLIC SCHOOL
Main Najafgarh Road, Vipin Garden, New Delhi-110059
Assessment For - I Term Assessment - B
Class - VIIth
Subject-Science

- Q.1 Diagrammatic representation of water on the earth ?
- Q.2 What is source of water ?
- Q.3 What are the water conservation ?
- Q.4 Name the medicinal plant ?
- Q.5 Explain the Biotic components of forest ?
- Q.6 How we can conserve forest write some practices to conserve forest ?

Activity - 1)

Make a model of water cycle ?

Activity - 2)

Explain food chain with the help of diagram ?

RING MIDWAYS SR. SEC. PUBLIC SCHOOL
Main Najafgarh Road, Vipin Garden, New Delhi-110059
Assessment For - II Periodic Assessment - A
Class - VIIth
Subject-Science

Q.1 Write the characteristic of physical change ?

Q.2 What is Crystallisation ?

Q.3 Name the method to obtain pure crystals of common salt from sea water ?

Q.4 write the symbols of some common elements ?

Q.5 Define the pattern of wind flow due to uneven heating on the earth. ?

Q.6 What are cyclones ?

Activity - 1)

Prepare a report on the various cyclones that have struck India in the last 20 years. Collect matter from the Internet and various other sources. ?

Activity - 2)

Getting back sugar from a sugar and water solution. ?

RING MIDWAYS SR. SEC. PUBLIC SCHOOL
Main Najafgarh Road, Vipin Garden, New Delhi-110059
Assessment For - II Periodic Assessment - B
Class - VIIth
Subject-Science

Q.1 What is Respiration ?

Q.2 Different between Inhalation and Exhalation ?

Q.3 Write a type of Respiration ?

Q.4 What is capillaries ?

Q.5 Write the Respiration in plants take place in two ways ?

Q.6 What is pollination ? Describe the pollination Agent ?

Q.7 What the Advantage of vegetative propagation ?

Activity - 1)

Define the heart and write function ?

Activity - 2)

Write the function and fertilisation ?

RING MIDWAYS SR. SEC. PUBLIC SCHOOL
Main Najafgarh Road, Vipin Garden, New Delhi-110059
Assessment For - II Term Assessment - A
Class - VIIth
Subject-Science

Q.1 Define the speed ?

Q.2 Define the Uniform Motion and Non - Uniform motion ?

Q.3 Write the working of An electric Bell ?

Q.4 What is the water cycle ?

Q.5 Define the ground water or Aquifer ?

Q.6 What is wastewater ?

Q.7 How we can Reduce sewage Generation ?

Activity - 1)

Drow the diagram close circuit and open circuit ?

Activity - 2)

Show the time and distance intervals along x and y axis Respectively ?

RING MIDWAYS SR. SEC. PUBLIC SCHOOL
Main Najafgarh Road, Vipin Garden, New Delhi-110059
Assessment For - II Term Assessment - B

Class - VIIth
Subject-Science

Q.1 Name the following :-

1. A small bulb like structure found in yeast is called _____
2. In _____ reproduction a new plant body is formed by a single parent.
3. Male gametes are present in the _____ and female gametes inside the ovary through _____.
4. Plants have a well - developed Transport system called _____.
5. Animals such as earthworms and leeches have tubular structures called _____

Q.2 What are functions of kidney

Q.3 What is Dialysis

Q.4 What is fragmentation

Q.5 Name some natural vegetative reproduction.

Activity 1)

To develop seed germination.

Activity 1)

To demonstrate that water is given out during transpiration.

RING MIDWAYS SR. SEC. PUBLIC SCHOOL
Main Najafgarh Road, Vipin Garden, New Delhi-110059
Assessment For - I Periodic Assessment - A
Class - VIIth
Subject- S . S . T

Q.1 Short answers type questions :-

1. Which is referred to as a global ecosystem ?
2. Into how many layers is mantle divided ?
3. What are in Scriptures ?
4. What do you understand by democracy ?
5. Define Medieval period ?

Q.2 Long Answers :-

1. Write a detailed note on the Medieval Period ?
2. Explain the process of formation & metamorphic rock with examples ?

Activity-1 :-

Make a table and write about different rock and their special characteristics ?

Activity-2 :-

Make an Model of interior structure of the earth :

RING MIDWAYS SR. SEC. PUBLIC SCHOOL
Main Najafgarh Road, Vipin Garden, New Delhi-110059
Assessment For - I Periodic Assessment - B
Class - VIIth
Subject- S . S . T

Q.1 Short answers type questions :-

1. What do you mean by volcano ?
2. why was Razia Unable to rule the sultanate successfully ?
3. Name some rulers of the pala dynasty ??
4. On Which factor is democracy based ?
5. Name any two important land forms made by wind ?

Q.2 Long Answers :-

1. How are beaches and sand bars formed ?
2. Write a short note on chola administration ?

Activity-1 :-

Make a scrapbook on the various land forms discussed in the chapter, detailing their process of formation and examples in India and the world ?

Activity-2 :-

On an outline map of India mark

- (a) Rashtrakutas (b) Palas (c) Paramars (d) Cholas

RING MIDWAYS SR. SEC. PUBLIC SCHOOL
Main Najafgarh Road, Vipin Garden, New Delhi-110059
Assessment For - I Term Assessment - A
Class - VIIth
Subject- S . S . T

Q.1 Short answers type questions :-

1. What is thermo pause ?
2. Explain in brief the system of government of shah Johan ?
3. What is Insolation ?
4. What are Ions ?
5. How did Akber treat the Rajput rules who submitted to him ?

Q.2 Long Answers :-

1. Write the significance of atmosphere ?
2. What are the factors which affect atmospheric pressure ?

Activity-1 :-

Draw a labeled diagram to show the five layers of the atmosphere with their respective heights :-

Sunderban delta, Jog falls, Narmada estuary, Marina Beach, Dal lake.

Activity-2 :-

Aker was a great ruler fine details for his achievements with pictures and prepare a scrapbook.

RING MIDWAYS SR. SEC. PUBLIC SCHOOL
Main Najafgarh Road, Vipin Garden, New Delhi-110059
Assessment For - I Term Assessment - B
Class - VIIth
Subject- S . S . T

Q.1 Short answers type questions :-

1. Define Baoli ?
2. Why is Shah Jahan known as the engineer king ?
3. How are laws made ?
4. Define state Legislature ?
5. What is the role of tertiary health care ?

Q.2 Long Answers :-

1. What are private health services ?
2. How is an ordinary bill passed ?

Activity-1 :-

Write names of government of any five states in India.

- 1) Names of the women chief ministers in India.
- 2) The number of M.L.A in any three states of your choice.

Activity-2 :-

Collect pictures of monuments in India and stick them in your scrapbook. Divide them into categories like temple architecture, Islamic architecture and so on.

RING MIDWAYS SR. SEC. PUBLIC SCHOOL
Main Najafgarh Road, Vipin Garden, New Delhi-110059
Assessment For - II Periodic Assessment - A
Class - VIIth
Subject- S . S . T

Q.1 Short answers type questions :-

1. How are tides caused ?
2. What are grasslands ?
3. What are spring tides ?
4. Why did Hampi become an important city ?
5. Define public opinion ?

Q.2 Long Answers :-

1. Briefly Explain media ethics and accountability ?
2. In what ways tides are usefull to us ?

Activity-1 :-

Make an dam in which show how high tides and low tides are created ?

Activity-2 :-

On an outline map of India mark and name the mordern port cities on the eastern and western coasts.

RING MIDWAYS SR. SEC. PUBLIC SCHOOL
Main Najafgarh Road, Vipin Garden, New Delhi-110059
Assessment For - II Periodic Assessment - B
Class - VIIth
Subject- S . S . T

Q.1 Short answers type questions :-

1. Define communication ?
2. Who are tribals ?
3. Give to explains of Bengali literature ?
4. What do you understand by term advertisements ?
5. What is a stereotype ?

Q.2 Long Answers :-

1. What are economic aspects of gender ?
2. Write the advantage of the railways ?

Activity-1 :-

Collect material and picture of any one of the following tribes. The santhals, the Bhils or the Gaddis. You can write about their language, dress, food and culture.

Activity-2 :-

Cut and past political and social advertisements from news paper.

RING MIDWAYS SR. SEC. PUBLIC SCHOOL
Main Najafgarh Road, Vipin Garden, New Delhi-110059
Assessment For - II Term Assessment - A
Class - VIIth
Subject- S . S . T

Q.1 Short answers type questions :-

1. How is Ladakh accessible ?
2. Discuss the transport in the Ganga - Brahmaputra Basin ?
3. What do you understand by term Bhakti ?
4. Write a short note on shivaji ?
5. What is market

Q.2 Long Answers :-

1. What are the function of a retailer ?
2. What occupations do the people of the Amazon Basin practices

Activity-1 :-

On a outline map of India mark Ganga and its tributaries

Activity-2 :-

Make a list of market around you.

RING MIDWAYS SR. SEC. PUBLIC SCHOOL
Main Najafgarh Road, Vipin Garden, New Delhi-110059
Assessment For - II Term Assessment - B
Class - VIIth
Subject- S . S . T

Q.1 Short answers type questions :-

1. Why was Razia Unable to rule the Sultanate Successfully ?
2. Define State Legislature ?
3. Who are tribals ?
4. Discuss the transport in the Ganga - Brahmaputra Basin ?

Q.2 Long Answers :-

1. Write a detailed note on the Medieval period ?
2. What are the functions of a retailer ?

Activity-1 :-

Make a working Model of any one topic that is related to your geography book .

Activity-2 :-

Make working on any topic from your book.

RING MIDWAYS SR. SEC. PUBLIC SCHOOL
Main Najafgarh Road, Vipin Garden, New Delhi-110059
Assessment For - I Periodic Assessment - A
Class - VIIth
Subject- Sanskrit

प्रश्न-1 निम्नलिखित प्रश्नों के उत्तर पूर्ण वाक्य में लिखिए -

- क. अश्व कुत्र धावति ?
- ख. गजौ कुत्र चलतः ?
- ग. धावकाः कुत्र धावन्ति ?
- घ. वृक्षेषु के निवसन्ति ?
- ङ. तडागे के तरन्ति ?

प्रश्न-2 सर्वनाम पद का प्रयोग करके रिक्त स्थान भरिए -

- क. ----- गजः अस्ति ।
- ख. ----- बालिका अस्ति ।
- ग. ----- के सन्ति ।
- घ. ----- बालिकाः गच्छन्ति ।
- ङ. ----- कमलानि सन्ति ।

प्रश्न-3 मिलान कीजिए -

अ	ब
क. एष :	अजा अस्ति
ख. एषा	मक्षिका अस्ति ।
ग. सा	गजः चलति
घ. ते	बालकौ धावतः
कृ ता :	बालिके नृत्यतः
च. तौ	कन्या वदति
छ एतानि	पत्राणि सन्ति

प्रश्न-4 अधोलिखित शब्दों स्त्रीलिङ्ग रूप लिखें-

क. एष :

ख. सः

ग. तौ

घ. ते

क्रियात्मक कार्य -

1. उद्यान का चित्र बनाकर पाँच वाक्य लिखो ।

2. प्रार्थना का चित्र बनाकर श्लोक लिखो ।

RING MIDWAYS SR. SEC. PUBLIC SCHOOL
Main Najafgarh Road, Vipin Garden, New Delhi-110059
Assessment For - I Periodic Assessment - B
Class - VIIth
Subject- Sanskrit

प्रश्न-1 विभक्ति और वचन बताएँ :-

शब्द	विभक्ति	वचन
क. अजे	-----	-----
ख. छात्रे	-----	-----
ग. गजौ	-----	-----
घ. वने	-----	-----
ङ. फले	-----	-----

प्रश्न-2 मध्यम पुरुष के शब्दों का प्रयोग करके रिक्त स्थान भरिए -

- क. ----- गच्छसि ।
ख. ----- पठथः ।
ग. ----- खादथ ।
घ. ----- क्रीडस ।
ङ. ----- वदथ ।

प्रश्न-3 मिलान कीजिए -

अ	ब
क. त्वम्	पुस्तकं पठथ
ख. युवाम्	क्षेत्रे धावसि
ग. यूयम्	आपणं गच्छथः
घ. सः	क्रीडा क्षेत्रे क्रीडति
ङ. तौ	चलयित्रं पश्यतः

प्रश्न-4 संस्कृत में अनुवाद कीजिए -

क. मैं किसान हूँ।

ख. वह मेरा मित्र हैं।

ग. तुम क्या खाते हो।

घ. वह लड़का कहाँ जाता हैं।

ड. लड़के मैदान में दौड़ते हैं।

क्रियात्मक कार्य :-

1. देश के वीर सैनिकों के चित्र चार्ट पर लगाइए।

2. कक्षा का चित्र बनाकर रंग भरिए।

RING MIDWAYS SR. SEC. PUBLIC SCHOOL
Main Najafgarh Road, Vipin Garden, New Delhi-110059
Assessment For - I Term Assessment - A
Class - VIIth
Subject- Sanskrit

प्रश्न-1 वाक्यों को शुद्ध कीजिए :-

क. रामः जलम् अपिवन् ।

ख. ते ईश्वरम् अनमत् ।

ग. तो प्रातः न अभ्रमन् ।

घ. वनेषु सिंहः अग्रजत् ।

ङ. बालकाः उद्याने अगच्छः ।

प्रश्न-2 निम्नलिखित धातुओं के लट् - लकार प्रथम पुरुष के रूप लिखो :-

<u>धातु</u>	<u>एकवचन</u>	<u>द्विवचन</u>	<u>बहुवचन</u>
क. गम्
ख. पठ्
ग. नम्
घ. पिब्
ङ. धाव्

प्रश्न-3 संस्कृत में अनुवाद कीजिए -

क. वह स्कूल गई ।

ख. माता ने खाना बनाया ।

ग. बच्चे स्कूल गए ।

घ. उनके चार पुत्र थे ।

ङ. सैनिकों ने देश की रक्षा की ।

प्रश्न-4 नीचे लिखे धातु रूपों के लकार बदलें -

लट्

लङ्

क. पठसि

ख. लिखतः

ग. पठथः

घ. खादथः

ङ. वदथ

क्रियात्मक कार्य : -

1. संस्कृत के शब्दों का शब्दकोष बनाइए।
2. फलो का चित्र चार्ट पर लगाकर उनके नाम संस्कृत में लिखो।

RING MIDWAYS SR. SEC. PUBLIC SCHOOL
Main Najafgarh Road, Vipin Garden, New Delhi-110059
Assessment For - I Term Assessment - B
Class - VIIth
Subject- Sanskrit

प्रश्न-1 निम्नलिखित धातुओं को लट् - लकार के उचित रूपों द्वारा वाक्य पूरें कीजिए :-

- क. त्वत् जले कमलम् (दृश)
ख. युवाम् समुद्र तटे (भ्रम्)
ग. त्वं प्रातः कुत्र (गम्)
घ. वर्षा काले मयूराः वने (नृत)
ङ. बालिका अद्य विद्यालयं न (गम्)

प्रश्न-2 हिन्दी में अनुवाद कीजिए -

- क. अहम् स्वये जलम् अयच्छम्।
ख. अहम् सरोवरे अतरम्
ग. वयम् क्रिकेटम् अखेलाम्।
घ. वयम् नगरम् अभ्रमाम
ङ. अहम् सदा सत्यं अवदाम्।

प्रश्न-3 मूल धातु पुरुष और वचन लिखिए :-

<u>पद</u>	<u>धातु</u>	<u>पुरुष</u>	<u>वचन</u>
क. अपठम्
ख. अकरोः
ग. अहसः
घ. अलिखम्
ङ. अक्रीडत

प्रश्न-4 संस्कृत में अनुवाद कीजिए -

क. हम लोगों ने पाठ याद किया ।

ख. हम दोनों ने दूरदर्शन देखा ।

ग. मैंने फल खाया ।

घ. हम लोग नदी में तैरे ।

ङ. उसने गुरु को प्रणाम किया ।

क्रियात्यक कार्य :-

1. दशरथ के चार पुत्र का चित्र लगाकर उनके नाम लिखो-

2. हमारे देश का नाम किसके नाम पर पड़ा उसका चित्र लगाकर नाम लिखो-

RING MIDWAYS SR. SEC. PUBLIC SCHOOL
Main Najafgarh Road, Vipin Garden, New Delhi-110059
Assessment For - II Periodic Assessment - A
Class - VIIth
Subject- Sanskrit

प्रश्न-1 द्विवचन और बहुवचन के वाक्य बनाइए -

- क. सा रंगमंचे नर्तिष्यति ।
- ख. अश्वः धाविष्यति ।
- ग. जले हंस तरिष्यति ।
- घ. रामः दुग्धम् पास्थति ।
- ङ. रमा अध गृहम् गमिष्यति ।

प्रश्न -2 धातुओं के लट् - लकार के उचित रूपों से रिक्त स्थानों की पूर्ति कीजिए :-

- क.सः जलं । (पा)
- ख. ते नगरे । (भ्रम्)
- ग. त्वं कवितां । (पठ)
- घ. यूयम् फलानि । (खा)
- ङ. तौ क्षेत्रे । (धाव)

प्रश्न-3 संस्कृत भाषा में अनुवाद कीजिए -

- क. रमेश दूध पीएगा ।
- ख. तुम कहाँ जाओगी ।
- ग. तुम लोग क्या पढ़ोगे ।
- घ. तुम दोनों क्या खाओगे ?
- ङ. तुम लोग मैदान में दौड़ोगे ।

प्रश्न-4 मूल धातु पुरुष और वचन लिखिए -

क. लेखिष्यसि -

ख. पास्याति -

ग. अस्मि -

घ. गमिष्याव -

ङ. करिष्याम -

क्रियात्मक कार्य :-

1. पर्वत व मेघ का चित्र बनाकर रंग भरिए -
2. गर्मियों की छुट्टियों में आपने क्या - 2 किया लिखिए।

RING MIDWAYS SR. SEC. PUBLIC SCHOOL
Main Najafgarh Road, Vipin Garden, New Delhi-110059
Assessment For - II Periodic Assessment - B
Class - VIIth
Subject- Sanskrit

प्रश्न-1 धातु के लकार बदलें।

धातु	लट्	लृट्	लङ्
क. पा	यिबति
ख. नी	नश्यसि
ग. दृश्	अपश्यत
घ. लिख्	लोखिष्यामि
ङ. स्था	तिष्ठति

प्रश्न-2 उदाहरण के साथ क्रियापद कीजिए -

उदाहरण : - मालाकारः मालाम् गुम्फतु

- क. भक्ताः देवालयम् । (गम्)
ख. कन्ये गीतम् । (गै)
ग. महिलाः भोजनम् । (पच्)
घ. सैनिकौ देशम् । (रक्ष्)
ङ. छात्रः आचार्य । (नम्)

प्रश्न-3 हिन्दी भाषा में अनुवाद कीजिए -

- क. भक्तः कृष्णम् नमतु।
ख. कृषकः क्षेत्रं गच्छतु।
ग. महिलाः भोजनं पचन्तु।
घ. भक्ताः इश्वरं नमन्तु।

ड. फलानि मधुराणि सन्तु ।

प्रश्न-4 लोट् - लकार के प्रथम पुरुष के रूप द्वारा तालिका पूरी कीजिए :-

<u>धातु</u>	<u>एकवचन</u>	<u>द्विवचन</u>	<u>बहुवचन</u>
क. भू
ख. कूज्
ग. पठ
घ. गम्
ड. धाव्

क्रियात्मक कार्य :-

1. किसी धार्मिक स्थता वर्णन अपने शब्दों में लिखो ।
2. पाँच फलो के चित्र बनाकर रंग भरे व उनके नाम संस्कृत में लिखे ।

RING MIDWAYS SR. SEC. PUBLIC SCHOOL
Main Najafgarh Road, Vipin Garden, New Delhi-110059
Assessment For - II Term Assessment - A
Class - VIIth
Subject- Sanskrit

प्रश्न-1 हिन्दी भाषा में अनुवाद कीजिए -

- क. त्वम् गृह - कार्य कुरु।
- ख. त्वम् जलम् आनय्।
- ग. सर्वे छात्रा प्रथनायै कीडा क्षेत्रे गच्छन्।
- घ. वयमपि कक्षाध्यायकेन सह तत्र गच्छाय।
- ङ. त्वम् विद्यालयं गच्छ।

प्रश्न-2 बहुवचन में बदलिए -

- क. त्वम् गृह - कार्य कुरु।
- ख. त्वम् जलम् आनय्।
- ग. त्वम् अग्रे अगच्छ।
- घ. त्वं क्रीडनाय उद्यानं गच्छ।

प्रश्न-3 क्रिया पदों को शुद्ध कीजिए -

- क. यूयम् पाठम् स्मर।
- ख. त्वम् जलम् आनयताम्
- ग. वयं सर्वे पंक्तौ अतिष्ठत्।
- घ. यूयम् प्रज्ञाः स्तम्

प्रश्न-4 हिन्दी भाषा में अनुवाद कीजिए -

- क. किं अहम् जलम् आनयामि ?
- ख. कं वयम् क्रीडाक्षेत्रं गच्छाम।

ग. वयं दुष्टान् नाशयाम् ।

घ. किं आवां बीजानि वपाव ।

ङ. किं अहम् कथां श्रावयाणि ।

क्रियात्मक कार्य :-

1. परिवार के सभी सदस्यों की फोटो लगाकर सजाइए ।
2. उपवन का वाक्य बनाकर पाँच वाक्य संस्कृत में लिखिए ।

RING MIDWAYS SR. SEC. PUBLIC SCHOOL
Main Najafgarh Road, Vipin Garden, New Delhi-110059
Assessment For - II Term Assessment - B
Class - VIIth
Subject- Sanskrit

प्रश्न-1 निम्न शब्दों के विभक्ति व वचन लिखें :-

शब्द	विभक्ति	वचन
क. भ्रमणाय	-----	-----
ख. दुग्धम्	-----	-----
ग. मध्यम्	-----	-----
घ. स्वास्थ्याय	-----	-----
ङ. अस्माकम्	-----	-----

प्रश्न-2 बहुवचन में बदलिए :-

- क. त्वम् कुत्र अगच्छः ?
ख. अहं भोजनं न खादिष्यपि।
ग. त्वं पौष्टिकं भोजनं खादेः
घ. अहम् तु व्यायामं करोमि।
ङ. मम मित्र तु बलिष्ठः अस्ति।

प्रश्न-3 रिक्त स्थानों की पूर्ति कीजिए।

- क. अत्र वि विधा रूपाः वसन्ति।
ख. ऋतूनां जनकः अस्ति।
ग. हिमालयः भारतस्य उत्तर दिशायां।
घ. अत्र मेघाः.....।
ङ. अस्मात् हिमालयात् अनेकाः.....।

प्रश्न-4 सन्धि विच्छेद कीजिए :-

क. हिमालयः	=	+
ख. एकस्मिन्	=	+
ग. पर्यतनस्थलानि	=	+
घ. उन्नतः	=	+
ङ. अत्रैव	=	+

क्रियात्मक कार्य :-

1. हिमालय का चित्र बनाकर पाँच वाक्य लिखिए।
2. किसी पालतु जानवर का चित्र बनाकर पाँच वाक्य संस्कृत में लिखें।

RING MIDWAYS SR. SEC. PUBLIC SCHOOL
Main Najafgarh Road, Vipin Garden, New Delhi-110059

Formative Assessment - I

Class - VIIth

Subject- Drawing

Answers the following questions :

Q.1 Write 2 Natural colour.

Q.2 What is secondary colour?

Q.3 What is Tertiary or intermediate colours. Give some example also.

Q.4 What is Grayed colour?

Activity

Q.1 Make decorative door hanging.

Q.2 Make decorative tooth brush holder.

Material required :-

1. Shampoo / Powder container

2. Pencil, paper knife

3. Scissors, glass paint

4. Wooden stick

5. Woll

6. Bead

7. Black marker

RING MIDWAYS SR. SEC. PUBLIC SCHOOL
Main Najafgarh Road, Vipin Garden, New Delhi-110059
Formative Assessment - II
Class - VIIth
Subject- Drawing

Answers the following :

Q.1 What is Tints ?

Q.2 What is Shudes ?

Q.3 What is the colour ?

Q.4 What is water colour ?

Activity

1 Make hand fan

2. Make paper straw doll

Material required :-

1. Handmate sheet

2. Pencile, scissors

3. Adhesive

4. Cardboard

5. Stapler

6. Aida Cloth

7. Board Ribbon

8. Wooden Stick

9. News paper

10. Brusher

11. Black fabric color

RING MIDWAYS SR. SEC. PUBLIC SCHOOL
Main Najafgarh Road, Vipin Garden, New Delhi-110059

Formative Assessment - III

Class - VIIth

Subject- Drawing

Answers the following :

Q.1 What is Transparent water colour ?

Q.2 What is Opaque water colour ?

Q.3 Write secondary colour .

Red + Yellow _____

Yellow + Blue _____

Blue + Red _____

Activity

Q.1 Make Mask

Q.2 Make Photo Frame

Material required :-

Card board

Pencil, scissors, scale, Glue, Tissue paper

RING MIDWAYS SR. SEC. PUBLIC SCHOOL
Main Najafgarh Road, Vipin Garden, New Delhi-110059

Formative Assessment - IV

Class - VIIth

Subject- Drawing

Answers the following :

Q.1 Draw the Ashok chakra and write the total numbers of liner in it

Q.2 Write tertiary colour .

Red + Yellow + Orange _____

Yellow + Blue + Green _____

Blue + Red + Violet _____

Activity

1. Make ice cream sticks lamb shade.
2. Make Spray printing

Material required :-

1. Printed hexagon shape
2. Ice Cream Stick
3. Bulb and holder
4. T-shirts
5. Pencil - eraser
6. Spray colour
7. paper knife
8. News paper
9. White card Sheet
10. fabric colours.

RING MIDWAYS SR. SEC. PUBLIC SCHOOL
Main Najafgarh Road, Vipin Garden, New Delhi-110059
Formative Assessment - V
Class - VIIth
Subject- Drawing

Answers the following :

Q.1 What is “Texture”

Q.2 What is “Shading”

Q.3 Write the name of drawing material

Activity

1. Make poster save water & Tree.
2. Make card for Teacher’s day and Mother’s day

Material Required -

1. A-3 Size Sheet
2. Water or poster colour.
3. Pencil, eraser

RING MIDWAYS SR. SEC. PUBLIC SCHOOL
Main Najafgarh Road, Vipin Garden, New Delhi-110059
Formative Assessment - VI
Class - VIIth
Subject- Drawing

Answers the following question :

Q.1 Write 4 Principal of art.

Q.2 What is the full form of “VIBGYOR”?

Q.3 Write four elements of art.

Activity

1. Make Kalamkari Painting.

Material required :-

1. White Sheet

2. Black pointed marker.

RING MIDWAYS SR. SEC. PUBLIC SCHOOL
Main Najafgarh Road, Vipin Garden, New Delhi-110059

Formative Assessment - I

Class - VIIth

Subject- Computer

Q.1 Answers the following question :

1. What is the different between Net and Wed ?
2. What is a client and a server ?
3. Describe the electronic mail ?
4. Write four tips while using antivirus.
5. Write the full form the following.

Q.2 Define the following.

- | | |
|---------------|-----------------|
| 1. IP _____ | 4. URL _____ |
| 2. TCP _____ | 5. ISP _____ |
| 3. HTTP _____ | 6. E-mail _____ |

Activity

1. Make a chart on the topic role of Internet in every day life.

Or

2. Make a list of name of any 4 antivirus.

- | | |
|----------|----------|
| 1. _____ | 2. _____ |
| 3. _____ | 4. _____ |

RING MIDWAYS SR. SEC. PUBLIC SCHOOL
Main Najafgarh Road, Vipin Garden, New Delhi-110059
Formative Assessment - II
Class - VIIth
Subject- Computer

Q.1 Answers the following question :

1. What is Networking? What are the different type of network?
2. What the advantage and disadvantage of Networking.
3. What do you know about wireless technology?
4. How bluetooth is useful?
5. Name some Network software.

Activity

1. Make a model on any one them

- i) Star topology
- ii) Bus topology
- iii) Ring topology

or

2. Make a list of mobile phone models that can use wi fi Internet. You can take the help Internet.

RING MIDWAYS SR. SEC. PUBLIC SCHOOL
Main Najafgarh Road, Vipin Garden, New Delhi-110059
Formative Assessment - III
Class - VIIth
Subject- Computer

Q.1 Answers the following question :

1. What do you mean by DBMS ?
2. How Record are useful for database ?
3. What kind of problem you can face while handline files manually ?
4. What do you know about MS access ?
5. Can you edit the data type in datasheet view ?
6. What is primary key ?

Activity

1. Computer a database with a spreadsheet and then make a sheet note on it.

or

2. Create a database of any of your six friends including their names, DOB, telephone numbers and address and take out the print.

RING MIDWAYS SR. SEC. PUBLIC SCHOOL
Main Najafgarh Road, Vipin Garden, New Delhi-110059
Formative Assessment - IV
Class - VIIth
Subject- Computer

Q.1 Answers the following question :

1. What is the importance of query?
2. What do you mean by calculated field and expression?
3. How report can be displayed?
4. Explain Query criteria.
5. Name the three way to view form in MS Access.

Activity

1. Make a chart topic of Query criteria.
2. Make a chart topic of data type .

RING MIDWAYS SR. SEC. PUBLIC SCHOOL
Main Najafgarh Road, Vipin Garden, New Delhi-110059
Formative Assessment - V
Class - VIIth
Subject- Computer

Q.1 Answers the following question :

1. What is a Markup language ?
2. Describe the head, title and body of a HTML document.
3. How the next of the paragraph can be aligned in HTML
4. Define with examples various attributes present in font tag
5. What do you mean by heading levels ?

Activity

1. Execute all HTML codes give in the chapters by your self on the computer. Take the printout of all HTML program and their out puts.
2. Make a chart how to create HTML document.

RING MIDWAYS SR. SEC. PUBLIC SCHOOL
Main Najafgarh Road, Vipin Garden, New Delhi-110059
Formative Assessment - VI
Class - VIIth
Subject- Computer

Q.1 Answers the following question :

1. Write the part of a flash document.
2. What are the features of flash ?
3. Explain erase mode option.
4. How can you change the shape size of brush ?
5. Write the step to save a flash document.

Activity

1. Names the tools and draw ions also

To Zoom in

To insert text

To pick colour from existing object

To select on object by forming a free line around them.

or

2. Find some more computer programming languages and write them in your notebook.

RING MIDWAYS SR. SEC. PUBLIC SCHOOL
Main Najafgarh Road, Vipin Garden, New Delhi-110059
Formative Assessment - VII
Class - VIIth
Subject- Computer

Q.1 Answers the following question :

1. What is the work of electronic circuit in the printer ?
2. How many layers of plastic sheets are there in a key board to detect the key pressed ?
3. What is the Internet
4. What is the Host Servers ?
5. What is the work of ISP ?

Q.2 Define the following.

- a) Primary key
- b) Memo filed

Activity

1. Arrange any old and un-usable mouse. Open it and see in side it cimpare it with the picture given in this chapter and draw also.

or

2. Open You Tube and watch videos and How the Internet work. Write down step on your chart paper.

RING MIDWAYS SR. SEC. PUBLIC SCHOOL
Main Najafgarh Road, Vipin Garden, New Delhi-110059

Formative Assessment - VIII

Class - VIIth

Subject- Computer

Q.1 Answers the following question :

1. What is the streaming media ?
2. What are the source required for podcasting ?
3. What do you about webcast.
4. What are the step to set Live streaming on You Tube ?
5. How can you earn money from Live streaming ?

Activity

1. Make a chart paper topic of webcast.
or
2. Write down step to start padcasting and make diagram