

RING MIDWAYS SR. SEC. PUBLIC SCHOOL
Main Najafgarh Road, Vipin Garden, New Delhi-110059
Assessment For - I Periodic Assessment - A
Class - VIth
Subject- Hindi

प्रश्न-1 प्रत्येक भाषा के सामने उसकी लिपि का नाम लिखिए:-

| भाषा | लिपि |
|-------------|-------|
| 1. हिन्दी | |
| 2. मराठी | |
| 3. पंजाबी | |
| 4. अंग्रेजी | |
| 5. संस्कृत | |

प्रश्न-2 निम्नलिखित शब्दों को शुद्ध करके लिखिए-

1. लीपी
2. हीन्दी
3. वयाकरण
4. समाजीक
5. मुखिक

प्रश्न-3 निम्नलिखित शब्दों के एक-एक पर्यायवाची शब्द लिखिए-

1. लालच
2. हरि
3. शीश
4. अनेक
5. सुरबाला
6. देव

प्रश्न-4 निम्नलिखित शब्दों का वर्ण-विच्छेद कीजिए:-

1. गहन -
2. पुष्प -
3. घर -
4. कमल -
5. माला -

प्रश्न-5 सृजनात्मक गतिविधियाँ :-

1. पुष्प की अभिलाषा को अपने शब्दों में गद्य रूप में लिखिए।
2. आतंकवाद से प्रभावित कुछ राज्यों के नाम लिखिए।

RING MIDWAYS SR. SEC. PUBLIC SCHOOL
Main Najafgarh Road, Vipin Garden, New Delhi-110059

Assessment For - I Periodic Assessment - B

Class - VIth

Subject- Hindi

प्रश्न-1 निम्नलिखित संयुक्त व्यंजनों से युक्त शब्द लिखिए :-

1. क्ष -
2. त्र -
3. झ -
4. श्र -

प्रश्न-2 प्रत्येक शब्द में उचित सीान पर अनुस्वार (·) अथवा अनुनासिक (ँ) का प्रयोग करके लिखिए:-

1. रण -
2. सज्ञा -
3. वश -
4. मुह -
5. गाव -
6. ऊचा -

प्रश्न-3 निम्नलिखित शब्दों के समानार्थक शब्द लिखिए:-

1. चेष्टा -
2. तरु -
3. सराहना -
4. अल्पाहार -
5. सन्नाटा -

प्रश्न-4 निम्नलिखित विशेषणों से भाववाचक संज्ञाएँ बनाइए:-

1. कोमल -
2. मधुर -

3. सुन्दर -
4. एक -
5. कुटिल -
6. समीप -

प्रश्न-5 निम्नलिखित वाक्यों से सर्वनाम शब्द छांटकर लिखिए:-

1. अपना काम स्वयं करना चाहिए।
2. सुरेन्द्र का कुछ खो गया है।
3. आप आकर मदद कीजिए।
4. मेज पर खाना है, वह ले आओ।

प्रश्न-6 सृजनात्मक गतिविधियाँ :-

1. 'वृक्षारोपन के लाभ' और वन विनाश से हानियों के बारे में लिखिए।
2. अपने आस-पास किसी ऐसे व्यक्ति का पता लगाइए जिसने काफी-संघर्ष के बाद किसी बड़े लक्ष्य को प्राप्त किया हो व उसके में लिखिए।

RING MIDWAYS SR. SEC. PUBLIC SCHOOL
Main Najafgarh Road, Vipin Garden, New Delhi-110059
Assessment For - I Term Assessment - A
Class - VIth
Subject- Hindi

प्रश्न-1 निम्नलिखित शब्दों का संधि-विच्छेद कीजिए:-

1. विद्यालय = +
2. छात्रावास = +
3. भोजनालय = +
4. सत्याग्रह = +
5. परोपकार = +

प्रश्न-2 निम्नलिखित शब्दों के तत्सम रूप लिखिए:-

1. कुआँ -
2. दाँत -
3. बहू -
4. पाँच -
5. दिन -

प्रश्न-3 निम्नलिखित संज्ञाओं से विशेषण बनाइए:-

1. यदु -
2. मधु -
3. रघु -
4. दनु -
5. वसु -
6. मनु -

प्रश्न-4 नीचे दिए गए शब्दों के अर्थ स्पष्ट कीजिए:-

1. सुगंध -
2. सुगम -
3. सुकर्म -
4. सुमति -

प्रश्न-5 सृजनात्मक गतिविधियाँ

1. राष्ट्रीय तथा अन्तर्राष्ट्रीय स्तर पर किन-किन खेलों का आयोजन किया जाता है लिखिए।
2. रहीम, कबीर तथा तुलसीदास आदि के दोहे लिखिए।

RING MIDWAYS SR. SEC. PUBLIC SCHOOL
Main Najafgarh Road, Vipin Garden, New Delhi-110059

Assessment For - I Term Assessment - B

Class - VIth

Subject- Hindi

प्रश्न-1 निम्नलिखित प्रश्नों के उत्तर दीजिए:-

1. 'खेल' शब्द का क्या अर्थ है ?
2. आठों ग्रहों में से कौन सा ग्रह अद्वितीय है ?
3. वेणुवादक कैसा व्यक्ति था ?
4. पुष्प किसका आभूषण नहीं बनना चाहता था ?
5. जिप्सी कौन था ?

प्रश्न-2 प्रत्येक शब्दा के तीन-तीन समानार्थक शब्द लिखिए:-

- | | | | | |
|----------|---|-------|-------|-------|
| 1. आँख | - | | | |
| 2. शरीर | - | | | |
| 3. अमृत | - | | | |
| 4. कमल | - | | | |
| 5. मित्र | - | | | |

प्रश्न-3 निम्नलिखित वाक्यांशों के लिए एक शब्द लिखिए:-

1. तेज बुद्धि वाला
2. जो गिना न जा सके
3. वह बात जो अपने ऊपर बीती हो
4. अभिनय करने वाला
5. जिसकी कोई उपमा न हो

प्रश्न-4 निम्नलिखित शब्दों के दो-दो अर्थ लिखिए:-

1. अलि -,
2. उत्तर -,
3. तीर -,
4. दंड -,
5. अरुण -,

प्रश्न-5 सृजनात्मक गतिविधियाँ :-

1. मुँह से बजाए जाने वाले किन्हीं चार वाद्य-यंत्रों के चित्र स्क्रेप-बुक में चिपकाकर उनके नाम लिखिए।
2. मोटापा कम करने के उपायों के बारे में लिखिए।

RING MIDWAYS SR. SEC. PUBLIC SCHOOL
Main Najafgarh Road, Vipin Garden, New Delhi-110059

Assessment For - II Periodic Assessment - A

Class - VIth

Subject- Hindi

प्रश्न-1 निम्नलिखित शब्दों से विशेषण बनाइए:-

1. विष
2. आरम्भ
3. बाहर
4. समय
5. नीति

प्रश्न-2 निम्नलिखित शब्दों के दो-दो पर्यायवाची शब्द लिखिए:-

1. घर -,
2. शीघ्र -,
3. भयानक -,
4. नगर -,
5. अद्भुत -,

प्रश्न-3 निम्नलिखित शब्दों के विलोम शब्द लिखिए :-

1. उचित
2. पर्याप्त
3. अनुकूल
4. चुस्ती
5. दुःख

प्रश्न-4 निम्नलिखित शब्दों से भाववाचक संज्ञाएं बनाइए:-

1. सज्जता
2. कठिन
3. लड़का
4. मोटा
5. मीठा

प्रश्न-5 सृजनात्मक गतिविधियाँ :-

1. इंटरनेट की सहायता से पृथ्वी की कार्य-प्रणाली के विषय में लिखिए।
2. विभिन्न ऋतुओं की सब्जियों के बारे में जानकारी एकत्रित करके लिखिए।

RING MIDWAYS SR. SEC. PUBLIC SCHOOL
Main Najafgarh Road, Vipin Garden, New Delhi-110059

Assessment For - II Periodic Assessment - B

Class - VIth

Subject- Hindi

प्रश्न-1 निम्नलिखित शब्दों में से मूल शब्द तथा प्रत्यय अलग कीजिए:-

1. सहनीय = +
2. दैनिक = +
3. वार्षिक = +
4. चक्रीय = +
5. स्मरणीय = +

प्रश्न-2 नीचे दिए गए मुहावरों के अर्थ लिखिए:-

1. ठहाका लगाना
2. भाग्य को कोसना
3. अपना सा मुँह लेकर रह जाना
4. जान पर खेलना
5. आकाश-पाताल एक करना

प्रश्न-3 प्रत्येक संज्ञा के सामने संज्ञा भेद का नाम लिखिए:-

1. घबराहर -
2. कटाव -
3. गरीबी -
4. लड़की -
5. चाल -

प्रश्न-4 निम्नलिखित प्रश्नों के उत्तर दीजिए:-

1. राकेश शर्मा का जन्म कहाँ हुआ था ?
2. सत्कर्म कैसे कार्य होते हैं-अच्छे या बुरे ?
3. किस प्रकार के लोग दूसरों के लिए वरदान बन जाते हैं ?
4. प्रथम राष्ट्रमंडल खेल कहाँ आयोजित किए गए ?
5. राष्ट्र मंडल खेलों को शुभारंभ कब हुआ ?

प्रश्न-5 सृजनात्मक गतिविधियाँ :-

1. इंटरनेट की साहयता से मानव द्वारा किया गया प्रथम अन्तरिक्षयात्रा का चित्र स्क्रीन बुक में चिपकाएँ।
2. आरम्भ से लेकर अब तक राष्ट्रमंडल खेल कहाँ तथा कब आयोजित किए गए हैं, इसकी एक सूची बनाइए।

RING MIDWAYS SR. SEC. PUBLIC SCHOOL
Main Najafgarh Road, Vipin Garden, New Delhi-110059

Assessment For - II Term Assessment - A

Class - VIth

Subject- Hindi

प्रश्न-1 निम्नलिखित चिह्नों के नाम लिखिए:-

1. ! -
2. ; -
3. - -
4. ? -
5. | -
4. , -

प्रश्न-2 निम्नलिखित शब्दों के नवीन रूप लिखिए:-

1. अन्त -
2. चञ्चल -
3. यद्यपि -
4. उद्देश्य -
5. दुःख -

प्रश्न-3 प्रत्येक वाक्य में प्रयुक्त वाच्य का नाम लिखिए:-

1. प्रधानाचार्य ने छात्रों को छुट्टी दे दी।
2. रमेश पतंग उड़ा रहा है।
3. चोरी का माल खरीदना अनुचित है।
4. बालक अपने मित्र को पत्र लिख रहा है।
5. विक्रम कंप्यूटर चला रहा है।

प्रश्न-4 निम्नलिखित शब्दों से संज्ञाएँ बनाइए:-

1. सुन्दर -
2. लुप्त -
3. कटु -
4. जागरुक -

प्रश्न-5 कविता में प्रयुक्त हुए निम्नलिखित शब्दों के वास्तविक रूप लिखिए:-

1. व्योहार -
2. सनमान -
3. आपनो -
4. माँहि -
3. पाछे -

प्रश्न-6 सृजनात्मक गतिविधियाँ :-

1. एक सादे कागज पर आँखों का चित्र बनाकर उसके सभी भागों को दर्शाइए।
2. 'प्रदुषण हटाओ: घरती बचाओ'- विषय पर चित्र बनाइए।

RING MIDWAYS SR. SEC. PUBLIC SCHOOL
Main Najafgarh Road, Vipin Garden, New Delhi-110059
Assessment For - II Term Assessment - B

Class - VIth
Subject- Hindi

प्रश्न-1 निम्नलिखित प्रश्नों के उत्तर दीजिए:-

1. चौहान तथा गौरी के मध्य दोनों युद्ध कहाँ हुए ?
2. पृथ्वीराज चौहान ने सोने की तलवार किसे भेंट की ?
3. महाराणा प्रताप कहाँ के नरेश थे ?
4. फूल और काटो में क्या अन्तर है ?
5. अकबर ने दूत से क्या पूछा ?

प्रश्न-2 नीचे दिए गए प्रत्येक शब्द को दो भिन्न-भिन्न अर्थों में प्रयोग कीजिए:-

1. वर -,
2. पर -,
3. कुल -,

प्रश्न-3 नीचे दिए गए शब्दों का अर्थ स्पष्ट कीजिए:-

1. मुगल-ए-आजम -
2. दस्त-दराजी -
3. नालायक -
4. नापाक -

प्रश्न-4 निम्नलिखित वाक्यों में से 'विशेषण' अलग करके लिखिए:-

1. परिश्रमी बालक सदा सफल होते हैं।
2. बच्चों को मीठा रस भाता है।
3. पेड़ पर आठ पक्षी बैठे हैं।
4. कक्षा में कुल पचास छात्र-छात्राएँ हैं।

प्रश्न-5 प्रत्येक कारक के विभक्ति चिह्न लिखिए:-

1. कर्त्ता कारक -
2. करण कारक -
3. अपादान कारक -
4. संबोधन कारक -
5. कर्म कारक -

प्रश्न-6 सजुनात्मक गतिविधियाँ :-

1. मुहम्मद गौरी की जीवन ढूँढकर लिखिए।
2. फूलों के आसपास तितलियाँ तथा भौंरे क्यों मँडराते हैं। लिखिए।

RING MIDWAYS SR. SEC. PUBLIC SCHOOL
Main Najafgarh Road, Vipin Garden, New Delhi-110059
Assessment For - I Periodic Assessment - A
Class - VIth
Subject- English

Q.1 Write whether they are common, proper, collective, abstract or material nouns :

1. I like to go shopping with mom on labour day.
2. The class is making a noise
3. Milk is fresh
4. I believe in her innocence
5. Landon is situated on the bank of the river Thames

Q.2 Fill in the blanks with suitable article/pronouns.

- 1..... sun shines during the day time
2. He isuntidy boy.
3. She is my aunt.....lives in Dubai
4.are in the garden
5. This shirt is

Q.3 Give suitable interjections and complete the given sentences.

1. I love football but I have no talent as a player.
2.What a rogue he is!
3.You look great tonight

Q.4 Complete the sentences by picking out the suitable phrases from the box

(in the sky in, in th sack, in the ground)

a) The boys are playing

b) A rat is eating.....

c) The birds are flying.....

Q.5 Give one - word substitution for the following group of words:-

a) A hand-writing that cannot be read

b) One who looks at the dark side of things.

c) The life history of a man written by somebody else

d) A person who is not easily pleased by anything

Activity :-

Make a chart on kinds of Noun

RING MIDWAYS SR. SEC. PUBLIC SCHOOL
Main Najafgarh Road, Vipin Garden, New Delhi-110059
Assessment For - I Periodic Assessment - B
Class - VIth
Subject- English

Q.1 Fill in the blanks with suitable personal pronouns :-

- a) He andlive in the same strut.
- b) When he was cleaning the ceiling fan.....fell on the table
- c) Is it your pet? Please keepindoors.
- d) They are smarter than.....
- e) Nobody know where.....had gone

Q.2 Underline the predicates in the following sentences :-

- a) Winnie will sing
- b) I have finished my work
- c) The grass is always greener on the other ride.
- d) Bob has never driven a car before.
- e) My friend flies a helicopter.

Q.3 Write the plural from of each singular noun

- a) Arch
- b) With
- c) Porch
- d) Window
- e) Path

Q.4 Make sentences of the following words :-

- a) Seeds
- b) Eagerly
- c) Talkative
- d) Salad

Q.5 Use 'am', 'is' or 'are' in the following sentences :-

- a) They.....all laughing heartily.
- b) There enough mangoes for both of us
- c) That a coffee shop
- d) Inot his cousin
- e) The book.....mine

Activity :-

Make a chart on kinds of pronoun

RING MIDWAYS SR. SEC. PUBLIC SCHOOL
Main Najafgarh Road, Vipin Garden, New Delhi-110059
Assessment For - I Term Assessment - A
Class - VIth
Subject- English

Q.1 Fill in the blanks with the correct form of the verb :-

- a) One of my friendsgone to Germany (has/have)
- b) The crowd(swim) when the shark came.
- c) I'll let you know as soon as Jyoti.....(come/ came) back.

Q.2 Write whether the underline in each of the following sentences is finite or Non-Finite verb

- a) We Found him hiding behind the wall
- b) They did not appreciate her singing
- c) Reading books is my hobby

Q.3 Fill in the blanks with conjunctions :-

- a) Suri has not written,has she called me.
- b) The price of oranges is high.....frost damage.
- c) Are you comingnot?
- d) He tried.....he succeeded

Q.4 Change the following sentences into passive voice.

- a) Ms penny is going to sell her flat
- b) She eats mangoes
- c) Ravi has won a prize

Q.5 Write the meanings of the given Idioms :-

- a) To go astray
- b) Icing on the cake
- c) Call a spade a spade

Q.6 Write the opposites of the following words :-

- a) Rise -
- b) Quality -
- c) Heavy -
- d) Promise -

Activity :-

Write a speech of 100-150 words on “Should school children need to carry the burden of book 8 note books”

RING MIDWAYS SR. SEC. PUBLIC SCHOOL
Main Najafgarh Road, Vipin Garden, New Delhi-110059
Assessment For - I Term Assessment - B
Class - VIth
Subject- English

Q.1 Connect the pair of Sentences below using but or so :-

- a) He is very rich.....he does n't spend a lot of money.
- b) I have a lot of home work to do now.....I can't go to the Cinema with you.
- c) Shivani wants to eat pizza.....she do'nt have money.
- d) Ankit wanted to trim his hair.....He went to saloon.

Q.2 Fill in the blanks with the past tense of the word given in the brackets :-

- a) The camel.....(run) into the building
- b) He(believe) my statement.
- c) She.....(enter) in the class.
- d) The boy.....(manage) to find employment.
- e) Rahul.....(go) to school yesterday.

Q.3 Make sentences of the following words :-

- a) Defence -
- b) Precious -
- c) Companion -
- d) Mysterious -

Q.4 Complete the sentences in passive voice with the verbs in brackets :-

- a) All the umbrellas.....yesterday. (Sell)
- b) This bag.....in the bus yesterday (find)
- c) The house.....now (Clean)
- d) The plane in two days (Announce)
- e) The message.....to them tomorrow (send)

Q.5 State whether the verbs in the following sentences are used transitively or intransitively.

- a) The dog barks.
- b) The ship sails at noon.
- c) She waited for the bus.
- d) He raised his hands.
- e) Rita baked some cookies,

RING MIDWAYS SR. SEC. PUBLIC SCHOOL
Main Najafgarh Road, Vipin Garden, New Delhi-110059
Assessment For - II Periodic Assessment - A
Class - VIth
Subject- English

Q.1 Write kinds of adjective with example.

Q.2 Fill in the blanks with comparative forms.

- a) We arrivedthan she had expected (soon)
- b) Leena isthan her sister (young)
- c) This book isthan that one (thin)
- d) His house isthan that one (big)

Q.3 Write the comparative & Superlative degree of the following

- a) Handsome
- b) Old
- c) Lucky
- d) Many
- e) Lovely
- f) Honest
- g) Bad

Q.4 Make sentences of the following words

- a) Entirely
- b) Desire
- c) Difficulty

d) Illness

Q.5 A person today, is honest only till he or she does not have an opportunity to become dishonest and benefit himself. Do you agree with this statement? write your answer with suitable examples.

Or

Do not ever think that every man in the world is dishonest, Have faith in humanity.

RING MIDWAYS SR. SEC. PUBLIC SCHOOL
Main Najafgarh Road, Vipin Garden, New Delhi-110059
Assessment For - II Periodic Assessment - B
Class - VIth
Subject- English

Q.1 Write the adjective in adverb form of manner.

- a) Favorable
- b) Simple
- c) Sole
- d) Whole
- e) Dramatic
- f) Full
- g) True
- h) Terrific

Q.2 Complete the table

| | | |
|--------------|--------|-------|
| a) Fat | | |
| b) Near | | |
| c) | Sooner | |
| d) | Lower | |
| e) high | | |
| 4. Better | - | |
| 5. Pretty | - | |
| 6. Postponed | - | |
| 7. Aware | - | |
| 8. Harmful | | |

Q.3 Write all the kinds of 'Adverbs with example

Q.4 Write a speech on the importance of planting trees.

Write the content in not more than 150 words.

Prepare this speech for class test.

RING MIDWAYS SR. SEC. PUBLIC SCHOOL
Main Najafgarh Road, Vipin Garden, New Delhi-110059
Assessment For - II Term Assessment - A
Class - VIth
Subject- English

Q.1 Add un to the words below to make their opposites

- a) Indemnified
- b) Attended
- c) Important
- d) Trained
- e) Educated

Q.2 In each of the following sentences underline the phrases

- a) They play in the playground after school
- b) There is a TV cabinet in the corner of the hall
- c) Aruna Joined us at the last moment
- d) Why did she give away all of her books
- e) The sun rises in the east.

Q.3 Mark whether the following sentences express command, request or suggestion.

- a) Stop making notes
- b) They should be regular in class
- c) Please lend me you eraser
- d) Take the dog out for a walk
- e) Don't litter the park
- f) Go and get a cup of tea

Q.4 Change the following sentence into Indirect speech

- a) He said, "I know Manoj."
- b) He said, "Arun has been playing."
- c) He said, "Honesty is the best policy."
- d) she said to me, "I go not know how to swim."
- e) I said to him, "You are doing your duty towards country"
- f) The old man said to, "Where do you lived?"

RING MIDWAYS SR. SEC. PUBLIC SCHOOL
Main Najafgarh Road, Vipin Garden, New Delhi-110059
Assessment For - II Term Assessment - B
Class - VIth
Subject- English

Q.1 Write the synonyms

- a) Answer
- b) Correct
- c) Fight
- d) Famous
- e) Honesty
- f) Loveg
- g) Jedlous
- h) Ugly
- I) Wise

Q.2 Write antonyms

- a) Accept
- b) Cheap
- c) Well
- d) Horrible
- e) Absent

Q.3 Make a chart on Punctuation

Q.4 Today is women's Day and you are asked to deliver a speech on changing role of women in 21st century acknowledging their significant contribution is changing face of modern era. Your speech should not exceed the limit of 120-150 words.

RING MIDWAYS SR. SEC. PUBLIC SCHOOL
Main Najafgarh Road, Vipin Garden, New Delhi-110059
Assessment For - I Periodic Assessment - A
Class - VIth
Subject- Mathematics

Solve the following question :-

1. Compare the following

(a) 59386 and 57284

(b) 34702 and 34746

2. How many can are there in 2m?

3. Write the following Roman numerals as Hindi- Arabic numerals

a) CM

b) XXXVI

4 Write the successor and predecessor of the following

a) 20139

b) 14029

5. Fill in the blanks :-

a) $5 \times 92 \times 20 = \dots\dots\dots \times 92$

b) $1275 \div 1 = \dots\dots\dots$

6. Match the columns .

Column A

Column B

a) Beam of light from car headlight

Line Segment

b) Opposite edges of scale

Point

33

c) Tip of a compass

Ray

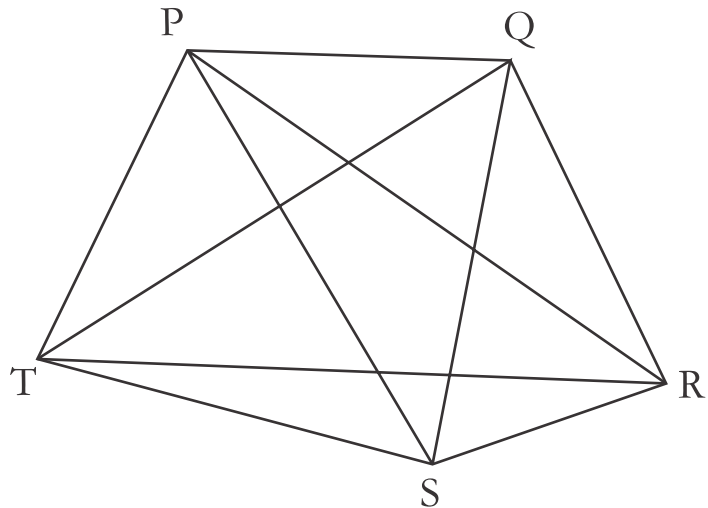
d) A stretched wire

Parallel lines

7. Draw a polygon with six sides. What is it called? How many diagonals can be drawn?

8. From the adjoining figure, name the following :

- a) A four sided polygon.
- b) Diagonals of 4 sided polygon.
- c) The polygon with five sides.
- d) Vertices of five side polygon.



Activity :-

To find the HCF of two given numbers by paper cutting and pasting.

Or

To find the LCM of two given numbers by using numbers grid.

RING MIDWAYS SR. SEC. PUBLIC SCHOOL
Main Najafgarh Road, Vipin Garden, New Delhi-110059
Assessment For - I Periodic Assessment - B
Class - VIth

Subject- Mathematics

Solve the following question :-

1. Find the sum using suitable rearrangements of numbers.

(a) $266 + 508 + 234$

(b) $205 + 164 + 95 + 86$

2. Write the Roman numerals for the following.

a) 58

b) 114

3. Round off the following numbers as directed :

a) 34, 568 to nearest ten.

b) 75, 18, 604 to nearest thousand.

4. Estimate the following by rounding off to nearest ten :

a) $315631 - 215$

b) $35921 + 233 + 456$

5. Write the numerals for following number names by placing commas:

a) Three hundred seven million seven hundred fifty two thousand two hundred eighty

b) Seventy two crore forty one lakh twelve thousand three hundred eight.

6. Draw the following :-

a) Closed curve that is a polygon.

b) Open curve made up of line segments only

7. Draw a circle with centre o. Mark

- a) A point T in its interior
- b) A minor Arc SM.
- c) Diameter RS.

8. Name the type of angle formed between the hands of clock when it strikes 2.O' clock.

Activity :-

To verify that addition of whole number is commutative, by paper cutting and pasting.

RING MIDWAYS SR. SEC. PUBLIC SCHOOL
Main Najafgarh Road, Vipin Garden, New Delhi-110059
Assessment For - I Term Assessment - A
Class - VIth

Subject- Mathematics

Solve the following question :-

1. Find the common factor of

(a) 48 and 50

(b) 55 and 100

2. Find the smallest and greatest digit P such that 5P729 is divisible by 3.

3. Find the HCF of

a) 120, 144, 200

4. Write the opposites of the following :

a) 12 Minutes late

b) Withdrawal of Rs. 5000 from the bank

5. Use number line and add the following integers :-

a) $5 + (-10)$

b) $(-2) + 8 + (-1)$

6. Find the equivalent fraction of $\frac{5}{8}$ having

a) numerator 45

b) denominator 72

7. Alex coloured 4 pages of colouring book containing 40 pages. Aarif coloured $\frac{1}{3}$ of the pages of the same book. Who coloured less pages?

8. Draw any two objects that are symmetrical with their live of symmetry.

Activity :-

To Determine the number of lines of symmetry of following shapes by paper folding.

- a) Equilateral triangle
- b) Square
- c) Rhombus
- d) Rectangle and paste on A-4 size sheet.

RING MIDWAYS SR. SEC. PUBLIC SCHOOL
Main Najafgarh Road, Vipin Garden, New Delhi-110059
Assessment For - I Term Assessment - B
Class - VIth
Subject- Mathematics

Solve the following question :-

1. Match the columns.

| Columns A | Column B |
|---------------------------------|-----------|
| (a) Multiple of 3 | i) 4 |
| (b) Factor of 16 | ii) 18 |
| (c) Multiple of itself | iii) 5, 1 |
| (d) Common multiple of 3 and 9 | iv) 30 |
| (e) Common factors of 25 and 15 | v) 1 |

2. Express 72 as sum of two odd prime numbers in two different ways.

3. The product of two numbers is 9072. The HCF of the number is 18. Find the LCM of the numbers.

4. Add the following fractions :

a) $2\frac{1}{2}, 3\frac{7}{4}$

b) $\frac{5}{11}, \frac{2}{11}, \frac{9}{11}$

5. Subtract the sum of -75 and -85 from -90

6. Fill in the blanks

a) The English letter with one line of symmetry is.....

b) The kite is symmetrical about its.....(longer/shorter) diagonal.

c) The three letters having reflectional symmetry are....., and

7. Name two English alphabet letter that have horizontal as well as vertical line of symmetry.

8. Find the value of $-456 + 789 - (-845)$

Activity :-

Show the addition and subtraction of Integers on number line.

Or

Make chart on Divisibility rules of 1 to 12.

RING MIDWAYS SR. SEC. PUBLIC SCHOOL
Main Najafgarh Road, Vipin Garden, New Delhi-110059
Assessment For - II Periodic Assessment - A
Class - VIth

Subject- Mathematics

Solve the following question :-

1. Find the angles formed by the two hands of clock at

(a) 1 O' Clock

(b) 10 O' Clock

2. Classify the following triangles on the basis of their angles.

a) 90° , 45° , 45°

b) 30° , 110° , 40°

3. Write each of the following as decimals :

a) $1000 + 4 + \frac{4}{10} + \frac{2}{100}$

b) $600 + 5 + \frac{3}{10} + \frac{9}{100}$

4. Express the following as cm using decimals :

a) 20 mm

b) 8 cm 2 mm

5. Deepa cuts off 25 cm from 3 m of rope. How much rope was left?

6. Give expression for the following cases :

a) 6 added to twice l

b) 8 Subtracted from half of p

7. Write any four algebraic equations in x such that the equations formed satisfy the solution $x = 2$

8. Convert 6 kg 870 g in 'kg' using decimals.

Activity :-

To make a cube using the given net and count the number of faces, vertices and edges.

or

To make a prism and pyramid using their nets and to find their number of vertices, edges and faces.

RING MIDWAYS SR. SEC. PUBLIC SCHOOL
Main Najafgarh Road, Vipin Garden, New Delhi-110059
Assessment For - II Periodic Assessment - B
Class - VIth
Subject- Mathematics

Solve the following question :-

1. Express as ₹ using decimals :-

- (a) 15 Paise
- (b) 8 36 Paise

2. Find the sum in each of the following

- a) $27.001 + 0.675 + 8.004$
- b) $815 + 6.2 + 103.18$

3. Form the equation of the following.

- a) 6 less than a number is 108.
- b) The product of 4 and a number is 48.
- c) A number divided by 18 is 3.

4. Using trial and error method solve $3x-1=8$

5. The obtuse angle of the obtuse- angled isosceles triangle is 130° . Find the other two angles.

6. Where will the hands of clock stop if it

- a) Starts at 9 and makes three fourth of revolution.
- b) Starts at 6 and make half the revolution

7. Draw the following angles using the protractor.

- a) 105°

b) 70°

8. State the difference between the irregular hexagon and regular hexagon. Illustrate it with the help of figure.

Activity :-

To construct the perpendicular bisector of given line segment by paper folding.

RING MIDWAYS SR. SEC. PUBLIC SCHOOL

Main Najafgarh Road, Vipin Garden, New Delhi-110059

Assessment For - II Term Assessment - A

Class - VIth

Subject- Mathematics

Solve the following question :-

1. The perimeter of a decagon is 30 m. Determine the length of its side.

2. The perimeter of a rectangular plot is 90 m. The breadth of the plot is 15m. Find its length.

3. Fill in the following blanks making them equivalent ratios.

a) $\frac{28}{40} = \frac{\quad}{10} = \frac{14}{\quad} = \frac{\quad}{60}$

b) $\frac{2}{9} = \frac{6}{\quad} = \frac{\quad}{54} = \frac{4}{\quad}$

4. Find the value of x so that the following statement becomes true.

a) $6 : 15 = 10 : x$

b) $20 : x = 4 : 5$

5. Draw a scalene triangle ABC. Construct a line segment PQ such that

$\overline{PQ} = \overline{AB} + \overline{BC}$ **Verify the result by measurements.**

6. Draw a line segment FP=10 cm. Draw perpendiculars on points F and p

7. A dice is thrown 20 times and the following results were obtained

2, 4, 5, 1, 6, 5, 4, 5, 3, 2, 4, 1, 3, 5, 6, 3, 4, 2, 5, 1

Tabulate the above information

8. The population of various towns in year 2011 is given below :-

| Town A | Town B | Town C | Town D | Town E |
|--------|--------|--------|--------|--------|
| 20000 | 15000 | 30000 | 40000 | 25000 |

Depict the above information by a pictograph.

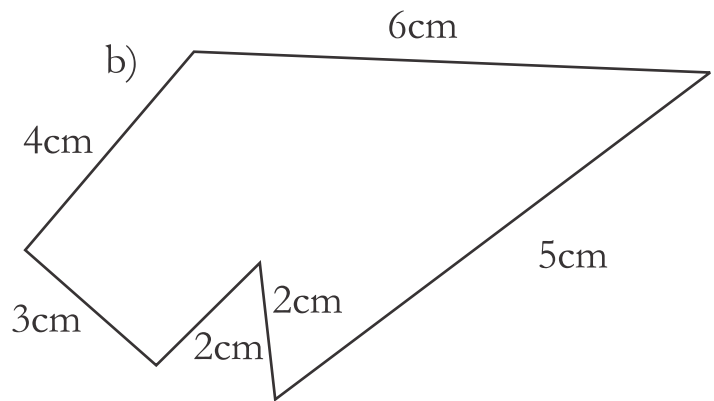
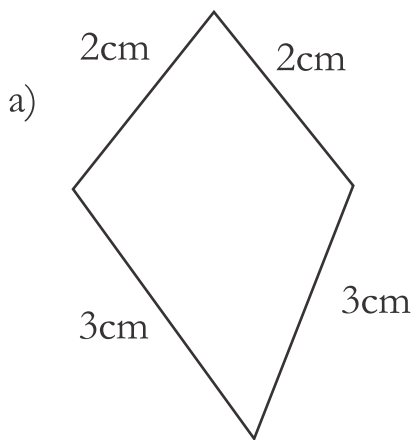
Activity :-

Draw a pictograph on any suitable topic

RING MIDWAYS SR. SEC. PUBLIC SCHOOL
Main Najafgarh Road, Vipin Garden, New Delhi-110059
Assessment For - II Term Assessment - B
Class - VIth
Subject- Mathematics

Solve the following question :-

1. Find the perimeter of the following figures.



2. Divide ₹ 110 between Aadi and Arpit in the ratio of 3 : 2

3. Find the rate of vegetable oil if the cost of 20 litre is ₹ 2040

4. The number of Juice packs made by a company in a year as following

| Types of Juice | Orange | Grapes | Apple | Mango |
|-----------------|-------------|-------------|-------------|-------------|
| Number of Juice | 50 thousand | 45 thousand | 65 thousand | 80 thousand |

Represent the above data on a bar graph.

5. Find the cost of a plot which is 70 m long and 60 m wide if the cost of 1 sq m is rupees six thousand.

6. Draw a circle with radius 5 cm and with the same centre draw another circle with radius 2.5 cm

7. The monthly salary of dolly is Rs. 30,000. She spends Rs. 25,000 per month. Find the ratio of

- a) Money that she earns to the money she saves.
- b) Money that she saves to the money she spends.

8. A car travels 90 km in 3 hours. Calculate the speed of the car.

Activity :-

To find the area and perimeter of plane figure by paper cutting and folding. (Also use thread and graph paper)

RING MIDWAYS SR. SEC. PUBLIC SCHOOL
Main Najafgarh Road, Vipin Garden, New Delhi-110059
Assessment For - I Periodic Assessment - A
Class - VIth
Subject-Science

Q.1 What is Transparent Material?

Q.2 What is Translucent Material?

Q.3 What is winnowing

Q.4 True or false

- i) Stone is transparent , while glass is opaque?
- ii) Chalk dissolves in water.
- iii) Sugar does not dissolve in water.
- iv) Salt is obtained from sea water.
- v) The process of separating cream from milk is filtration.

Activity :-1

Given below are the names of same objects and material : Water, Basket, ball, orange, Sugar, globe, apple and earthen pitcher.

Group them

- a) Round shaped and other shapes
- b) Eatables and non-eatables.

Activity :-1

Given different objects like a pencils, a wooden block, an iron nail, a coin, pebble, a leaf, etc. on the basis of floatation.

RING MIDWAYS SR. SEC. PUBLIC SCHOOL
Main Najafgarh Road, Vipin Garden, New Delhi-110059
Assessment For - I Periodic Assessment - A
Class - VIth
Subject-Science

Q.1 Name five plants and their parts that we consume?

Q.2 Match the Column

| A | B |
|---------------------------------|-----------------------------|
| 1) Milk, Curd, Paneer ghee | Eat other |
| 2) Spinach, cauliflower, carrot | Eat plant and plant product |
| 3) Lion and tiger | Are vegetables |
| 4) Herbivores | are all animal Products |

Q.3 Fill up in blanks :-

(Herbivores, plant, Rickets, Sugarcane, Carnivore, Scurvy)

- 1) Tiger is abecause it eats only meat.
- 2) Deer eats only plants products and so, is called.
- 3) We get sugar from.....
- 4)is caused by the deficiency of vitamin D
- 5) Deficiency of vitamin C causes a disease known as.....

Q.4 Name two items that are made from coconut fibre

Q.5 Different between fibre and fabric

Q.6 Name the major Nutrients in our food?

Q.7 Name two foods each rich in

- | | |
|------------------|------------|
| a) Fats | b) Starch |
| c) Dietary fibre | d) Protein |

Activity :-1

Paste the different fibre and explain there charachrtics?

Activity :-2

Take a small pack of any four food items. Make a table with various beading like carbabydrates fats, protain vitamins and minerals. cpmpare the nutrtrional value of the food.

RING MIDWAYS SR. SEC. PUBLIC SCHOOL
Main Najafgarh Road, Vipin Garden, New Delhi-110059
Assessment For - I Periodic Assessment - A
Class - VIth
Subject-Science

Q.1 What is Reversible changes?

Q.2 What is Irreversible changes?

Q.3 What is herbs, shrubs and tree

Q.4 What is Transpiration

Q.5 What is Stimulus

Q.6 Make a diagram on parts of plants and name them.

Q.7 Fill up

1. Breathing is a part of.....
2. Plants also respond toin a way different then animal.
- 3) Mango tree has.....roots.
- 4) The supporting roots in sugar cane are called.....roots.
- 5) A.....produces a response in an organism.

Activity :-1

To classify certain given substance into reversible Irreversible and physical / chemical.

- | | |
|---------------------|----------------------|
| (a) Milk to cheese, | b) Growth of a child |
| c) Water to vapour | d) Breaking |
| e) Ripening fruits. | |

Activity :-2

Collect leaves of rose, peepal, mint and coriander. observe them carefully and complete the following table.

RING MIDWAYS SR. SEC. PUBLIC SCHOOL
Main Najafgarh Road, Vipin Garden, New Delhi-110059
Assessment For - I Periodic Assessment - A
Class - VIth
Subject-Science

Q.1 Fill up

1. Joint of the bones help in theof the body
2. The.....of thepulls the bones during.
3.are had bones.
4. Soil, water and air thefactor of a habitats.
5. Changes in our surrounding that make us respond to them are called..... .

Q.2 Which of the skull bones are movable?

Q.3 Give an example of a non-living thing which shows any two characteristics of living things.

Q.4 What is habitat?

Q.5 What is adaptation?

Q.6 Name a few plants that live in ponds?

Activity :-1

Label the different parts of flowers.

Activity :-2

Make a table and write about a streamlined body and its advantages. Also find out which other animals have streamlined bodies.

RING MIDWAYS SR. SEC. PUBLIC SCHOOL
Main Najafgarh Road, Vipin Garden, New Delhi-110059
Assessment For - II Term Assessment - B
Class - VIth
Subject-Science

Q.1 Define reflection of light.

Q.2 What are the essential conditions for the formation of shadow?

Q.3 Difference between a shadow and an image.

Q.4 What are the things we need to produce a shadow?

Q.5 How does light travel?

Q.6 When shadow cannot be formed?

Q.7 Distinguish between evaporation and condensation

Q.8 What is ground water.

Q.9 What are the states of water.

Activity :-1

Construction and working of pinhole camera.

Activity :-2

Draw a diagram to illustrate the formation umbra and penumbra.

RING MIDWAYS SR. SEC. PUBLIC SCHOOL
Main Najafgarh Road, Vipin Garden, New Delhi-110059
Assessment For - II Periodic Assessment - B
Class - VIth
Subject-Science

Q.1 True and false

1. Nitrogen supports burning of a candle.....
2. Dust particles are always present in air.....
3. Plant absorb oxygen to prepare food.....
4. Air is primary made of Hydrogen and Helium.....
5. Waste is anything which you throw away.....

Q.2 Fill up

1. The process of absorbing carbon dioxide form air.....
2. Air isand not.....
3. Air occupies.....and
4. is anything which is thrown away.
5. Low-lying are used for waste disposal.....

Q.3 What is composition of Air.

Q.4 What can be done to reduce the use of plastic?

Activity :-1

Make a colourful chart on the topic "Clean city Green city"

Activity :-2

Make a windmill and prepare a project report.

RING MIDWAYS SR. SEC. PUBLIC SCHOOL
Main Najafgarh Road, Vipin Garden, New Delhi-110059
Assessment For - II Periodic Assessment - B
Class - VIth
Subject-Science

Q.1 What is Magnet.

Q.2 Name two poles of magnet.

Q.3 Different between Natural and artificial magnet.

Q.4 What is magnetic compass.

Q.5 Name some artificial magnets.

Q.6 What is electricity

Q.7 What is electric circuits. Explain with diagram

Q.8 Make a table and write symbols of some electrical components.

Activity :-1

Make a model how bulb is glow. To make a model on open and closed circuit.

Activity :-2

To Make your own magnet with help of teacher.

RING MIDWAYS SR. SEC. PUBLIC SCHOOL
Main Najafgarh Road, Vipin Garden, New Delhi-110059
Assessment For - II Periodic Assessment - B
Class - VIth
Subject-Science

Q.1 Write the standard unit of “Length, Mass, Time and Temperature.

Q.2 What is length

Q.3 Different between rest and motion

Q.4 What is motion

Q.5 What is Oscillatory motion.

Q.6 What is xerophytes.

Q.7 What are adaptation Tropical Rainforests.

Q.8 What cartilage.

Activity :-1

Gather information about standard kilogram and standard meter. Where are they kept?

Activity :-2

Make a chart on camouflage in nature. Collect and paste of four organisms that show camouflage.

RING MIDWAYS SR. SEC. PUBLIC SCHOOL
Main Najafgarh Road, Vipin Garden, New Delhi-110059
Assessment For - I Periodic Assessment - A
Class - VIth
Subject-Social Science

Q.1 Answer the following Question :-

- 1) What is a meteor?
- 2) What are comets?
- 3) Who wrote Arthashastra?
- 4) Name two south Indian literary works?
- 5) In Which state is the Hunsgi valley?
- 6) Name any three regional languages of Indian.
- 7) Name the group in which many communities live together.

Within the geographical limits of a country.

Q.2 Distinguish between the following :-

- 1) Star and planet.
- 2) Planet and satellite.
- 3) Comet and meteor.

Activity :-

1. On an outline map of India , Show the different states with their main festivals.

Or

2. Write and paste same monuments with its location and material used.

RING MIDWAYS SR. SEC. PUBLIC SCHOOL
Main Najafgarh Road, Vipin Garden, New Delhi-110059
Assessment For - I Periodic Assessment - B
Class - VIth
Subject-Social Science

Q.1 Give reasons for the following?

1. Every map has some distortions.
2. A Globe is the most accurate model of the Earth.
3. Conventional symbol are used on maps.

Q.2 Answer the following question

1. What do you mean by title of a map?
2. What do you know about globe?
3. Who is known as the ‘ Father of Indian Prehistoric Archaeology?
4. Name any two Neolithic sites.
5. What any two Neolithic tools.
6. What act is known as prejudging?
7. What is the meaning of apartheid?

Activity :-

1. Draw a diagram of the earth on chart showing the equator, prime meridian or Tropic of cancer an Tropic of Capricorn, Arctic and Antarctic Circle.
2. On an outline map to Indian make the following places:-
 1. Chirand
 2. Daojali hading
 3. Mehargarh
 4. Burzahom
 5. Hallur.

RING MIDWAYS SR. SEC. PUBLIC SCHOOL
Main Najafgarh Road, Vipin Garden, New Delhi-110059
Assessment For - I Term Assessment - A
Class - VIth
Subject-Social Science

Q.1 Match the following :-

- | | | |
|---|-----------------------------------|--|
| a | The equator lies midueey | 1. 90°N |
| b | North pole | 2. The tropic of cancer and the Tropic of capricorn |
| c | The Prime meridian passes through | 3. 0° |
| d | Standard meridian of Indian | 4. Greenwich |
| e | Equator | 5. $82^{\circ} 30'\text{E}$ |

Q.2 Answer the following questions :-

1. Which was the first metal to be used?
2. Name two chacolithic sites in India?
3. Which crop was grew first in India by Indus Farmers?
4. Who is the nature god of plants?
5. Which is the decision-making body of a country?
6. Which is the law-implementing branch of the Government?
7. Which is the law-making branch if the Government?

Activity :-

1. On a physical map of Indian, Make the directions of the following places.....

Kara koram range,

Great Indian Desert,

Andaman and Nicobar

Islands,

Bangladesh,

Or

2. Paste the pictures of presidents and prime minister of Indian till the date.

RING MIDWAYS SR. SEC. PUBLIC SCHOOL
Main Najafgarh Road, Vipin Garden, New Delhi-110059
Assessment For - I Term Assessment - B

Class - VIth

Subject-Social Science

Q.1 Fill in the blanks :-

- a) Thecauses day and night.
- b) The Earth's axis is inclined at an angle of..... .
- c) The first of the four vedas is..... .
- d) The tribal chief was called..... .
- e) People can criticise the government through the..... .
- f) The conflicts between theare resolved by the courts of law.

Q.2 Answer the following Question :-

- 1. What is the date of summer solstice?
- 2. What is the date of winter solstice?
- 3. Name any one epic?
- 4. What were the Aryans connected with India Called?
- 5. Who were the first important ruler of magadha?
- 6. Who chooses the members of the Government?
- 7. After how many years are the elections held again in India?

Activity :-

1. On an outline map of the world, label the following use two different colours to show the continents and Oceans :-

Asia

Europe

North America

South America

Australia

Africa

Pacific

Ocean

Atlantic ocean

Arctic & Indian Ocean

Or

2. On an outline map of India following :-

a) Avanti

b) Vatsa

c) Kosala

d) Magadha

e) Vaishali

RING MIDWAYS SR. SEC. PUBLIC SCHOOL
Main Najafgarh Road, Vipin Garden, New Delhi-110059
Assessment For - II Periodic Assessment - A
Class - VIth
Subject-Social Science

Q.1 Define the following Term.

1. Lithosphere :-
2. Hydrosphere :-
3. Dunes :-
4. Lagoons :-
5. Panchayati Raj :-
6. Nyaya Panchayati :-

Q.2 Answer the following Questions :-

1. What are continents?
2. Name the major Oceans of the world?
3. Who chooses the members of the Gram Panchayat.
4. Define the Gram Sabha.

Q.3 Fill in the blanks :-

1. A Comprise block Pramukhs.
2. Zila Parishad functions at thelevel.
3. is the second largest continent of the world.

Activity :-

Make the following

Northern Mountain

Northern Plains,

Peninsular Plateau

Thar Desert

Western Coastal plains

Eastern Plains

Andaman and Nicobar

Islands.

Or

2. Collect the picture in the newspaper how

Peoples use to voice their protests?

RING MIDWAYS SR. SEC. PUBLIC SCHOOL
Main Najafgarh Road, Vipin Garden, New Delhi-110059
Assessment For - II Periodic Assessment - B
Class - VIth
Subject-Social Science

Q.1 Place a tick (✓) in the right column.

| | Block mountain | Fold mountain | Volcanic Mountain. | Residual mountain |
|-----------------|----------------|---------------|--------------------|-------------------|
| a) Alps | | | | |
| b) Mt. Fujiyama | | | | |
| c) Hhimalayas. | | | | |
| d) Urals. | | | | |

Q.2 Distinguish between the following.

- 1) Block and fold mountain.
- 2) Plateaus and plains.
- 3) Degradation and aggradation

Q.3 Write the year in which the following events occurred.

1. Birth of Mahavira
2. Death of Mahavira.....
3. Death of Buddha.....

Q.4 Answer the following Question

1. Name any tow countries where Hinduism spread?
2. Who was the son of Siddharath and Yashodhara?
3. Who is municipal commissioner?
4. Who is mayor?

Activity :-

1. On the physical map of India, Mark the following

- a) Bay of Bengal
- b) Arabian Sea
- c) Indian Ocean
- d) Mount Everest
- e) The Deccan Plateau

OR

2. On an Outline map of India, Mark the routes by which Buddhism spread beyond India.

RING MIDWAYS SR. SEC. PUBLIC SCHOOL
Main Najafgarh Road, Vipin Garden, New Delhi-110059
Assessment For - I Periodic Assessment - A
Class - VIth
Subject-Social Science

Q.1 State whether the following statements are true or false :-

1) India is diverse in its flora and fauna.

☐

2) The Lakshadweep Island consists of 36 islands.

☐

3) India is diverse in its flora and fauna

☐

4) The Parthians followed the Sakas

☐

5) Nagasena was a Roman trader.

☐

Q.2 Define the following

1) Coastline :-

2) Duns :-

3) Loo :-

4) Inscription :-

Q.3 Match the followings to their dynasties by ticking (✓) in the right box

| | Pallavas | Guptas | Chalukyas |
|-------------------|----------|--------|-----------|
| 1. Pulakesin - II | | | |
| 2. Samudragupta | | | |
| 3. Kirtivarman | | | |

Q.4 Write short notes on :-

1. SHO :-
2. District collector :-
3. Tehsildar :-

Activity :-

1. On an outline map of India mark the “Wildlife Sancturies.”

Or

2. Make the silk route in the world map

RING MIDWAYS SR. SEC. PUBLIC SCHOOL
Main Najafgarh Road, Vipin Garden, New Delhi-110059
Assessment For - I Periodic Assessment - B
Class - VIth
Subject-Social Science

Q.1 Write three examples of each of the following Occupations :-

- | | | |
|-------------------------|----|-------|
| 1) Primary Occupation | :- | |
| 2) Secondary Occupation | :- | |
| 3) Tertiary Occupation | :- | |

Q.2 Match the following:-

- | | |
|-----------------------|-------------------------|
| 1) Heavy rain fall | a) Punjab |
| 2) Moderate rain fall | b) The Himalayan Region |
| 3) Scanty rain fall | c) Western Ghats |

Q.3 Answer the following Question :-

1. What is the other name of blue bull?
2. What is the other name of tidal forest?
3. Who killed Pulakesin II?
4. On which river bank is Rome situated?

Q.4 Write the names of any four cities belonging to each group :-

- | | | | | | |
|---------------------------|----|-------|-------|-------|-------|
| 1) Administrative centres | :- | | | | |
| 2) Religious centres | :- | | | | |
| 3) Port cities | :- | | | | |

Activity :-

1. On an outline map of India mark the heighouring countries of India.

Or

2. Prepare a list of various kind of Occupation in rural areas and write about them.

RING MIDWAYS SR. SEC. PUBLIC SCHOOL
Main Najafgarh Road, Vipin Garden, New Delhi-110059
Assessment For - I Periodic Assessment - A
Class - VIth
Subject-Sanskrit

प्रश्न -1 निम्नलिखित वर्णों उच्चारण स्थान बताओ ।

च , छ, ज, झ, ञ, त, थ, द

प्रश्न-2 स्वर वर्ण: लिखिए ?

उ०

प्रश्न -3 निम्न शब्दों के हिन्दी अर्थ लिखो ?

अश्वः -

अश्वौ -

काकः -

मयूर -

उष्ट्रः -

प्रश्न-4 निम्नलिखित पदों के संस्कृत रूप लिखिए :-

दो हाथी -

चार लड़के -

दो कबूतर -

एक ऊँठ -

दो घोड़े -

क्रियात्मक कार्य -

1. स्वर वर्ण व व्यंजन वर्णों को चार्ट पर लिखिए ।

2. पुल्लिङ्ग शब्दों का चित्रलगाकर संस्कृत नाम लिखिए ।

RING MIDWAYS SR. SEC. PUBLIC SCHOOL
Main Najafgarh Road, Vipin Garden, New Delhi-110059
Assessment For - I Periodic Assessment - B

Class - VIth
Subject-Sanskrit

प्रश्न -1 रिक्त स्थानों की पूर्ति कीजिए:-

1. अश्वः
2. सिंहाः
3. कपोतः
4. उष्ट्रः
5. गजौ

प्रश्न -2 सही विकल्प चुनिए:-

1. कपोताः का अर्थ है:-

एक कबूतर दो कबूतर बहुत से कबूतर

2. वानरौ का अर्थ है:-

दो बन्दर तीन गद्हे चार घोड़े

3. अश्वाः का अर्थ है:-

एक घोड़ा दो हाथी बहुत से घोड़े

4. अजाः का अर्थ है:-

एक बकरी दो बकरियाँ तीन कोयल

प्रश्न-3 निम्नलिखित के अर्थ हिन्दी में लिखिए:-

- लता -
- मूषिके -
- चटके -
- नापिके -
- अजाः -
- कन्ये -

प्रश्न-4 निम्नलिखित पदों के संस्कृत रूप लिखित

| | | |
|-----------------|---|-------|
| एक अध्यापिका | - | |
| दो अभिनेत्रियाँ | - | |
| अनके कोयल | - | |
| तीन चिड़ियाँ | - | |
| एक कली | - | |

क्रियात्मक कार्य :-

1. पुल्लिङ्ग संस्कृत शब्दों के एकवचन द्विवचन बहुवचन लिखो।
2. नपुंसकलिङ्ग शब्दों के चित्र लगाकर संस्कृत नाम लिखो।

RING MIDWAYS SR. SEC. PUBLIC SCHOOL
Main Najafgarh Road, Vipin Garden, New Delhi-110059
Assessment For - I Term Assessment - A

Class - VIth
Subject-Sanskrit

प्रश्न - 1 सही विकल्प चुनिए:-

1. वने का अर्थ है:-

दो वन

तीन वन

एक वन

2. शाकानि का अर्थ है:-

थोड़ी सब्जी

दो सब्जी

बहुत सी सब्जियाँ

3. नेत्रम का अर्थ है:-

एक आँख

दो आँखे

तीन आँखे

4. अनेक पते का संस्कृत रूप होता है।

पत्रम्

पत्रे

पत्राणि

2 रिक्त स्थानों की पूर्ति कीजिए:-

1. पत्रम्

2. शाकम्

3. पत्रे

4. फलम्

5. आम्रम्

प्रश्न-3 संस्कृत में अनुवाद कीजिए:-

1. यह कौन है ? -

2. वह घोड़ा है। -

3. आँख देखती है। -

4. हाथी चलता है। -

5. पहिया घूमता है। -

प्रश्न-4 निम्नलिखित वाक्यों का अर्थ हिंदी में लिखिए।

1. एषः का -
2. गजः चलति -
3. चक्रम भ्रमति -
4. एषा अजा। -
5. अजा चरति। -

क्रियात्मक कार्य :-

1. प्रथमपुरुष दिवचनम् के दस वाक्य लिखो।
2. पुस्तकालय का चित्र लगाकर पाँच वाक्य लिखो।

RING MIDWAYS SR. SEC. PUBLIC SCHOOL
Main Najafgarh Road, Vipin Garden, New Delhi-110059
Assessment For - I Term Assessment - B
Class - VIth
Subject-Sanskrit

प्रश्न -1 निम्नलिखित पदों के अर्थ हिंदी में लिखिए-

1. भ्रमति -
2. लिखतः -
3. कथयति -
4. कूजन्ति -
5. वदतः -

प्रश्न-2 निम्नलिखित पदों के संस्कृत में लिखो-

1. खाता है -
2. जाता है -
3. सब देखते हैं -

प्रश्न-3 रिक्त स्थानों की पूर्ति कीजिए:-

1. गजः.....करोति ?
2. एषः ?
3. एषा ?
4. चक्रम ?
5. नेत्रम् ?

प्रश्न-4 मिलान कीजिए :-

- | | |
|---------|--------|
| 1. एषः | फलम् |
| 2. एषा | अश्वः |
| 3. एतत् | अजा |
| 4. सः | बालिका |

| | | |
|-----|----------|---------|
| 5. | सा | बालकः |
| 6. | मृगः | गर्जति |
| 7. | व्याघ्रः | चलति |
| 8. | कमलम् | विकसति |
| 9. | मक्षिका | धावति |
| 10. | अश्वः | उड्डयति |

क्रियात्मक कार्य :-

1. प्रथम पुरुष एकवचन के वाक्य लिखिए।
2. नपुंसकलिंग शब्दों का चित्र लगाकर संस्कृत नाम लिखिए।

RING MIDWAYS SR. SEC. PUBLIC SCHOOL
Main Najafgarh Road, Vipin Garden, New Delhi-110059
Assessment For - II Periodic Assessment - A
Class - VIth
Subject-Sanskrit

प्रश्न - 1 निम्नलिखित वाक्यों का अर्थ हिंदी में लिखिए।

1. युवाम खेलथः
2. यूयम् द्यावथ
.....
3. त्वम् शुकः असि।
4. युवाम खेलथः।
5. युवाय पश्ययः।

प्रश्न-2 मिलान कीजिए

- | | |
|-----------|----------|
| 1. त्वम् | पश्यथः |
| 2. सः | खादन्ति |
| 3. यूयम् | पश्यन्ति |
| 4. ते | गच्छ्य |
| 5. युवाम् | पठति |

प्रश्न-3 रिक्त स्थानों की पूर्ति कीजिए।

1. त्वम् ?
2. यूयम् ?
3. त्वम् हरितः। ?
4.गायसि ?

प्रश्न-4 दिए प्रश्नों के उत्तरों के सही विकल्प चुनिए।

1. “घाव धातु का मध्यम पुरुष एकवचन रूप है।”

(क) गमसि (ख) घावसि (ग) घावति

2. मध्यम पुरुष बहुवचन का रूप होता है ?

(क) त्वाम्

(ख) त्वम्

(ग) यूयम्

3. 'दृश' धातु का मध्यम पुरुष बहुवचन रूप होता है।

(क) पश्यति

(ख) पश्यथः

(ग) पश्यता

4. 'लिख' धातु का मध्यम पुरुष द्विवचन रूप होता है।

(क) लिखसि

(ख) लिखयः

(ग) लिखथ

क्रियात्मक कार्य :-

1. कक्षा का चित्र बनाकर पाँच वाक्य बनाइए।

2. पाँच फलों के चित्र बनाकर संस्कृत में नाम लिखो।

RING MIDWAYS SR. SEC. PUBLIC SCHOOL
Main Najafgarh Road, Vipin Garden, New Delhi-110059
Assessment For - II Periodic Assessment - B
Class - VIth
Subject-Sanskrit

प्रश्न - 1 धातु रूप लिखिए।

| | | | |
|----------|--------------|----------|-------|
| (क) भू | उत्तम पुरुषः | एकवचन् | |
| (ख) गम् | उत्तम पुरुषः | बहुवचन | |
| (ग) घाव् | उत्तम पुरुषः | द्विवचन | |
| (घ) स्था | उत्तम पुरुषः | बहुवचनम् | |
| (ङ) पिब् | मध्यम पुरुषः | एकवचनम् | |

प्रश्न - 2 मिलान कीजिए।

| | |
|---------|---------|
| 1. अहम् | पश्यति |
| 2. वम् | पठामि |
| 3. सा | गच्छाम! |
| 4. ते | वदति |
| 5. ताः | नमन्ति |

प्रश्न-3 रिक्त स्थानों की पूर्ति करे :-

1. अहम्.....
2. वयम्
3. रमेशः
4.वदाम्

प्रश्न-4 संस्कृत में अनुवाद कीजिए।

1. लड़कियों नाचती है।
2. सुरेश उद्यान जाता है।
3. माता जी भोजन पकाती है।

4. लड़के विद्यालय जाते हैं।

5. बाकरी घास खाती है।

क्रियात्मक कार्य :-

1. संस्कृत में एक से 25 एक गिनती लिखो।

2. क्षस अत्यय शब्द लिखिए।

RING MIDWAYS SR. SEC. PUBLIC SCHOOL
Main Najafgarh Road, Vipin Garden, New Delhi-110059
Assessment For - II Term Assessment - A
Class - VIth
Subject-Sanskrit

प्रश्न -1 रिक्त स्थानों की पूर्ति कीजिए-

1. बालिका.....लिखति ।
2. बालक:.....क्रीडति ।
3. पिता पुत्रेण.....गच्छति ।
4. रमेश:गच्छति ।
5. अन्य:अस्ति ।

प्रश्न-2 संस्कृत में अनुवाद कीजिए:-

1. लडकी कलम से लिखति है ।
2. पिता पुत्र के साथ जाता है ।
3. भोला रथ से उद्यान जाता है ।
4. वह एक पैर से लगड़ा है ।
5. वह आँख से अंधा है ।

प्रश्न -3 निम्नलिखित शब्दों का संप्रदान कारक का रूप लिखिए

| शब्दाः | एकवचनम् | द्विवचनम् | बहुवचनम् |
|--------|---------|-----------|----------|
| गुरु | - | | |
| छात्र | - | | |
| लता | - | | |
| बालक | - | | |
| नदी | - | | |

प्रश्न-4 मिलान कीजिए:-

1. सूर्यः शीतलाय भवति ।
2. पुस्तकम् परोपकाराय भवति ।

3. चन्दनम् ज्ञानाय भवति ।
4. घनम् देशाय भवति ।
5. सैनिकः प्रकाशाय भवति ।

क्रियात्मक कार्य -

1. किसी त्यौहार का चित्र लगाकर पाँच वाक्य लिखो ।
2. किसी पाँच धार्मिक स्थल के चित्र लगाकर उनके नाम लिखो ।

RING MIDWAYS SR. SEC. PUBLIC SCHOOL
Main Najafgarh Road, Vipin Garden, New Delhi-110059
Assessment For - II Term Assessment - B
Class - VIth
Subject-Sanskrit

प्रश्न - 1 रिक्त सीान:-

1.वर्णः हरितः भवति ।
2. रामम् भजति ।
3.श्वेतः भवति ।
4. गन्धः मधुरः भवति ।
5.रक्तः भवति ।

प्रश्न -2 सही के सामने (✓) और गलत के सामने (✗) का निशान लगाइए ।

1. पिकस्य वर्णः हरितः भवति ।
2. कलमस्य वर्णः श्यामः भवति ।
3. पत्रस्य वर्णः हरितः भवति ।
4. हँसस्य वर्णः : श्वेत भवति ।
5. पुष्पाणाम् गन्धः मधुरः भवति ।

प्रश्न-3 संस्कृत में अनुवाद कीजिए ।

1. तालाब के किनारे अनेक वृक्ष हैं ।
2. वृक्ष पर अनेक घोंसले हैं ।
3. घोंसले में पक्षीगण रहते हैं ।
4. प्रातः काल लोग उद्यान में घूमने जाते हैं ।
5. मैं भी उद्यान में घूमने जाता हूँ ।

प्रश्न-4 मिलान कीजिए :-

- | | |
|-----------|---------------|
| 1. नीडेणु | खगाः वसन्ति |
| 2. जले | वृक्षाः सन्ति |

- | | |
|----------------|---------------------|
| 3. वृक्षेषु | कमलानि प्रस्फटन्ति |
| 4. तडागस्य तटे | खगानाम् नीडाः सन्ति |
| 5. तडागे | मत्स्यान् पश्यति |
| 6. वृक्षयोः | खगाः निवसन्ति |

क्रियात्मक कार्य-

1. विद्यालय का चित्र लगाकर पाँच वाक्य संस्कृत में लिखिए
2. वर्षा का चित्र बनाकर रंगों से सजाइए (चार्टपर)

RING MIDWAYS SR. SEC. PUBLIC SCHOOL
Main Najafgarh Road, Vipin Garden, New Delhi-110059
Assessment For - I Periodic Assessment - A
Class - VIth
Subject- Drawing

Q.1 Answer the following :-

Q.1 What is colour?

Q.2 Write 3 day colours?

Q.3 What is art?

Q.4 Write 2 principles of art?

Activity :-

1. Make card for “Get well soon”
2. Make poster for “Save girl”

Material Required -

1. A-3 Size sheet
2. Poster colour
3. Pencil eraser.
4. Scissors

RING MIDWAYS SR. SEC. PUBLIC SCHOOL
Main Najafgarh Road, Vipin Garden, New Delhi-110059
Assessment For - I Periodic Assessment - B
Class - VIth
Subject- Drawing

Q.1 Answer the following :-

Q.1 Write 4 primary colours?

Q.2 What are secondary colours?

Q.3 Write 3 secondary colours?

Q.4 A. Red + Yellow.....

B. Yellow + Blue.....

C. White + Black.....

D. Red + White

Activity :-

1. Make decorative door hanging.
2. Make decorative wall hanging .

Material Required :-

1. Glue
2. Coloured paper
3. New paper
4. Mirror
5. Scale, pencil, eraser, scissors
6. Water colour.

RING MIDWAYS SR. SEC. PUBLIC SCHOOL
Main Najafgarh Road, Vipin Garden, New Delhi-110059
Assessment For - I Term Assessment - A
Class - VIth
Subject- Drawing

Q.1 Answer the following :-

Q.1 What is monochrome?

Q.2 What is Analogy?

Q.3 What is split complementary?

Q.4 What is Triad.

Activity :-

1. Make paper carry bag.
2. Make paper rose.

Material Required -

1. Paper knife
2. Chart paper
3. Glue
4. Scissors.

RING MIDWAYS SR. SEC. PUBLIC SCHOOL
Main Najafgarh Road, Vipin Garden, New Delhi-110059
Assessment For - I Term Assessment - B
Class - VIth
Subject- Drawing

Q.1 Answer the following :-

Q.1 Write 4 warm colours?

Q.2 Write 3 cool colour?

Q.3 What is fascinating skill?

Q.4 Define these colours :-

Yellow, Blue, White, Green

Activity :-

1. Draw the features of face (eyes, lips, nose, ear)

Material Required -

1. Pencil, Eraser

2. A-4 Size sheet

RING MIDWAYS SR. SEC. PUBLIC SCHOOL
Main Najafgarh Road, Vipin Garden, New Delhi-110059
Assessment For - II Periodic Assessment - A
Class - VIth
Subject- Drawing

Q.1 Answer the following :-

Q.1 Write 2 neutrals colours.

Q.2 What is grayed colour?

Q.3 What is your uniform colours name them?

Q.4 What is dark and reflected tone?

Activity :-

1. Make wall pen stand.
2. Make face mask.

Material Required -

1. Pencil Eraser
2. Black sketch pen
3. Scissor
4. 4-3 Size sheet.

RING MIDWAYS SR. SEC. PUBLIC SCHOOL
Main Najafgarh Road, Vipin Garden, New Delhi-110059
Assessment For - II Periodic Assessment - B
Class - VIth
Subject- Drawing

Q.1 Answer the following :-

Q.1 Write 4 oil colours

Q.2 Write 4 names of pencil shading technique?

Q.3 Write 5 principles of art.

Q.4 Write the name of colour?

A. Red+Orange.....

B. Yellow + Red.....

C. Green + Yellow.....

Activity :-

1. Make a family member tree.
2. Draw tree and hut paste wool in it.

Material Required -

1. Family member photos
2. Glue
3. Wool
4. Pencil
5. Colour
6. Sceraser.
7. Scissor

RING MIDWAYS SR. SEC. PUBLIC SCHOOL
Main Najafgarh Road, Vipin Garden, New Delhi-110059
Assessment For - II Term Assessment - A
Class - VIth
Subject- Drawing

Q.1 Answer the following :-

Q.1 Draw and write the name of national bird.?

Q.2 What is perspective and explain liners perspective?

Q.3 Explain shadow?

Q.4 Draw four shapes which are we used in drawing Activity.

Activity :-

1. Make a peacock fill the peacock sketch pen.
2. Draw the sheet and paste cotton in it.

Material Required -

1. Cotton
2. Glue
3. Sketch pen
4. A4 size sheet

RING MIDWAYS SR. SEC. PUBLIC SCHOOL
Main Najafgarh Road, Vipin Garden, New Delhi-110059
Assessment For - II Term Assessment - B
Class - VIth
Subject- Drawing

Q.1 Answer the following :-

Q.1 Write 5 different techniques of light and shade?

Q.2 Write 4 name of pencil shading techniques?

Q.3 What is pints?

Q.4 What is Texture.

Activity :-

1. Make Indian style kalamkari painting

Material Required -

1. Black pointed marker.

2. A-3 Size sheet

RING MIDWAYS SR. SEC. PUBLIC SCHOOL
Main Najafgarh Road, Vipin Garden, New Delhi-110059

Formative Assessment -I

Class - VIth

Subject- Computer

Answer the following questions.

1. What is a computer ?
2. Name characteristics of a computer?
3. Write a note History of computer
4. Names the types Generation of computer
5. Write the full form UNIVAC1 with one feature

Activity time :-

1. First lady programmer
2. First Device fro calculation.....
3. First mechanical calculator.....
4. Father of computer
5. Inventor of tabulating machine.....

Draw on chart four types of Abacus and mention the name also.

RING MIDWAYS SR. SEC. PUBLIC SCHOOL
Main Najafgarh Road, Vipin Garden, New Delhi-110059

Formative Assessment -II

Class - VIth

Subject- Computer

Q.1 Answer the following questions.

1. Name the types of primary memories?
2. Define Nibble?
3. How many megabytes are there in 1 gigabyte?
4. Give one characteristic of RAM document?

Q.2 Write them their full form

- | | | |
|-------|-------|-------|
| 1. KB | 2. TB | |
| 3. GB | 4. ZB | 5. MB |

Activity :-

1. Surt the Internet and find out more about computer also make a short note on it in your notebook.

or

2. How you can transfer data through a pen drive to a computer write the step on your computer scrap book.

RING MIDWAYS SR. SEC. PUBLIC SCHOOL
Main Najafgarh Road, Vipin Garden, New Delhi-110059

Formative Assessment -III

Class - VIth

Subject- Computer

Answer the following questions

1. What is a software? What are its two types?
2. What is the difference between Assembler and interpreter?
3. Write the Advantages and Disadvantages of mail merge?
4. What is mail merge and what are its uses?
5. Explain the things required for the process of mail merge.

Activity :-

1. Find out the Advantages and disadvantages of customized software. You can take the help of internet. Write about them on a scrap book.

Or

2. Make a birthday invitation and send it to all your friends by using mail merge feature of MS word.

RING MIDWAYS SR. SEC. PUBLIC SCHOOL
Main Najafgarh Road, Vipin Garden, New Delhi-110059
Formative Assessment -IV
Class - VIth
Subject- Computer

Answer the following questions.

1. Write the steps to open Q Basic?
2. Name the components of Q Basic Window?
3. Write the function of the following?
 - i) END Statement
 - ii) LET Statement
 - iii) CLS Statement
 - iv) INPUT Statement
4. Explain condition statement in QBasic
5. Write the elements of Q Basic

Activity :-

1. Try to find some more computer programming languages and write them in your note book.

Or

2. For each program in the chapter, draw its flow chart in MS word and take the print out. It will help you to understand the concept better.

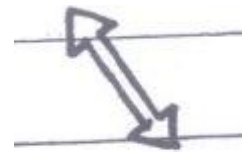
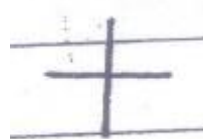



RING MIDWAYS SR. SEC. PUBLIC SCHOOL
Main Najafgarh Road, Vipin Garden, New Delhi-110059
Formative Assessment -V

Class - VI

Subject- Computer

Answer the following questions.

1. Which one is the latest version of MS Excel?
2. How can we select a row or a column?
3. What do you mean by resizing rows and column?
4. How can we edit cell contents?
5. Identify these cursors and tell, what they do in Excel :-



Activity :-

1. Make your home budget in Excel. Take help of your mother to make a list of home items.

RING MIDWAYS SR. SEC. PUBLIC SCHOOL
Main Najafgarh Road, Vipin Garden, New Delhi-110059
Formative Assessment -VI
Class - VIth
Subject- Computer

Answer the following questions.

1. Write names of some more tools present in photoshop?
2. Write the use of the photoshop?
3. Name four categories of tools palette of photoshop?
4. How do you apply filter to an image?
5. What do you know about filter gallery?

Activity :-

1. Take the picture of icons of photoshop tools and paste them in chart paper
- Or
2. Create on chart paper starting photoshop C6, show steps also.

RING MIDWAYS SR. SEC. PUBLIC SCHOOL
Main Najafgarh Road, Vipin Garden, New Delhi-110059

Formative Assessment -VII

Class - VIth

Subject- Computer

Answer the following questions

1. What is a purpose of Hacking?
2. Give two advantages of using internet?
3. Write any four rules that the individuals should follow while using a computer?
4. Give some example of cyber bullying
5. Define the term Phishing

Activity Time :-

1. Make a discussion on Internet safety on chart.

Or

2. You have learned about various cyber crimes and precautions for using internet. Write the 3 safety measures that you will take from now while using internet.

RING MIDWAYS SR. SEC. PUBLIC SCHOOL
Main Najafgarh Road, Vipin Garden, New Delhi-110059
Formative Assessment -VIII
Class - VIth
Subject- Computer

Answer the following questions

1. Define the term e-mails?
2. Name various headers fields?
3. What are the steps to delete a message?
4. How can you attach a file with your e-mail?
5. Write two Advantages and disadvantages of an electronic mail?

Activity Time :-

1. Draw the corresponding emotions:-

1. Happy
2. Sad
3. Neutral
4. Dead
5. Rose
6. Sarcastic
7. Laughing
8. Very sad
9. Heart
10. Angel
11. Unsure
12. Winking face

1. Write the acronyms for the following :-

- a. See you
- b. Laughing out loud
- c. Do not disturb
- d. Face to face
- e. By the way
- f. Age/sex/Location
- g. Be back later
- h. For your information
- i. Ha ha only series
- j. In my humble opinion