

**RING MIDWAYS SR. SEC. PUBLIC SCHOOL**  
**Main Najafgarh Road, Vipin Garden, New Delhi-110059**  
**Assessment For - I Periodic Assessment - A**  
**Class -III<sup>rd</sup>**  
**Subject-Hindi**

प्रश्न -1 कविता की पंक्तियाँ पूरी करो:-

1. एक कर्ज हमें .....
2. सब झगड़ों को .....
3. बिना शर्त सबको .....
4. भारत को खुशहाल .....

प्रश्न-2 भाषा के कितने रूप होते हैं ? नाम लिखिए:-

उ०. .... , .....

प्रश्न-3 निम्न भाषाओं की लिपि के नाम लिखो :-

1. हिंदी .....
2. अंग्रेजी .....
3. उर्दू .....
4. पंजाबी .....

प्रश्न-4 वाक्य बनाओ:-

1. यात्रा - .....
2. भविष्य - .....

प्रश्न-5 खाली स्थान भरो:-

1. वर्णों के समूह को ..... कहते हैं।
2. हिंदी वर्णमाला में .....स्वर होते हैं।
3. हिंदी वर्णमाला में .....व्यंजन होते हैं।
4. भाषा को लिखने की विधि.....है।

प्रश्न-6 हिंदी अंक में गिनती लिखिए:-

(1) 5 - .....

(2) 8 - .....

(3) 10 - .....

प्रश्न-7 रचनात्मक कार्य

1. चॉकलेट के विभिन्न रैपर इकट्ठा करके एक कोलाज बनाओ।
2. किन्हीं पाँच यातायात के साधनों के चित्र चिपकाकर उनके नाम लिखिए।

**RING MIDWAYS SR. SEC. PUBLIC SCHOOL**  
**Main Najafgarh Road, Vipin Garden, New Delhi-110059**  
**Assessment For - I Periodic Assessment - B**  
**Class -III<sup>rd</sup>**  
**Subject-Hindi**

प्रश्न -1 संज्ञा की परिभाषा लिखो:-

.....

.....

प्रश्न-2 लिखिए:-

1. दो शहरों के नाम ..... , .....
2. दो फूलों के नाम ..... , .....

प्रश्न-3 लिंग बदलो :-

1. नौकर - .....
2. बकरा - .....
3. शेर - .....
4. पुत्र - .....

प्रश्न-4 समान अर्थवाले शब्द :-

1. आँख - .....
2. धरा - .....
3. सुमन - .....
4. शोभा - .....

प्रश्न-5 वाक्य बनाओ:-

- (1) किसान - .....
- (2) सच्चाई - .....

प्रश्न-6 दी गई पंक्तियाँ किसने बाली ? नाम लिखो:-

1. “कहीं” बाहर मत जाना, घोंसल में ही रहना ।

.....

2. अब हमे स्वयं ही फ़सल की कटाई करनी होगी ।

.....

प्रश्न-7 समान तुक वाले शब्द:-

(1) बच्चा - .....

(2) निराले - .....

प्रश्न-8 रचनात्मक कार्य :-

1. ‘पर्यावरण’ पर छोटी-सी स्वनिर्मित कविता लिखिए:-

2. चिड़िया के घोंसले का चित्र बनाकर उसमें रंग भरिए:-



**RING MIDWAYS SR. SEC. PUBLIC SCHOOL**  
**Main Najafgarh Road, Vipin Garden, New Delhi-110059**  
**Assessment For - I Term Assessment - A**  
**Class -III<sup>rd</sup>**  
**Subject-Hindi**

प्रश्न -1 प्रश्न-उत्तर :-

1. खड़ की खोज कब और किसने की थी ?

उ0. ....

2. गोल-मटोल अनमोल किस नाम से जाना जाता था ?

उ0. ....

प्रश्न-2 खड़ से बनने वाले किन्हीं चार वस्तुओं के नाम लिखो:-

1. ....

2. ....

3. ....

4. ....

प्रश्न-3 एकवचन - बहुवचन

(1) बच्चा - .....

(2) कन्या - .....

(3) कपड़ा - .....

(4) रानी - .....

प्रश्न-4 दिए गए वाक्यों में सर्वनाम शब्दों पर गोला लगाओ:-

(1) यह घर हमारा है।

(2) वह तितली है।

(3) मेरी पुस्तक तुम्हारे पास हैं।

(4) आप समाचार सुनाइए।

प्रश्न-5 'र' की मात्रा वाले दो-दो शब्द लिखिए:-

(1) ट्रक - ....., .....

(2) चक्र - ....., .....

प्रश्न-6 वाक्य बनाओं:-

1. मित्र - .....

2. बगीचा - .....

प्रश्न-6 रचनात्मक कार्य :-

1. अपनी दिनचर्या की कोई पाँच अच्छी आदतें लिखिए:-

2. पेड़-पौधों की कोई पाँच विशेषताएँ लिखिए:-

**RING MIDWAYS SR. SEC. PUBLIC SCHOOL**  
**Main Najafgarh Road, Vipin Garden, New Delhi-110059**

**Assessment For - I Term Assessment - B**

**Class -III<sup>rd</sup>**

**Subject-Hindi**

प्रश्न -1 कविता की पंक्तियाँ पूरी करो:-

नटखट गया .....

वहाँ खरीदा .....

नटखट ने फिर .....

छिलका कूड़ेदान .....

प्रश्न-2 समान तुक वाले शब्द:-

1. नटखट - .....

2. गिरे - .....

3. कान - .....

प्रश्न-3 राणा सांगा कहाँ के राजा थे ?

उ0. ....

प्रश्न-4 कारक के कितने भेद होते हैं ?

उ0. ....

प्रश्न-5 निम्न वाक्यों में विशेषणा शब्दों पर गोला लगाइए:-

1. रोहन बहुत समझदार लड़का है।

2. पेड़ पर चार बंदर बैठे हैं।

3. यह फूल बहुत सुंदर हैं।

प्रश्न-6 समान अर्थ वाले शब्द :-

1. प्रयत्न - .....

2. हवा - .....

3. नटखट - .....

4. शीश - .....

प्रश्न-7 वाक्य बनाओं:-

(1) शरास्त - .....

(2) कोशिश - .....

प्रश्न-3 राणा सांगा की कोई दो विशेषताएँ लिखो:-

1. ....

2. ....

प्रश्न-9 रचनात्मक कार्य :-

1. विभिन्न फूलों के चित्र चिपकाकर उनके नाम लिखो:-

2. घर में पड़े बेकार सामान से कोई उपयोगी वस्तु बनाओं:-

**RING MIDWAYS SR. SEC. PUBLIC SCHOOL**  
**Main Najafgarh Road, Vipin Garden, New Delhi-110059**  
**Assessment For - II Periodic Assessment - A**  
**Class -III<sup>rd</sup>**  
**Subject-Hindi**

प्रश्न -1 क्रिया की परिभाषा लिखो:-

उ०. ....  
.....

प्रश्न-2 क्रिया के कितने भेद होते हैं ? नाम लिखो :-

उ०. ....  
.....

प्रश्न-3 निम्न पशुओं की बोलियाँ लिखिए:-

- |           |   |       |
|-----------|---|-------|
| 1. हाथी   | - | ..... |
| 2. बकरी   | - | ..... |
| 3. कुत्ता | - | ..... |
| 4. घोड़ा  | - | ..... |

प्रश्न-4 दी गई पंक्तियाँ किसने कही ? नाम लिखो:-

1. “दादा जी, चंद्रमा का आकार एक जैसा क्यों नहीं रहता ?”

उ०. ....

2. “क्या हम चंद्रमा पर रह सकते हैं ?”

उ०. ....

3. “तारे, सूर्य व चंद्रमा से बहुत बड़े हैं ?”

उ०. ....

प्रश्न-5 वाक्य बनाओ:-

- (1) रात - .....

(2) चक्कर - .....

प्रश्न-6 वाक्यों के सामने काल का नाम बताइए :-

1. शीला ने खाना खा लिया हैं। .....

2. हम कल घूमने जाएँगे। .....

3. रोहन पढ़ रहा हैं। .....

प्रश्न-7 वचन बदलो:-

1. बच्चा - .....

2. आदत - .....

3. शिष्य - .....

4. वस्तु - .....

प्रश्न-8 रचनात्मक कार्य :-

1. चाँद के बढ़ते हुए क्रम में उसकी विभिन्न आकृतियाँ बनाइए:-

**RING MIDWAYS SR. SEC. PUBLIC SCHOOL**  
**Main Najafgarh Road, Vipin Garden, New Delhi-110059**  
**Assessment For - II Periodic Assessment - B**  
**Class -III<sup>rd</sup>**  
**Subject-Hindi**

प्रश्न -1 बादलों की काई दो विशेषताएँ लिखो ?

उ०.

1. ....

2. ....

प्रश्न-2 समान तुक वाले शब्द:-

1. जल - .....

2. पाता - .....

प्रश्न-3 वाक्य बनाओं

1. दुनिया - .....

2. शहर - .....

प्रश्न-4 दो-दो पर्यायवाची शब्द लिखो:-

1. सूर्य - .....

2. पानी - .....

3. पर्वत - .....

प्रश्न-5 पर्यायवाची का दूसरा नाम क्या है ?

.....

प्रश्न-6 विलोम शब्द:-

1. गरम - .....

2. खरीदना - .....

3. दिन - .....

4. कोमल - .....

प्रश्न-7 पर्यावरण को साफ रखने के लिए कोई दो उपाय बताइए

उ०.

1. ....
2. ....

प्रश्न-8 खाली स्थान भरें:-

1. ....धरती पर वर्षा लाते हैं
2. विजय सिंह सेठ जी एक आलीशान.....में रहते थे ।
3. सेठ जी ने शहर के पास.....में ज़मीन खरीदी ।
4. विलोम शब्द का दूसरा नाम .....हैं ।

प्रश्न-8 रचनात्मक कार्य :-

1. 'इंद्रधनुष' का एक सुंदर चित्र बनाकर रंग भरिए तथा उस पर कोई पाँच पंक्तियाँ लिखिए ।
2. कंप्यूटर का चित्र बनाकर उसके सभी भागों के नाम लिखिए ।



**RING MIDWAYS SR. SEC. PUBLIC SCHOOL**  
**Main Najafgarh Road, Vipin Garden, New Delhi-110059**

**Assessment For - II Term Assessment - A**

**Class -III<sup>rd</sup>**

**Subject-Hindi**

प्रश्न -1 अनेक शब्दों के लिए एक शब्द लिखो:-

- (1) दूसरों पर दया करने वाला - .....
- (2) जो कभी न मरे - .....
- (3) कपट करने वाला - .....
- (4) मूर्ति बनाने वाला - .....

प्रश्न-2 अशुद्ध वाक्यों को शुद्ध करके लिखो:-

- (1) मैं पानी पिया। .....
- (2) तेरे को किसने मारा। .....
- (3) आज सोमावार का दिन है। .....
- (4) वो मेरी बहन है। .....

प्रश्न-3 हाँ या नहीं :-

1. पानी हमारे लिए अनमोल है। - .....
2. हमें पानी का दुरुपयोग करना चाहिए - .....
3. पानी की कमी से ग्लोबल वार्मिंग बढ़ती जा रही है। - .....
4. होली का त्यौहार फाल्गुन मास की पूर्णिमा का मनाया जाता है। - .....

प्रश्न-4 प्रहलाद किसका पुत्र था ?

उ0. ....

प्रश्न -5 वाक्य प्रयोग :-

1. त्यौहार - .....
2. देश - .....

प्रश्न-6 किन्हीं दो धार्मिक त्यौहारों के नाम लिखो:-

1.        -        .....
2.        -        .....

प्रश्न-7 'होली' विषय पर पाँच पंक्तियाँ लिखो:-

1. ....
2. ....
3. ....
4. ....
5. ....

प्रश्न-6 रचनात्मक कार्य :-

1. 'जल-संरक्षण' विषय से संबंधित एक सुंदर कविता लिखिए।

**RING MIDWAYS SR. SEC. PUBLIC SCHOOL**  
**Main Najafgarh Road, Vipin Garden, New Delhi-110059**

**Assessment For - II Term Assessment - B**

**Class -III<sup>th</sup>**

**Subject-Hindi**

प्रश्न -1 कविता की पंक्तियाँ पूरी करो:-

कर्मवीर के सम्मुख..... ।

हर युग में ..... ।

कर्मवीर बन आगे ..... ।

युग की आज ..... ।

प्रश्न -2 समान तुक वाले शब्द :-

1. मानो - .....

2. पग - .....

3. वीर - .....

4. आगे - .....

प्रश्न -3 विलोम शब्द:-

1. वीर - .....

2. आलसी - .....

3. कमजोर - .....

4. डरपोक - .....

प्रश्न-4 नाम लिखो:-

1. दो शकाहारी पशु - ..... .....

.....

2. दो माँसाहारी पशु - ..... .....

प्रश्न-5 अशब्द को शुद्ध करके लिखो:-

1. अकाश - .....
2. कल्याण - .....
3. आयू - .....
4. अगनी - .....

प्रश्न-6 दिए गए मुहावरों के अर्थ लिखो:-

1. कान भरना - .....
2. हाथ पसारना - .....
3. सिर खाना - .....
4. मुँह में पानी आना - .....

प्रश्न-7 वचन बदलो:-

1. बीमारी - .....
2. खुशी - .....
3. बेटा - .....
4. तारा - .....

प्रश्न-8 खाली स्थान भरो:-

1. एक दिन कपटी.....जंगल में अकेला ही घूम रहा था ।
2. सियार की आँखों से .....के आँसू छलक आए ।

प्रश्न-9 रचनात्मक कार्य :-

1. भारत के 5 महान वैज्ञानिकों के चित्र चिपकाकर नाम लिखिए:-

**RING MIDWAYS SR. SEC. PUBLIC SCHOOL**  
**Main Najafgarh Road, Vipin Garden, New Delhi-110059**  
**Assessment For - I Periodic Assessment - A**  
**Class - III<sup>rd</sup>**  
**Subject- English**

**Q1. Fill in blanks with the words given in the box.**

**(Fly, Mother, rest, Limbs, wings, sleep)**

1. The little birdie told her.....that she wanted to fly.
2. The mother told the little birdie to.....and let her.....become
3. The baby also wanted to .....like the little birdie.
4. The mother told the baby to .....and fly when her.....are strong.

**Q2. Write the opposites of the words given below.**

1. Large            -        .....
2. Old             -        .....
3. Reply          -        .....
4. Start           -        .....
5. Agree          -        .....

**Q3. Write the names of the subjects which you study in your school in alphabetical order:-**

**(English, Hindi, General, Science, Math, Social Studies)**

1. ....
2. ....
3. ....
4. ....
5. ....

**Q4. Write the names of the following people. Arrange them in alphabetical order. Put the correct number in box**

1. Name of your Father	.....	<input type="text"/>
2. Name of your Mother	.....	<input type="text"/>
3. Name of your Brother	.....	<input type="text"/>
4. Name of your Sister	.....	<input type="text"/>
5. Name of your best Friend	.....	<input type="text"/>
6. Name of your class Teacher	.....	<input type="text"/>

**Activity**

**Q5. Make a beautiful sentences of Alphabetical order in chart.**

**RING MIDWAYS SR. SEC. PUBLIC SCHOOL**  
**Main Najafgarh Road, Vipin Garden, New Delhi-110059**  
**Assessment For - I Periodic Assessment - B**  
**Class - III<sup>rd</sup>**  
**Subject- English**

**Q1. Chosse the sound word form the box for each of the following  
( Whistles, Clicks, Pops, Ticks, Swishes, Rumbles, Nibbles, Pecks)**

1. The Woodpecker .....
2. The Taster .....
3. The Cooker .....
4. The Curtain .....
5. The Clock .....
6. The Camera .....
7. The Stomach .....
8. The Squirrel .....

**Q2. Write the names of the clothes and accessories by joining the words given in the box.**

- |       |       |
|-------|-------|
| Night | Robe  |
| Flip  | Bag   |
| Bath  | Coat  |
| Hand  | Suit  |
| Over  | Flops |
| Track | Gown  |

**Q3. Fill in each blank with the antonyms of the highli ghted word.**

1. The coad is Black but the snow is .....
2. The feather is Light but the rock is .....

3. The Snail is slow but the hare is .....
4. The lion is Wild bu the sheep is .....
5. The stone is Hard but the jelly is .....
6. The sugar is Sweet but the lemon is .....

### **Activity**

**Make a beautiful chart on the (Negative positive sentences) with help of colour pencil.**



**RING MIDWAYS SR. SEC. PUBLIC SCHOOL**  
**Main Najafgarh Road, Vipin Garden, New Delhi-110059**  
**Assessment For - I Term Assessment - A**  
**Class - III<sup>rd</sup>**  
**Subject- English**

**Q1. Where do animals live? Match the column.**

Column (a)		Column (b)	
1.	Spider	(a)	Stable
2.	Tiger	(b)	Kennel
3.	Hen	(c)	Shed
4.	Horse	(d)	Web
5.	Dog	(e)	Den
6.	Cow	(f)	Coop
7.	Lion	(g)	Lair

**Q2. Make new words as directed.**

1. Grow (add-ing) .....
2. Fly (add-ing) .....
3. Run (add-ing) .....
4. Cold (add-ing) .....
5. Fix (add-ing) .....
6. Trim (add-ing) .....

**Q3. Write the plural form of each word.**

1. Self .....
2. Dress .....
3. Squirrel .....
4. Branch .....

5. Bird .....

6. Old man .....

7. Lady .....

### **Activity**

**Write (10) pairs of sentences on scrap book.**

**RING MIDWAYS SR. SEC. PUBLIC SCHOOL**  
**Main Najafgarh Road, Vipin Garden, New Delhi-110059**  
**Assessment For - I Term Assessment - B**  
**Class - III<sup>rd</sup>**  
**Subject- English**

**Q1. Complete each analogy by writing the correct word.**

1. Sun is to day as moon is to .....
2. Feathers is to bird as fins is to .....
3. Eyes is to see as nose is to .....
4. Brush is to point as pencil is to .....
5. Dozes is to twelve as couple is to .....
6. Three is to triangle as four is to .....

**Q2. Fill in the blanks with**

**(is, am, Are)**

1. We.....in the school today.
2. I .....a good student.
3. Rita..... a doctor.
4. Cows.....in the meadow.
5. The market.....closed today.
6. Mani and Rani.....in th train.

**Q3. Put a, am or the before the following words.**

1. ....City
2. .... Onion

3. ....Rabbit

4. .... Ram

5. ....iron

6. ....Horse

7. ....Pot

8. .... arrow

### **Activity**

**Q4.Make a beautiful chart on (Articles) with the help of colourful pencil.**

**RING MIDWAYS SR. SEC. PUBLIC SCHOOL**  
**Main Najafgarh Road, Vipin Garden, New Delhi-110059**  
**Assessment For - II Periodic Assessment - A**  
**Class - III<sup>rd</sup>**  
**Subject- English**

**Q1. The (✓) the things the walrus in the story did.**

- |                                      |                          |
|--------------------------------------|--------------------------|
| 1. Played on the ice                 | <input type="checkbox"/> |
| 2. Dived into icy water              | <input type="checkbox"/> |
| 3. Slid down the snow on its stomach | <input type="checkbox"/> |
| 4. Lived in deep waters              | <input type="checkbox"/> |
| 5. Caught molluscs                   | <input type="checkbox"/> |
| 6. Attacked and auorrelled           | <input type="checkbox"/> |

**Q2. Write down the full from of the following.**

- |            |       |
|------------|-------|
| 1. it's    | ..... |
| 2. there's | ..... |
| 3. didn't  | ..... |
| 4. wasn't  | ..... |
| 5. you'll  | ..... |
| 6. you're  | ..... |

**Q3. Write the plural of the following nouns.**

- |           |       |
|-----------|-------|
| 1. Plant  | ..... |
| 2. Day    | ..... |
| 3. Leaf   | ..... |
| 4. Cloth  | ..... |
| 5. Branch | ..... |
| 6. Goat   | ..... |

7. Rock .....

8. Story .....

### **Activity**

**Q.4 Make a beautiful chart on Interjection.**

**RING MIDWAYS SR. SEC. PUBLIC SCHOOL**  
**Main Najafgarh Road, Vipin Garden, New Delhi-110059**  
**Assessment For - II Periodic Assessment - B**  
**Class - III<sup>rd</sup>**  
**Subject- English**

**Q.1 Circle the subject and underline the predicates in the following sentences.**

1. The books are in the cupboard.
2. Tony and Ria are leaving for the airport.
3. The big blue car roared off the street.
4. The girls were planting seeds in the soil.
5. Your mother is looking for you.

**Q2. Tick (✓) the correct habits and cross out (✗) the wrong ones.**

- |                                      |                          |
|--------------------------------------|--------------------------|
| 1. Plucking leaves of a plant        | <input type="checkbox"/> |
| 2. Watering a plant                  | <input type="checkbox"/> |
| 3. Breaking thing and small branches | <input type="checkbox"/> |
| 4. Stealing eggs from a bird's nest  | <input type="checkbox"/> |
| 5. Putting graing fro under a tree   | <input type="checkbox"/> |

**Q3. Underline the verbs in the following sentences.**

1. Tanu goes to the market
2. Rahul writes a letter to his friend.
3. Deer runs very fast.
4. Monkey eats a banana.
5. Rashi drinks cold water.

**Q4. Choose the right words from the option given to fill in the blanks.**

1. The .....horse ran away. (man's/mans')
2. The three.....ties looked exactly the same. (brother's/brothers)
3. The .....room is clean. (Child's/children's)
4. The.....lunches are ready. (kid's/ kids)
5. The .....dog is barking loudly. (neighbous'/neighbours')

**Activity**

**Q5. Make a beautiful chart on (Verb) With help of colour pencil.**



**RING MIDWAYS SR. SEC. PUBLIC SCHOOL**  
**Main Najafgarh Road, Vipin Garden, New Delhi-110059**  
**Assessment For - II Term Assessment - A**  
**Class - III<sup>rd</sup>**  
**Subject- English**

**Q1. Find one more suitable adjective from the box and write in the space given before each word**

	<b>Noun</b>		<b>Adjectives</b>
1.	Weight	Heavy	.....
2.	Touch	Soft	.....
3.	Speed	Quick	.....
4.	Age	Young	.....
5.	Shape	Square	.....
6.	Emotion	Happy	.....
7.	Size	Small	.....
8.	Temperature	Hot	.....
9.	Distance	Short	.....
10.	Colour	Pink	.....

(For, Brown, Sad, Old, Light, Cool, Rough, Circular, Big, Slow)

**Q2. Complete the following words with the vowels (a, e, i, o, u)**

1. Fri.....nds.
2. Inv.....tai.....n
3. Cl.....v.....r
4. P..... pl.....

5. F.....st

6. D.....ng.....r

**Q3. Circle the adjectives and underline the noun.**

1. The cows are white.

2. It is a rainy day.

3. Mother was happy.

4. My uncle is rich

**Activity**

**Q4. Write few adjective words on scrap book.**

**RING MIDWAYS SR. SEC. PUBLIC SCHOOL**  
**Main Najafgarh Road, Vipin Garden, New Delhi-110059**  
**Assessment For - I Term Assessment - B**

**Class - III<sup>rd</sup>**  
**Subject- English**

**Q1. The letters 'ar' can come at the beginning in the middle or at the end of a word.**

**Form words with-**

**'ar' in the beginning**

1. .... tist = .....

2. .... my = .....

3. .... row = .....

**'ar' in the middle**

4. p.... ty = .....

5. st.... t = .....

6. d.... t = .....

**'ar' at the end**

7. st... = ....

8. calend... = ....

9. vineg... = ....

**Q2. Circle the odd word out the following sets of words.**

1. Long                      Wide                      High                      Wet

2. Stable                      Kennel                      Pen                      Room

3. Peck                      Fly                      Lick                      Chew

4. Hiss                      Crack                      Croak                      Quack

5. Red                      Blue                      Sun                      Pink

**Q3. Draw a line to join two words together to make a compound word.**  
**Write the compound words in the space given.**

1. Snow    a. Bow                      =

.....

2. Moon    b. Paper                      =                      .....

3. News    c. Light                      =                      .....

4. Fire	d. Bug	=	.....
5. Rain	e. Man	=	.....
6. Lady	f. Flake	=	.....

### Activity

**Q4. Write (10) question and Answer on scrap book.**

**RING MIDWAYS SR. SEC. PUBLIC SCHOOL**  
**Main Najafgarh Road, Vipin Garden, New Delhi-110059**  
**Assessment For - I Periodic Assessment - A**

**Class - III<sup>rd</sup>**

**Subject- Maths**

**Q1. Fill in the blanks:-**

- a) The Successor of 999 is.....
- b) The predecessors of 4000 is .....
- c) The expanded form of 3258 is .....+200+.....+8
- d) Smallest 4 digit number is.....
- e) Greatest 4 digit number is.....
- f) Place value of 4 in 9467 is .....
- g)  $3000 + 500 + 60 + 7 =$  .....

**Q2. Put a tick (✓) mark on the correct statement:-**

- a) Place value of 0 in 2203 is 10 ☐
- b) Place value of 8 in 3860 is 800 ☐
- c) The smallest 4 digit number formed by the digit 1, 0, 3, 1 is 1103 ☐
- d) The greatest 4 digit number formed by the digits 2, 0, 4, 1 is 4210 ☐

**Q3. Compare the given numbers and put  $>$ ,  $<$ ,  $=$  in the boxes:-**

- a)  $185 \square 815$
- b)  $599 \square 599$
- c)  $799 \square 979$
- d)  $9500 \square 5900$

**Q5. Arrange these numbers in ascending and descending order :-**

1. 7358 ,      2560,      5869,      7959,      3805

Ascending order : ....., ....., ....., ....., .....

Descending order : ....., ....., ....., ....., .....

2. 9099, 9585, 9343, 9169, 9889

Ascending order : ....., ....., ....., ....., .....

Descending order : ....., ....., ....., ....., .....

**Q.5 Observe the pattern and fill in the blanks**

a) 3612, 3613, 3614 ....., ....., .....

b) 2543, 3543, 4543 ....., .....,

.....,

**Activity**

**Q6. To represent the greatest and smallest 4 digit number on abacus.**

**RING MIDWAYS SR. SEC. PUBLIC SCHOOL**  
**Main Najafgarh Road, Vipin Garden, New Delhi-110059**  
**Assessment For - I Periodic Assessment - B**

**Class - III<sup>rd</sup>**

**Subject- Maths**

**Q.1 Find the sum :-**

TH	H	T	O	TH	H	T	O	TH	H	T	O
1	4	3	2	3	1	6	4	7	3	2	8
+ 5	3	6	0	+ 4	4	1	5	+ 1	4	6	0
<hr/>				<hr/>				<hr/>			
<hr/>				<hr/>				<hr/>			

**Q.2 Find the difference:-**

TH	H	T	O	TH	H	T	O	TH	H	T	O
5	4	3	2	4	3	5	7	5	0	0	0
-	3	1	1	- 2	1	4	6	- 3	4	4	4
<hr/>				<hr/>				<hr/>			
<hr/>				<hr/>				<hr/>			

**Q.3 Fill in the blanks**

- a)  $376 + 684 = \dots\dots\dots + 376$   
 b)  $684 + 275 = 275 + \dots\dots\dots$   
 c)  $5472 + \dots\dots\dots = 2857 + 5472$   
 d)  $\dots\dots\dots + 8761 = 8761 + 6789$

**Q.4 Express the following in Roman numerals :-**

- a) 18       $\dots\dots\dots$   
 b) 24       $\dots\dots\dots$   
 c) 38       $\dots\dots\dots$   
 d) 45       $\dots\dots\dots$

- e) 68 .....
- f) 77 .....
- g) 313 .....
- h) 619 .....

**Q.5 Express the following in Hindu-Arabic numerals :-**

- a) XI .....
- b) XXVI .....
- c) LXXVII .....
- d) XLIV .....
- e) XCVI .....
- f) CXIX .....
- g) CXIII .....
- h) CDXX .....

**Q.6 Activity :-**

Write the roman numbers 1 to 10 using match sticks.



# RING MIDWAYS SR. SEC. PUBLIC SCHOOL

## Main Najafgarh Road, Vipin Garden, New Delhi-110059

### Assessment For - I Term Assessment - A

**Class - III<sup>rd</sup>**  
**Subject- Maths**

**Q.1 Fill in the blanks :-**

$$\begin{array}{r} \text{a) } \begin{array}{cccc} 3 & \square & 1 & 6 \\ + 1 & 2 & 5 & \square \\ \hline \square & 6 & \square & 3 \end{array} \end{array}$$

$$\begin{array}{r} \text{b) } \begin{array}{cccc} 5 & \square & 4 & 1 \\ + 2 & 8 & \square & \square \\ \hline \square & 1 & 0 & 9 \end{array} \end{array}$$

$$\begin{array}{r} \text{c) } \begin{array}{cccc} \square & 0 & 1 & \square \\ + 4 & 3 & \square & 7 \\ \hline 12 & \square & 7 & 9 \end{array} \end{array}$$

**Q.2 Fill in the blanks**

- a)  $15 \times 7 = \dots\dots\dots$   
 b)  $16 \times 5 = \dots\dots\dots$   
 c)  $12 \times \dots\dots\dots = 108$   
 d)  $\dots\dots\dots \times 4 = 56$   
 e)  $\dots\dots\dots \times 11 = 99$   
 f)  $13 \times \dots\dots\dots = 117$

**Q.3 Find the product**

$$\begin{array}{r} \text{H} \quad \text{T} \quad \text{O} \\ 5 \quad 1 \quad 2 \\ \times \quad 3 \\ \hline \\ \hline \\ \hline \end{array}$$

$$\begin{array}{r} \text{H} \quad \text{T} \quad \text{O} \\ 3 \quad 2 \quad 0 \\ \times \quad 7 \quad 2 \\ \hline \\ \hline \\ \hline \end{array}$$

$$\begin{array}{r} \text{H} \quad \text{T} \quad \text{O} \\ 1 \quad 5 \quad 9 \\ \times \quad 6 \quad 3 \\ \hline \\ \hline \\ \hline \end{array}$$

**Q.4 Fill in the blanks**

- a)  $425 \times 18 = 18 \times \dots\dots\dots$   
 b)  $712 \times \dots\dots\dots = 0$   
 c)  $220 \times \dots\dots\dots = 112 \times \dots\dots\dots$

d)  $38 \times 910 \times 515 = 38 \times 515 \times \dots\dots\dots$

**Q.5 Find the quotient with the help of multiplication table :-**

a)  $24 \div 6 =$

b)  $32 \div 9 =$

c)  $54 \div 9 =$

d)  $80 \div 8 =$

e)  $72 \div 8 =$

f)  $49 \div 7 =$

g)  $110 \div 11 =$

h)  $120 \div 12 =$

i)  $75 \div 15 =$

**Q.6 Activity :-**

**Make a chart of tables '2 to 50'.**

**RING MIDWAYS SR. SEC. PUBLIC SCHOOL**  
**Main Najafgarh Road, Vipin Garden, New Delhi-110059**  
**Assessment For - I Term Assessment - B**  
**Class - III<sup>rd</sup>**  
**Subject- Maths**

**Q.1 Fill in the blanks**

a)  $42 \div 7 = \dots\dots\dots$

b)  $25 \div \dots\dots\dots = 5$

c)  $\dots\dots\dots \div 7 = 4$

d)  $\dots\dots\dots \div 6 = 8$

e)  $77 \div \dots\dots\dots = 7$

f)  $81 \div \dots\dots\dots = 9$

**Q.2 Divide and write quotient and remainder.**

a)  $\sqrt[8]{419}$

b)  $\sqrt[6]{256}$

c)  $\sqrt[9]{487}$

**Q.3 Write the fractions for the coloured part of these figures :-**



**Q.4 Write the names of the given fractions :-**

a)  $\frac{1}{2} =$

b)  $\frac{1}{4} =$

c)  $\frac{3}{4} =$

**Q.5 Fill in the box by > or < to make each statement true**

a)  $\frac{3}{16}$    $\frac{5}{16}$

b)  $\frac{13}{20}$    $\frac{25}{40}$

c)  $\frac{7}{18}$    $\frac{13}{18}$

d)  $\frac{13}{17}$    $\frac{22}{34}$

**Q.6 Activity :- Material required :- A Craft paper**

**A craft paper should be taken and divided into four equal pieces.**

**Note:- Each part is one fourth of  $\frac{1}{4}$  of the original.**

**RING MIDWAYS SR. SEC. PUBLIC SCHOOL**  
**Main Najafgarh Road, Vipin Garden, New Delhi-110059**  
**Assessment For - Ii Periodic Assessment - A**  
**Class - III<sup>rd</sup>**  
**Subject- Maths**

**Q.1 Fill in the blanks the words 'flat' 'curved' or 'straight' :-**

- a) A Rectangle has .....sides and .....vertices.
- b) A triangle has .....sides and .....vertices.
- c) All sides of a square are .....
- d) The opposite sides of a .....are equal
- e) There is no side or vertex of a .....

**Q.2 Give any two examples of these solid shapes.**

- a) Cube = ....., .....
- b) Cuboid = ....., .....
- c) Cylinder = ....., .....
- d) Cone = ....., .....
- e) Sphere = ....., .....

**Q.3 Find the perimeter of a triangle whose each side is 4cm.**

**Q.4 Find the perimeter of a square whose each side is 3cm**

**Q.5 Draw the line segments whose lengths are**

- a) 3 cm
- b) 4 cm
- c) 6 cm

**Q.6 How many lines you can draw through?**

- a) One point
- b) Two Points
- c) Three points

**Q.7 Activity :-**

**Make a chart of geometrical shapes using coloured glazed paper.**

**RING MIDWAYS SR. SEC. PUBLIC SCHOOL**  
**Main Najafgarh Road, Vipin Garden, New Delhi-110059**  
**Assessment For - II Periodic Assessment - B**  
**Class - III<sup>rd</sup>**  
**Subject- Maths**

**Q.1 Convert the following amounts into paise**

- a) 15 rupees =
- b) 25 rupees =
- c) 35 rupees =
- d) 70 rupees =

**Q.2 Convert the following into rupees and paise**

- a) 1508 P =
- b) 8080 P =
- c) 4535 P =
- d) 7535 P =

**Q.3 Solve the following :-**

- a) ₹55.75 = .....
- b) ₹325.15 = .....

**Q.4 Add the following :-**

a) 
$$\begin{array}{r} \text{₹ } 65 . \quad 25 \\ + \text{₹ } 19 . \quad 20 \\ \hline \end{array}$$

b) 
$$\begin{array}{r} \text{₹ } 15 . \quad 35 \\ + \text{₹ } 75 . \quad 40 \\ \hline \end{array}$$

**Q.5 Find the difference**

a) ₹ 64.65 - ₹ 28.75

b) ₹ 100.0 - ₹ 79.35

**Q.6 Find the products :-**

a) ₹ 50 x 5 =

b) ₹ 90.25 x 5 =

a) ₹ 80.24 x 8 =

b) ₹ 35.04 x 4 =

**Activity :-**

Paste the different types of money. (Indian currency)



**RING MIDWAYS SR. SEC. PUBLIC SCHOOL**  
**Main Najafgarh Road, Vipin Garden, New Delhi-110059**  
**Assessment For - II Term Assessment - A**

**Class - III<sup>rd</sup>**

**Subject- Maths**

**Q.1 Fill in the blanks by using a.m or p.m:-**

- a) 3 O'clock in the morning means .....
- b) 10 O'clock at night means.....
- c) Quarter to 6 in the evening is written as.....
- d) Quarter to 12 before noon is written as.....

**Q.2 Convert these units**

- a) 1 month = ..... days.
- b) 1 week = ..... days.
- c) 1 day = .....hours
- d) 1 hour = .....minutes.
- e) 1 minute = ..... seconds.

**Q.3 Draw the clock and show the time in each**

- a) 1 : 15
- b) 12 : 30
- c) 7 : 45

**Q.4 Which units of length would you choose to express the following**

- a) Length of your note book =
- b) Height of the building of your house =
- c) Length of a black board =
- d) The distance between your school to your home =
- e) The distance between Delhi to Agra =

**Q.5 Convert into centimeter**

a) 6 m =

b) 9 m =

**Q.5 Convert into meters.**

a) 5 km =

b) 13 km =

**Q.7 Activity :-**

**Make a model of clock using thermocol sheet.**

**RING MIDWAYS SR. SEC. PUBLIC SCHOOL**  
**Main Najafgarh Road, Vipin Garden, New Delhi-110059**  
**Assessment For - II Term Assessment - A**

**Class - III<sup>rd</sup>**

**Subject- Maths**

**Q.1 Add :-**

$$\begin{array}{r} \text{I)} \quad \begin{array}{cc} \text{kg} & \text{g} \\ 6 & 300 \\ + 7 & 200 \\ \hline \end{array} \end{array}$$

$$\begin{array}{r} \text{ii)} \quad \begin{array}{cc} \text{kg} & \text{g} \\ 12 & 200 \\ + 10 & 100 \\ \hline \end{array} \end{array}$$

$$\begin{array}{r} \text{iii)} \quad \begin{array}{cc} \text{kg} & \text{g} \\ 35 & 425 \\ + 25 & 120 \\ \hline \end{array} \end{array}$$

$$\begin{array}{r} \text{iv)} \quad \begin{array}{cc} \text{kg} & \text{g} \\ 24 & 316 \\ + 15 & 360 \\ \hline \end{array} \end{array}$$

**Q.2 Convert into grams :-**

a) 5 kg =

b) 9 kg =

c) 15 kg =

d) 35 kg =

**Q.3 Convert into kg**

a) 4000 g =

b) 8000 g =

c) 11000 g =

d) 13000 g =

#### Q.4 How many milliliters are there in?

a) 8 litres =

b) 15 litres =

c) 19 litres =

c) 25 litres

#### Q.5 Fill in the blanks :-

a) 4 kg 32 g = .....g

b) 5000 g = .....kg

c) 33 kg.....g = 33415g

d).....kg 312g = 364312g

e) 6060 ml = .....l .....ml

f) 2008 ml = .....l .....ml

g) 1575 ml = .....l .....ml

h) 16800 ml.....l.....ml

#### Q.6 Activity :-

Make a list of the weight and length of the object.

a) Length of your scale =

b) Length of your maths book =

c) Your weight =

d) Length of your Desk =

e) Length of your pencil box =

f) Length of your Lunch box =

g) Weight of your school bag =

**RING MIDWAYS SR. SEC. PUBLIC SCHOOL**  
**Main Najafgarh Road, Vipin Garden, New Delhi-110059**  
**Assessment For - I Periodic Assessment - A**  
**Class - III<sup>rd</sup>**  
**Subject- Science**

**Q.1 Name two things each made of the following materials that we use in our everyday life :-**

- |             |       |       |
|-------------|-------|-------|
| 1. Wood     | ..... | ..... |
| 2. Metal    | ..... | ..... |
| 3. Chemical | ..... | ..... |

**Q.2 All living things grow**

1. A chick grows into a .....
2. A caterpillar grows into a .....
3. A colt grows into a .....
4. A baby grows into a .....

**Q.3 Write a man - made things :-**

- |                                 |       |       |
|---------------------------------|-------|-------|
| 1. Two things made of wood      | ..... | ..... |
| 2. Two things made of plastic   | ..... | ..... |
| 3. Two things made of metals    | ..... | ..... |
| 4. Two things made of chemicals | ..... | ..... |

**Q.4 Activity :-**

Write any four characteristics of living and non-livings things paste pictures that explain each..

**RING MIDWAYS SR. SEC. PUBLIC SCHOOL**  
**Main Najafgarh Road, Vipin Garden, New Delhi-110059**  
**Assessment For - I Periodic Assessment - B**  
**Class - III<sup>rd</sup>**  
**Subject- Science**

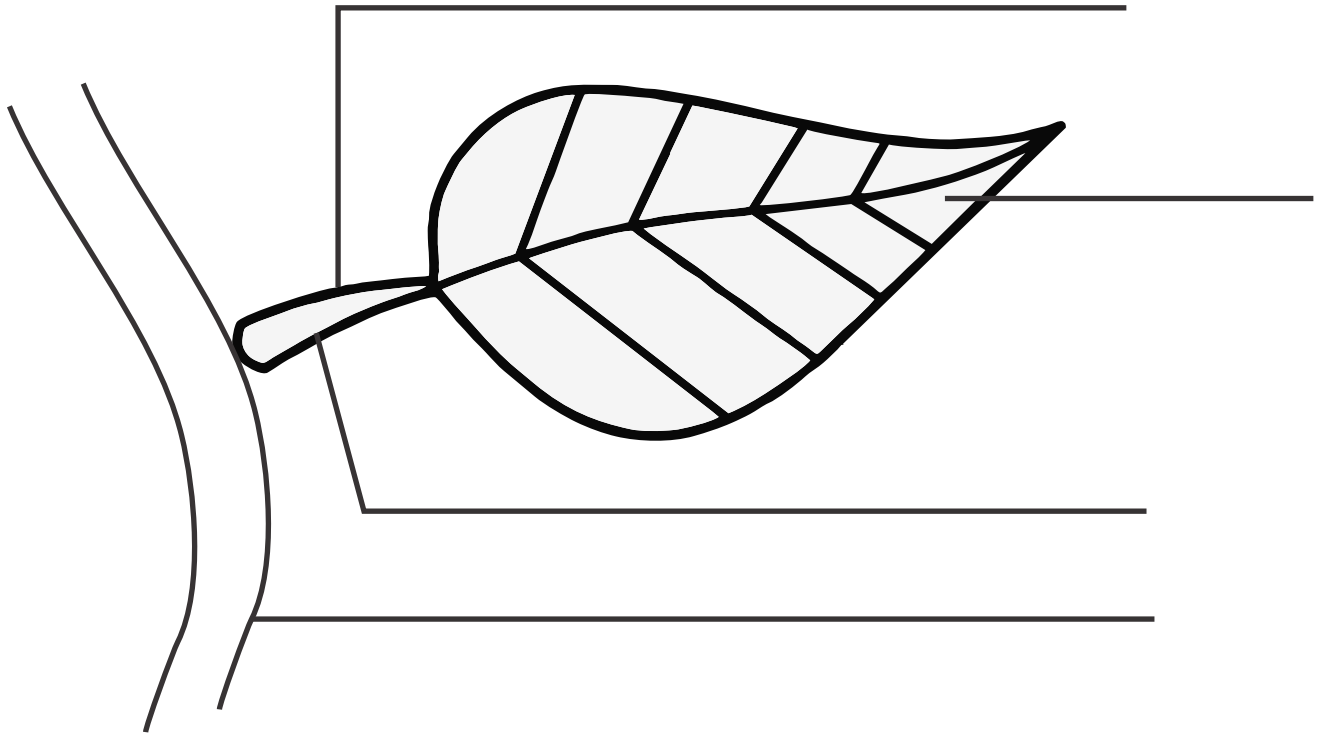
**Q.1 Fill in the blanks.**

1. All flowers produce a sweet juice called.....
2. Fish eggs develop into.....
3. The under surface of the leaves have tiny opening called.....
4. A leaf has a flat broad part called the .....or .....
5. Stem supports the plant.....the soil.

**Q.2 Name the following :-**

1. Food factory of the plant.....
2. Broad part of the leaf.....
3. Animals can be wild or.....
4. Process by which leaves make their own food. ....
5. This attaches the leaf to the grows.....
6. Point from where the leaf grows.....

**Q.3 Label them**



**Q.5 Activity :-**

1. Paste pictures of these vegetable, them match to the plant parts.

**RING MIDWAYS SR. SEC. PUBLIC SCHOOL**  
**Main Najafgarh Road, Vipin Garden, New Delhi-110059**  
**Assessment For - I Term Assessment - A**  
**Class - III<sup>rd</sup>**  
**Subject- Science**

**Q.1 Complete the sentences :-**

1. Feathers make wings .....
2. Strong flight muscles help the.....
3. Streamlined body is narrow at the front and .....
4. Hollow bones make.....
5. Tail feathers.....

**Q.2 Define the following :-**

1. Streamlined .....
2. Flightless birds .....
3. Perching birds .....
4. Scratching birds .....
5. Wading birds .....

**Q.3 Explain with examples :-**

1. Herbivores
2. Omnivores

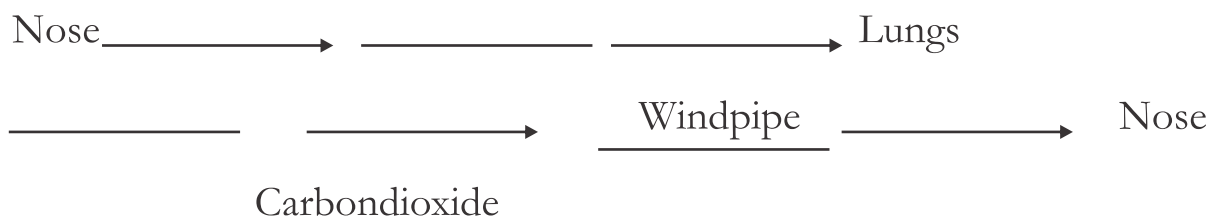
**Q.4 Activity**

Draw the beaks of the birds that feed on the given foods and colour them



**RING MIDWAYS SR. SEC. PUBLIC SCHOOL**  
**Main Najafgarh Road, Vipin Garden, New Delhi-110059**  
**Assessment For - I Term Assessment - B**  
**Class - III<sup>rd</sup>**  
**Subject- Science**

**Q.1 Complete it :-**



**Q.2 Match the item with its use :-**

I

Cotton

Flowers

Tulsi

Silkworm

Hen

Goat

Spices

Fish

II

Perfumes

Silk cloth

Flavouring food

Eggs

Codliver oil

Mutton

Medicines

Fibre

**Q.3 Give two example :-**

- |                      |       |       |
|----------------------|-------|-------|
| 1. Mammals           | ..... | ..... |
| 2. Oviparous Animals | ..... | ..... |
| 3. Herbivores        | ..... | ..... |
| 4. Carnivores        | ..... | ..... |

5. Omnivores

.....

.....

**Q.4 Activity:**

1. Draw and colour an adult animal with its baby. Write names of both baby and the adult animal.

# RING MIDWAYS SR. SEC. PUBLIC SCHOOL

Main Najafgarh Road, Vipin Garden, New Delhi-110059

## Assessment For - II Periodic Assessment - A

### Class - III<sup>rd</sup>

### Subject- Science

**Q.1 Now think and write examples of each :**

Solide

.....

.....

.....

Liquids

.....

.....

.....

Gases



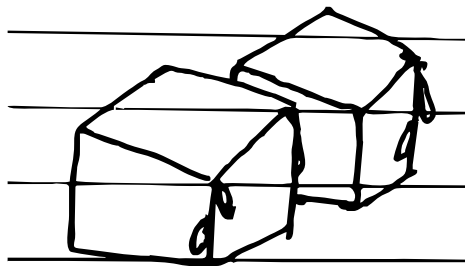
.....

.....

.....

**Q.2 Changes of states**

Look at the pictures and write the state in which these things are



State:- .....

.....

.....

**Q.3 What will happen if you keep the ice cubes out side for a while?**

Ans :- .....  
.....

**Q.4 What will happen when you heat a pan of water?**

Ans :- .....  
.....

**Activity :-**

1. Take a sample of different kind of soil from the garden and paste on the chart paper. Write there names.

**RING MIDWAYS SR. SEC. PUBLIC SCHOOL**  
**Main Najafgarh Road, Vipin Garden, New Delhi-110059**  
**Assessment For - II Periodic Assessment - B**  
**Class - III<sup>rd</sup>**  
**Subject- Science**

**Q.1 Fill in the blanks :-**

1. A footballer can use force to .....of the ball.
2. When we.....an object, it moves towards us
3. Some sound fall as soft sounds on our ears and others fall as.....
4. When we .....an object, it moves away from us.
5. This .....and.....moves the object. It is called.....

**Q.2 Let us recall any ten sounds that we have heard since morning**

- |         |          |
|---------|----------|
| 1. .... | 6. ....  |
| 2. .... | 7. ....  |
| 3. .... | 8. ....  |
| 4. .... | 9. ....  |
| 5. .... | 10. .... |

**Activity:-**

1. Make a table and list the difference between renewable and non-renewable sources of energy with example.

**RING MIDWAYS SR. SEC. PUBLIC SCHOOL**  
**Main Najafgarh Road, Vipin Garden, New Delhi-110059**  
**Assessment For - II Term Assessment - A**  
**Class - III<sup>rd</sup>**  
**Subject- Science**

**Q.1 Write a five ways to be climate friendly.**

1. ....
2. ....
3. ....
4. ....
5. ....

**Q.2 Complete the sentences :**

1. Cubit and hand span do not give the correct length because.....  
.....
2. The measurement of mass tells us .....  
.....
3. The measurement of temperature tells us.....  
.....
4. The capacity of the liquid is.....  
.....
5. Scientists also use thermometers to.....  
.....

**Q.3 Write true or false against the following statements :-**

1. Temperature tells us whether the day is windy or still.....
2. Humidity causes sweating.....
3. Weatherman forecasts weather using information from satellites.....
4. Global warming is the increase of humidity.....
5. Switching to solar energy will be helpful in saving the environment .....

**Activity :**

1. Draw and name any four sources of pollution, that are causing global warming
2. Draw an electronic weighing scale used in outlets like Reliance Fresh by the customers to measure vegetables.

**RING MIDWAYS SR. SEC. PUBLIC SCHOOL**  
**Main Najafgarh Road, Vipin Garden, New Delhi-110059**  
**Assessment For - II Term Assessment - B**  
**Class - III<sup>rd</sup>**  
**Subject- Science**

**Q.1** Take a close look at the following pictures. Identify the cause of pollution in each.

1.




.....

.....

.....

2.



.....

.....

.....

3.



.....

.....

.....

4.



.....

.....

.....



5.



.....

.....

.....

**Q.2** What kind of pollution is shown in the pictures above?


.....

.....

.....

**Q.3** Take a close look at the following pictures. Identify the causes of pollution in each :

1.



.....

.....

.....

2.




.....

.....

.....

3.




.....

.....

.....

4.




.....

.....

.....

5.



.....

.....

.....

**Q.4** What kind of pollution is shown in the pictures above?

.....

.....

.....

**Activity :-**

1. In the space provided below draw pictures of green environment and of polluted environment.

**RING MIDWAYS SR. SEC. PUBLIC SCHOOL**  
**Main Najafgarh Road, Vipin Garden, New Delhi-110059**  
**Assessment For - I Periodic Assessment - A**  
**Class - III<sup>rd</sup>**  
**Subject- Social Studies**

**Q1. Write the names of the eight planets in the solar system**

1. ....
2. ....
3. ....
4. ....
5. ....
6. ....
7. ....
8. ....

**Q.2 Give one word answer :**

1. A big map hanging on the wall is called .....
2. Who proved that earth round .....
3. The first man to go into space .....
4. Indian ocean is named after this country .....
5. Who proved that sun was at the centre of the .....
6. Solar system and the earth revolves around it .....

**Q.3 Draw three layers of the earth and colour it.**



**Q.4 Match the column :-**

**Column A**

1. Magellan
2. Nepal
3. North
4. Solar system
5. Indian ocean

**Column A**

- a. India's neighbouring country
- b. A Spanish sailor
- c. The suns' family
- d. Named after our country
- e. A direction

**Q.5 Activity :-**

1. Mark, colour and lable seven continents on the political map of world.
2. Mark, colour and lable four ocean on the political map of the world.

**RING MIDWAYS SR. SEC. PUBLIC SCHOOL**  
**Main Najafgarh Road, Vipin Garden, New Delhi-110059**  
**Assessment For - I Periodic Assessment - B**  
**Class - III<sup>rd</sup>**  
**Subject- Social Studies**

**Q1. Correct the given sentences**

1. Manipur receives the highest rainfall in the world  
.....
2. There are 25 states in India  
.....
3. China is the seuorel most populous country in the world.  
.....
4. Goa is the capital of India.  
.....
5. The Nanda Devi is the highest mountain peak is the world.  
.....

**Q.2 Match the columns :-**

Union Territories	Capital
1. Andaman and Nicobar Islands.	New Delhi
2. Chandigarh	Puducherry
3. Dadra and Nagar Haveli	Part blair
4. Daman and Diu	Kavaratte
5. Lakshadweep	Silvassa
6. National capital Territory of Delhi	Daman
7. Puducherry	Chandigarh

**Q.3 Write one sentence for the following :-**

1. Mountain : .....
2. Island : .....
3. Government : .....

**Q.4 Write the names of**

1. Three rivers which originate from the Himalayas.  
a) ..... b) ..... c) .....
2. Three water bodies which surround India  
a) ..... b) ..... c) .....

**Q-5 Activity :-**

1. Mark, colour and label the following rivers on the political map of India.  
a) Ganga                      b) Yamuna                      c) Narmada                      d) Godavari e) Kaveri
2. Mark, colour and label the following states with capitals on the political map of India.  
a) Rajasthan (Jaipur)  
b) Goa (Panaji)  
c) Jammu & Kashmir (Srinagar)  
d) West Bengal (Kolkata)  
e) Maharashtra (Mumbai)

**RING MIDWAYS SR. SEC. PUBLIC SCHOOL**  
**Main Najafgarh Road, Vipin Garden, New Delhi-110059**  
**Assessment For - I Term Assessment - A**  
**Class - III<sup>rd</sup>**  
**Subject- Social Studies**

**Q.1 Write 'T' for true and 'F' for false statements :-**

1. Men in Tamil Nadu wear veshti. ☐
2. The climate of our country is the same everywhere. ☐
3. Rasogulla and Sandesh are famous sweets of Bengal. ☐
4. Tea and coffee are beverages. ☐
5. Clothing differs from region to region. ☐

**Q.2 Answer the following questions.**

1. Write the names of two headwears of man.

.....

2. Write the names of three kinds of people who wear uniforms

.....

3. Name any three things prepared from milk

.....

4. Name any three oils used in India.

.....

5. Write down the names of the clothes mostly worn by your father and mother.

.....

**Q.3 Tick (✓) the right option:-**

1. The men and women in Kashmir wear a long woollen kurta called.....

a. Veshti ☐                      b. Mundu ☐                      c. Phiran ☐

2. In eastern part of India, rice is eaten with.....

a. Fish ☐

b. Milk ☐

c. Pulses ☐

3. The women of sikkim wear long skirt called.....

a. Ghagra-Rurta ☐

b. Baku ☐

c. Lehenga - Choli ☐

4. .... is called the shice garden of India.

a. Kerala ☐

b. Tamil Nadu ☐

c. Assam ☐

5. People doing special jobs wear.....

a. Angarakha ☐

b. Turban ☐

c. Uniforms ☐

**Q.4 Match the columns :-**

**Column A**

1. Salwar
2. Jurpan
3. Dhoti
4. Veshti
5. Saree

**Column A**

- a. Blouse
- b. A kind of lungi
- c. A head wear.
- d. Kurta
- e. Kameez

**Activity :-**

1. Collect pictures of different food belonging to different states and paste it.
2. Collect pictures of different dresses belonging to different states and paste it.



**RING MIDWAYS SR. SEC. PUBLIC SCHOOL**  
**Main Najafgarh Road, Vipin Garden, New Delhi-110059**  
**Assessment For - I Term Assessment - B**  
**Class - III<sup>rd</sup>**  
**Subject- Social Studies**

**Q.1**

**1. Write two National festival of India.**

1. ....

2. ....

**2. Write two Harvest festival of India.**

1. ....

2. ....

**3. Write two Religious festival of India.**

1. ....

2. ....

**4. Write two Occupation of India.**

1. ....

2. ....

**5. Write two means of transport**

1. ....

2. ....

**Q.2 Match the following coloums**

Column I

1. Diwali

2. Independence day

3. National festival

Column II

a) 15th August

b) Tamil nadu

c) Festival of lights

4. Onam

d) Republic day

5. Pongal

e) Kerala

**Q.3 Name the following.**

1. Our National Anthem was written by. ....
2. An important occupation in coastal areas .....
3. The fastest means of transport .....
4. Harvest festival of Assam .....
5. The main occupation of the people of villagers .....

**Q.4 Write 'T' for true and 'F' for false statements.**

1. The Quran is the holy book of the muslims ☐
2. Gandhi Jayanti is a harvest festival. ☐
3. India is very rich in minerals ☐
4. Steamers are means of water transport ☐
5. 15th August is the Republic day of India ☐

**Activity**

1. Collect pictures of different festivals belonging to different states and paste it.
2. Collect pictures of different means of transport and paste it.

**RING MIDWAYS SR. SEC. PUBLIC SCHOOL**  
**Main Najafgarh Road, Vipin Garden, New Delhi-110059**  
**Assessment For - II Periodic Assessment - A**  
**Class - III<sup>rd</sup>**  
**Subject- Social Studies**

**Q.1 Correct the given statements :**

1. Communication of messages to an individual is called MASS COMMUNICATION

.....

.....

2 . 5th September is the birthday of PADIT JAWAHARLAL NEHRV which is celebrated as Teacher's day

.....

.....

3 . The village Panchayat is also called PANCHAS

.....

.....

4 . The POSTMAN protects us from the thiefs.

.....

.....

5 . A person above 12 years of age can contest election from panchas.

.....

.....

**Q.2 Define the terms**

1. Communication : .....

2. Vaccination : .....

3. Municipal : .....

4. Satellite : .....
5. Citizen : .....

**Q.3 Write 'T' For true and 'F' for false**

- |   |                          |
|---|--------------------------|
| 1. Radio is a cheap means of communication            | <input type="checkbox"/> |
| 2. The teacher brings our letters                     | <input type="checkbox"/> |
| 3. The head of municipal corporation is called mayor. | <input type="checkbox"/> |
| 4. Television is a means mass communication           | <input type="checkbox"/> |
| 5. Veterinary doctors treat the sick animals.         | <input type="checkbox"/> |

**Q.4 Match the following :-**

**Column I**

1. Postman
2. Doctor
3. Teacher
4. Traffic Police
5. Veterinary Doctor

**Column II**

- i) Treatment of animals
- ii) Movement of traffic
- iii) Hospital
- iv) Post office
- v) School

**Q.5 Activity :-**

1. Go to post office and collect postcard, inland letter and envelope and paste them

**RING MIDWAYS SR. SEC. PUBLIC SCHOOL**  
**Main Najafgarh Road, Vipin Garden, New Delhi-110059**  
**Assessment For - II Periodic Assessment - B**  
**Class - III<sup>rd</sup>**  
**Subject- Social Studies**

**Q.1**

**1. Write two neighbouring states of Delhi.**

1. ....

2. ....

**2. Write two neighbouring states of Kolkata.**

1. ....

2. ....

**3. Write two monuments of Delhi.**

1. ....

2. ....

**4. Write two monuments of kolkata**

1. ....

2. ....

**5. Write two sweets of Kolkata**

1. ....

2. ....

**Q.2 Write one sentence for the following**

1. Soldiers : .....

2. Harbour : .....

3. Metro : .....

4. Storey : .....

5. Tower : .....

**Q.3 Tick (✓) the right words :**

1. The Mughal Garden is in Rashtrapati Bhavan/Parliament.
2. Kolkata is situated on the bank of the river Hooghly / Yamuna
3. The Red Fort is built of red stone/red marble
4. Delhi/Kolkata, a port city, is the capital of West Bengal.
5. The Parliament is a circular/square building.

**Q.4 Match the following :-**

**Column I**

1. The Raj Ghat
2. Connaught Place
3. Rashtrapati Bhawan
4. India Gate
5. The Red Fort

**Column II**

- i) A big market
- ii) Amar Jawan Jyoti
- iii) Shahjahan
- iv) Mahatma Gandhi
- v) Mughal Garden

**Q.5 Activity :-**

1. Collect pictures of various historical buildings of Delhi and paste them
2. Collect pictures of various historical buildings of Kolkata and paste them

**RING MIDWAYS SR. SEC. PUBLIC SCHOOL**  
**Main Najafgarh Road, Vipin Garden, New Delhi-110059**  
**Assessment For Annual Exam - A**  
**Class - III<sup>rd</sup>**  
**Subject- Social Studies**

**Q.1 Answer the following questions.**

1. What is the popular classical dance of chennai?

.....

2. Where are railway coaches manufacturer in chennai.

.....

3. How is the climate of Mumbai?

.....

4. Name two south Indian dishes?

.....

5. Write two places of tourist attraction in chennai?

.....

**Q.3 Match the following columns**

Column I

1. Marine Drive

2. Gateway of India

3. Elephanta caves

4. Juhu

5. Essel world

Column II

a) Amusement park

b) Rock cut temples

c) Beach

d) Mumbai

e) Queen's Necklace

**Q.3 Name them :-**

1. Area of sand or pebbles on a shore

.....

2. A Town or a place possessing harbour

.....

3. Statues carved out of stone-walls .....
4. Carved out or cut from a large block of stone .....
5. Underground oil from which petrol and other such things are taken out .....

**Q.4 Fill in the blanks :-**

1. ....is famous for crude oil.
2. Mumbai is the capital of..... .
3. Chennai is the .....largest city of India.
4. ....is the international airport chennai.
5. The climate of Mumbai is ..... .

**Q.5 Activity :-**

1. Collect pictures of some of the important places of tourist attraction in Mumbai and paste them.
2. Collect pictures of some of the important places of tourist attraction in Chnnai and paste them.



**RING MIDWAYS SR. SEC. PUBLIC SCHOOL**  
**Main Najafgarh Road, Vipin Garden, New Delhi-110059**  
**Assessment For Annual Exam - B**  
**Class - III<sup>rd</sup>**  
**Subject- Social Studies**

**Q.1 Fill in the blanks :-**

1. The early man settle near..... .
2. ....without wheels is called sledge.
3. The tools of the early man were made of..... .
4. The early man used to live in ..... .
5. We can not imagine a world without..... .

**Q.2 Name :-**

**1. Two things that man used for transport in water.**

1. ....
2. ....

**2. Two earliest vehicles used by the early man on land.**

1. ....
2. ....

**3. Three tools used by the early man.**

1. ....
2. ....
3. ....

**4. Three animals tamed by the early man.**

1. ....
2. ....
3. ....

### Q.3 Tick (✓) mark the correct words:-

1. The first animal that the early man tamed was

- a. Horse ☐                      b. Dog ☐                      c. Cow ☐

2. The early man learnt to make fire by rubbing

- a. Stoves ☐                      b. Leaves ☐                      c. Metals ☐

3. The early man settled near.

- a. Rivers ☐                      b. Seas ☐                      c. Mountains ☐

4. He used .....for making pottery.

- a. Reft ☐                      b. Sledge ☐                      c. Wheels ☐

### Q.4 Write five lines on the life of the early man

1. ....
2. ....
3. ....
4. ....
5. ....

### Q.5 Activity

1. Collect pictures of some of the tools used by the early man and paste them
2. Draw the pictures of wheel invented by the early man.

**RING MIDWAYS SR. SEC. PUBLIC SCHOOL**  
**Main Najafgarh Road, Vipin Garden, New Delhi-110059**  
**Assessment For - I Periodic Assessment - A**  
**Class - III<sup>rd</sup>**  
**Subject- G. K**

**Q.1 Name them :-**

1. The first Indian woman to have received the noble prize. ....
2. The first Indian woman President of India.....
3. The first Indian woman Prime minister of India.....
4. The first Indian woman IPS officer.....
5. The first Indian woman to travel to space.....
6. The first Indian woman to achieve second rank in bad minton.....
7. Only Indian woman champion in boxing.....
8. The first Indian woman Governor of India.....

**Q.2 Write the name of seven fruits -**

.....

.....

**Q.3 Answer the following questions :-**

1. Who is our prime minister?
2. Who is our President?
3. Who is the captain of Indian cricket Team
4. What is our national flower?
5. What is our national animal?

**Activity :-**

Collect the pictures of festival and them in your scrapbook

**RING MIDWAYS SR. SEC. PUBLIC SCHOOL**  
**Main Najafgarh Road, Vipin Garden, New Delhi-110059**  
**Assessment For - I Periodic Assessment - B**  
**Class - III<sup>rd</sup>**  
**Subject- G. K**

**Q.1 Match the goods to the places where they are manufactures.**

<b>Good</b>	<b>Places</b>
Bangles	Jalandhar
Hosiery	Chittranjan
Sports goods	Dhariwal
Shoes	Kanchipuram
Ships	Batanagar
Railway Engines	Bengaluru
Locks	Aligarh
Wollens	Vishokhatatnam
Aeroplanes	Firozabad
Silk sarees	Ludhiana

**Q.2 Write the name of five vegetable name-**

.....

**Q.3 Write the name of five festival name-**

.....

**Activity :-**

**Collect the pictures famous sports and paste in your scrapbook**

**RING MIDWAYS SR. SEC. PUBLIC SCHOOL**  
**Main Najafgarh Road, Vipin Garden, New Delhi-110059**  
**Assessment For - I Term Assessment - A**  
**Class - III<sup>rd</sup>**  
**Subject- G. K**

**Q.1 Name the following superlatives of India \_**

1. The biggest state in population. ....
2. The largest glacier. ....
3. The biggest desert. ....
4. The highest stone tower. ....
5. The biggest Gurudwara. ....
6. The longest beach. ....
7. The largest delta. ....
8. The highest mountain peak. ....
9. The biggest mosque. ....
10. The highest ward. ....
11. The biggest state in area. ....
12. The highest dam. ....
13. The smallest state in Area ....
14. The largest lake. ....
15. The holy river in India. ....

**Q.2 Write the name of five domestic animals name.**

1. ....

2. ....

3. ....

4. ....

5. ....

**Activity :-**

Collect the leaves in your garden and paste them in your scrapbook

**RING MIDWAYS SR. SEC. PUBLIC SCHOOL**  
**Main Najafgarh Road, Vipin Garden, New Delhi-110059**  
**Assessment For - I Term Assessment - B**  
**Class - III<sup>rd</sup>**  
**Subject- G. K**

**Q.1 Write the name of the second companions -**

1. Akbar and .....
2. The owl and .....
3. Hare and .....
4. Snow white and .....
5. Alibaba and .....
6. Savitri and .....
7. Robinbood and .....
8. Email and .....
9. Damon and .....
10. The pandavas and .....
11. Tweedledum and .....
12. Romulus and .....
13. Androcles and .....
14. Nala and .....
15. David and .....

**Q.2 Write the name of five birds.**

1. ....

2. ....

3. ....

4. ....

5. ....

**Activity :-**

Make a list of Indian states and their capitals



**RING MIDWAYS SR. SEC. PUBLIC SCHOOL**  
**Main Najafgarh Road, Vipin Garden, New Delhi-110059**  
**Assessment For - II Periodic Assessment - A**  
**Class - III<sup>rd</sup>**  
**Subject- G. K**

**Q.1 Name the home of these people**

1. An Eskimo lives in a .....
2. A monk lives in a .....
3. A Chinese lives in a .....
4. A Patient lives in a .....
5. A Red Indian lives in a .....
6. A Prisoner lives in a .....
7. A Traveller lives in a .....
8. A nun lives in a .....

**Q.2 Tick the correct instruments which these musicians**

1. Ustad Amjad Ali Khan

- a) Flute ☐                      b) Sarod ☐

2. Hari prosad chaurasia

- a) Flute ☐                      b) Tabla ☐

3. Bismillah khan

- a) Flute ☐                      b) Sarod ☐

4. Pandit Ravi Shanker

- a) Flute ☐                      b) Violin ☐

5. Ustad Zakir Hussain

- a) Tabla ☐                      b) Sarod ☐

**Q.2 Write the name of seven Wild animals -**

1. ....

2. ....

3. ....

4. ....

5. ....

6. ....

7. ....

**Activity :-**

**Collect the different type of fibre and paste in your scrapbook book.**

**RING MIDWAYS SR. SEC. PUBLIC SCHOOL**  
**Main Najafgarh Road, Vipin Garden, New Delhi-110059**  
**Assessment For - II Periodic Assessment - B**  
**Class - III<sup>rd</sup>**  
**Subject- G. K**

**Q.1 Complete each of the following sentence-**

- a) A frock is to a girl as .....is to a boy.
- b) As Grass is to green so stone is to.....
- c) Cricket is to bat as tennis is to .....
- d) Teacher is to school, as doctor is to.....
- e) Neugh is to horse as.....is to ass.....
- f) Red fort is to Delhi, Taj Mahal is to..... .
- g) As airplane is to wright brothers, so telephone is to .....
- h) As bee is to busy, so wolf is to.....

**Q.2 Write the name of five water animals-**

.....

**Q.3 Write the name of seven neighboring countries-**

.....

.....

**Activity :-**

**Collect the pictures of transport and paste in your scrapbook.**

**RING MIDWAYS SR. SEC. PUBLIC SCHOOL**  
**Main Najafgarh Road, Vipin Garden, New Delhi-110059**  
**Assessment For - II Term Assessment - A**  
**Class - III<sup>rd</sup>**  
**Subject- G. K**

**Q.1 Write the number of player in each team of the following sports :-**

- |               |       |
|---------------|-------|
| 1. Netball    | ..... |
| 2. Wrestling  | ..... |
| 3. Volleyball | ..... |
| 4. Hockey     | ..... |
| 5. Baseball   | ..... |
| 6. Tennis     | ..... |
| 7. Chess      | ..... |
| 8. Basketball | ..... |
| 9. Tannis     | ..... |
| 10. Boxing    | ..... |
| 11. Cricket   | ..... |
| 12. Badminton | ..... |
| 13. Polo      | ..... |
| 14. Football  | ..... |
| 15. Table     | ..... |

**Q.2 Write the name of five land transport.**

1. ....

2. ....

3. ....

4. ....

5. ....

**Activity :-**

Collect the pictures of flowers and parts them in your scrapbook

**RING MIDWAYS SR. SEC. PUBLIC SCHOOL**  
**Main Najafgarh Road, Vipin Garden, New Delhi-110059**  
**Assessment For - II Term Assessment - A**

**Class - III<sup>rd</sup>**

**Subject- G. K**

**Q.1 Match the following inventors with their inventions-**

1. Telegraph	J.L. Baird
2. Aeroplane	Charles Babbage
3. Radio	Alexander Graham Bell
4. Computer	Thomas Alva Edison
5. Electric Bule	Samuel Marse
6. Motor car	Karl Benz
7. Television	Guglielmo Marconi
8. Telephone	Wright Brothers.

**Q.2 Unjumble the following letters to from the name of planets :-**

- |            |       |
|------------|-------|
| 1. TEJPIUR | ..... |
| 2. UNARUS  | ..... |
| 3. EUNNPTE | ..... |
| 4. ATHER   | ..... |
| 5. RAMS    | ..... |
| 6. ERRMCUY | ..... |

**Q.3 Write the name :-**

1. It is like a T.V. Screen. It shows the work you have done on it. ....
2. It is like a typewriter. It has more than hundred keys.....
3. It is kept on a rubber pad. It has two buttons.....
4. It is the brain of the computer. ....

5. It enables us to listen to music.....

6. You can play CDS of music , song and other information on it. ....

**Activity :-**

**Collect the picture of parts of body and paste in your scrap book.**

**RING MIDWAYS SR. SEC. PUBLIC SCHOOL**  
**Main Najafgarh Road, Vipin Garden, New Delhi-110059**  
**Assessment For - I Periodic Assessment - A**  
**Class - III<sup>rd</sup>**  
**Subject- Drawing**

**Q. 1 Answer the following question**

1. What is art?
2. Write three Primary colours?
3. What is the colour of sky?
4. Green colour is symbol of.....in our national flag.
5. Write the colour

Red + White            =        .....

Red + Black            =        .....

Yellow + Green        =        .....

**Activity :-**

1. Paste the different colour of leaves in A3 size white colour sheet.
2. Draw the safty doll (girl) and colour it.

**Materials required:-**

- a) A3 size ivory sheet
- b) Pencil eraser
- c) Colours
- d) Leaves



**RING MIDWAYS SR. SEC. PUBLIC SCHOOL**  
**Main Najafgarh Road, Vipin Garden, New Delhi-110059**  
**Assessment For - I Periodic Assessment - B**  
**Class - III<sup>rd</sup>**  
**Subject- Drawing**

**Q.1 Answer the following question**

- 1. Write three Primary colour**
- 2. White colour is symbol of .....in our national flag**
- 3. What is the colour of tree?**
- 4. What is art?**

**Q.2 Write the colour**

**Red+White = .....**

**Red+Black = .....**

**Yellow + Green = .....**

**Q.3 Activity :-**

- 1. Make a fish using the ice cream sticks**
- 2. Paste the different colour of leaver in A3 size while colour sheet**

**Materials required:-**

- a) A3 size ivory sheet
- b) Pencil eraser
- c) Colour
- d) Leaver
- e) Ice cream sticks
- f) Fevicol
- g) One Google eye

**RING MIDWAYS SR. SEC. PUBLIC SCHOOL**  
**Main Najafgarh Road, Vipin Garden, New Delhi-110059**  
**Assessment For - I Term Assessment - A**  
**Class - III<sup>rd</sup>**  
**Subject- Drawing**

**Answer the following question**

- 1. Write 4 oil colours?**
- 2. Name any 4 typer of colour which we used in drawing?**
- 3. Draw the symbol of road sign and colour it (any 3 symbol)**
- 4. Draw the symbol of danger and colour it.**

**Activity :-**

1. Make a vase and paste buttons to make the flowers look more beautiful.
2. Make a tree and paste the glaze paper on it.

**Materials required:-**

- a) Button
- b) Pencil, eraser
- c) Fevicol
- d) Glaze paper
- e) Colours.

**RING MIDWAYS SR. SEC. PUBLIC SCHOOL**  
**Main Najafgarh Road, Vipin Garden, New Delhi-110059**  
**Assessment For - I Term Assessment - A**  
**Class - III<sup>rd</sup>**  
**Subject- Drawing**

**Q.1** What is your favourite colour name them.

**Q.2** Write 4 cool colour

**Q.3** Write 4 warm colour

**Q.4** Write the colour name

a) Turnip .....

b) Potato .....

c) Tomato .....

d) Carrot .....

e) Lady finger .....

**Activity :-**

1. Make a box using the origami paper.

2. Draw a pot and complete the picture using leaf impression.

**Materials required:-**

a) Origami paper

b) Pencil eraser

c) colour.

d) Leaf

e) Faviol

**RING MIDWAYS SR. SEC. PUBLIC SCHOOL**  
**Main Najafgarh Road, Vipin Garden, New Delhi-110059**  
**Assessment For - II Periodic Assessment - A**  
**Class - III<sup>rd</sup>**  
**Subject- Drawing**

**Q.1 Write the name of colour.**

Red + Yellow = .....

Blue + Yellow = .....

Red + Orange = .....

Black + White = .....

**Q.2 What is the colour of sky?**

**Q.3 What is the colour of soil?**

**Activity :-**

1. Make a Bug headband.
2. Make a diwali greeting card.

**Material Required-**

- a) Tape measure
- b) Scissors
- c) 2 Pipe cleaners or thin wire
- d) Pastel sheet
- e) Glue
- f) Marker
- g) Thermocol balls
- h) Sheet
- i) Colour
- j) Pencil eraser.

# **RING MIDWAYS SR. SEC. PUBLIC SCHOOL**

**Main Najafgarh Road, Vipin Garden, New Delhi-110059**

**Assessment For - II Periodic Assessment - B**

**Class - III<sup>rd</sup>**

**Subject- Drawing**

**Q.1 Draw the symbol of Right and wrong and colour it**

**Q.2 Draw the symbol of ambulance and colour it?**

**Q.3 Write the name of colours traffic light.**

**Q.4 Write 4 types of sheet we used in drawing name them and paste their sample also**

**Activity :-**

1. Draw a family tree and paste their family member pictures.
2. Draw the Giraffe paste small rubber band, bindis and pencil peels on the space

**Material Required-**

- a) Family member's photo
- b) Colou
- c) Pencil erasor
- d) Rubber, bindis, Pencil peels

**RING MIDWAYS SR. SEC. PUBLIC SCHOOL**  
**Main Najafgarh Road, Vipin Garden, New Delhi-110059**  
**Assessment For - II Periodic Assessment - A**  
**Class - III<sup>rd</sup>**  
**Subject- Drawing**

**Q.1 Which colour we used in Grapes?**

**Q.2 Which colour we used in mango?**

**Q.3 Which colours we used in banana?**

**Q.4 Write the colours of sun when sun rise and sunset?**

**Q.5 Draw your favaurite dress and colour them.**

**Activity :-**

**Q.1 Make a samuras Hat used origami paper**

**Q.2 Make a fish using with thumb impression**

**Material Required-**

- a) Poster colour
- b) Black pen/ Marker
- c) Paint Brush
- d) Sheet
- e) Origami Sheet

**RING MIDWAYS SR. SEC. PUBLIC SCHOOL**  
**Main Najafgarh Road, Vipin Garden, New Delhi-110059**  
**Assessment For - II Term Assessment - B**  
**Class - III<sup>rd</sup>**  
**Subject- Drawing**

**Q.1** What is the colour of lotus an sunflower?

**Q.2** Write the different colors of Gulal you used in previous holi?

**Q.30** Write the different colour of soil.?

**Activity :-**

1. Draw Hut and paste dal and rajma.
2. Draw the sheep and paste cotton.
3. Draw the balloons and givien the onion impression.

**Material Required -**

- a) Favicol
- b) Dal and Rajma
- c) Cotton
- d) Onion
- e) Water colour
- f) Pencil eraser.

**RING MIDWAYS SR. SEC. PUBLIC SCHOOL**  
**Main Najafgarh Road, Vipin Garden, New Delhi-110059**

**Formative Assessment -I**

**Class - III<sup>rd</sup>**

**Subject- Computer**

**Answer the following questions**

1. What is a graphics?
2. What is a program?
3. Write the difference between Ram and Rom?
4. What is a Software?

**Activity :-**

- (1) Paste the pictures of hardware and software on the chart paper.
- (2) Paste the pictures of social sites indicate the risk sites and indicate the risky sites.



**RING MIDWAYS SR. SEC. PUBLIC SCHOOL**  
**Main Najafgarh Road, Vipin Garden, New Delhi-110059**

**Formative Assessment -II**

**Class - III<sup>rd</sup>**

**Subject- Computer**

**Answer the following questions.**

1. What is the use of colour printer?
2. Write name of any three multimedia software?
3. What is circuit?
4. What is the use of pen-tablet?

**Activity :-**

- (1) List the name of devices used in setup of smart class.
- (2) Make the multimedia keyboard and name of each key function on the chart paper

**RING MIDWAYS SR. SEC. PUBLIC SCHOOL**  
**Main Najafgarh Road, Vipin Garden, New Delhi-110059**

**Formative Assessment -III**

**Class - III<sup>rd</sup>**

**Subject- Computer**

**Answer the following questions.**

1. How to opening paint in windows 7 write the steps in scrap book?
2. What is cropping?
3. What are the two ways in which you can flip a drawing?
4. Explain the Resize feature in paint?

**Activity :-**

- (1) Draw the pictures of a monkey and two trees in lab.
- (2) Skew the tree
- (3) Resize the tree to make it larger.

**RING MIDWAYS SR. SEC. PUBLIC SCHOOL**  
**Main Najafgarh Road, Vipin Garden, New Delhi-110059**  
**Formative Assessment -IV**  
**Class - III<sup>rd</sup>**  
**Subject- Computer**

**Answer the following questions.**

1. What is Logo?
2. What is turtle? Describe it.
3. Name the command used in Logo?
4. Write the parts of windows logo screen?

**Activity :-**

- (1) Make the window logo screen and label its each part on the chart paper.
- (2) Make the rectangle with length 60 and breath 20 in logo lab.

**RING MIDWAYS SR. SEC. PUBLIC SCHOOL**  
**Main Najafgarh Road, Vipin Garden, New Delhi-110059**  
**Formative Assessment -V**  
**Class - III<sup>rd</sup>**  
**Subject- Computer**

**Answer the following questions**

1. What is MS-Word?
2. What are the main components of MS-Word Window?
3. What are Ribbon in MS-Word?
4. Write the detail about “Quick Access Toolbar”?

**Activity :-**

- (1) How to create a new document and How to save it write the steps to done it.
- (2) Print your document write the steps to done it.

**RING MIDWAYS SR. SEC. PUBLIC SCHOOL**  
**Main Najafgarh Road, Vipin Garden, New Delhi-110059**

**Formative Assessment -VI**

**Class - III<sup>rd</sup>**

**Subject- Computer**

**Answer the following questions**

1. What do you mean by wordped?
2. What is calculates? Writ the use of it in computer?
3. What is in the Accessories folder?
4. How can we hear sound recorded with sound recorder?

**Activity :-**

1. Make the windows desktop on chart paper and label each part.
2. Make a document in notepad in lab.

**RING MIDWAYS SR. SEC. PUBLIC SCHOOL**  
**Main Najafgarh Road, Vipin Garden, New Delhi-110059**  
**Formative Assessment -VII**  
**Class - III<sup>rd</sup>**  
**Subject- Computer**

**Answer the following questions**

1. What is the difference between notepad and word pad?
2. Why do we need internet?
3. What is internet?
4. CIST the uses of Internet?

**Activity :-**

1. Paste the picture of web browser?
2. Write the name of things that require does an Internet connection?

**RING MIDWAYS SR. SEC. PUBLIC SCHOOL**  
**Main Najafgarh Road, Vipin Garden, New Delhi-110059**  
**Formative Assessment -VIII**  
**Class - III<sup>rd</sup>**  
**Subject- Computer**

**Answer the following questions.**

1. Write the full form of www?
2. What is web address?
3. What is search engine?
4. How to login to Internet write the steps to it?

**Activity :-**

- (1) Make the diagram to connect an internet?
- (2) How to start paint write the steps in scrap book.