

RING MIDWAYS SR. SEC. PUBLIC SCHOOL

Main Najafgarh Road, Vipin Garden, New Delhi-110059

Assessment For - I Perodic Assessment - I (A)

Class - IIth

Subject-Hindi

प्रश्न -1 संयुक्त व्यंजन से शब्द बनाओं


- | | |
|----------------|----------------|
| 1. क्ष - | 3. त्र - |
| 2. झ - | 4. श्र - |

प्रश्न-2 नीचे लिखें वर्णों से शुरू होने वाले दो-दो शब्द लिखो





- | | | |
|-------|-------|-------|
| (क) औ | | |
| (ख) आ | | |
| (ग) न | | |

प्रश्न-3 सही उत्तर पर (✓) चिह्न लगाइए:-

1. हिमालय पर्वत किस दिशा में खड़ा है ?

- | | | | |
|---------------|---|----------------|---|
| (क) उत्तर में |  | (ख) दक्षिण में |  |
| (ग) पूर्व में |  | (घ) पश्चिम में |  |

2. कोयल कहाँ बैठी है ?

- | | | | |
|--------------------|---|--------------------|--|
| (क) पीपल की डाल पर |  | (ख) नीम की डाल पर |  |
| (ग) आम की डाल पर |  | (घ) बरगद की डाल पर |  |

प्रश्न-4 देशों के नाम

- | | |
|---------|---------|
| 1. | 2. |
|---------|---------|



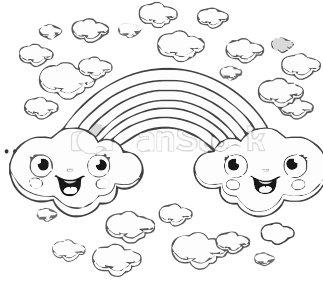
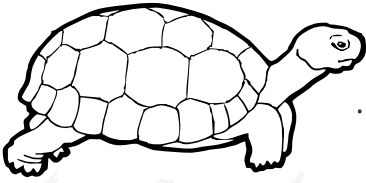
प्रश्न-5 व्यक्तियों के नाम

- | | |
|---------|---------|
| 2. | 2. |
|---------|---------|

प्रश्न-6 पक्षियों के नाम

- | | |
|---------|---------|
| 1. | 2. |
|---------|---------|

प्रश्न -7 चित्र देखकर नाम लिखो



क्रियाकलाप :-

प्रश्न -1 अपनी हिन्दी की कॉपी पर अपना परिचय लिखे व अपनी एक फोटो भी चिपकाएँ।

प्रश्न -2 एक पेड़ का चित्र बनाइए कॉपी में व पेड़ के अंगों के नाम लिखिए।

RING MIDWAYS SR. SEC. PUBLIC SCHOOL
Main Najafgarh Road, Vipin Garden, New Delhi-110059
Assessment For - I Perodic Assessment - II (B)

Class - IIth
Subject-Hindi

प्रश्न -1 संयुक्त व्यंजन से शब्द बनाओं

- | | |
|----------------|----------------|
| 1. क्ष - | 3. त्र - |
| 2. झ - | 4. श्र - |

प्रश्न -2 शब्दों को शुद्ध करके लिखो:-

- | | | |
|------------|---|-------|
| 1) दिपक | ⇒ | |
| 2) परिक्षा | ⇒ | |
| 3) निम | ⇒ | |
| 4) गाइका | ⇒ | |

प्रश्न -3 सोचकर लिखिए:-

- | | | |
|--------------------------|-------|-------|
| 1) दो फलों के नाम | | |
| 2) दो पालतू पशुओं के नाम | | |
| 3) दो लड़कों के नाम | | |
| 4) दो सब्जियों के नाम | | |

प्रश्न -4 बहुवचन रूप लिखिए:-

- | | | |
|-----------|---|-------|
| 1) पुस्तक | ⇒ | |
| 2) रुपया | ⇒ | |
| 3) साथी | ⇒ | |
| 4) बेटा | ⇒ | |

प्रश्न -5 वाक्य बनाइए :-

- 1) फूल ⇒
.....
- 2) पेड़ ⇒
.....
- 3) बादल ⇒
.....
- 4) झरना ⇒
.....

क्रियाकलाप

प्रश्न-1 एक पेड़ का चित्र बनाइए कॉपी में व पेड़ के अंगों के नाम लिखिए।

प्रश्न-2 एक सुंदर चार्ट दिनों के नाम बनाओं।

RING MIDWAYS SR. SEC. PUBLIC SCHOOL
Main Najafgarh Road, Vipin Garden, New Delhi-110059
Assessment For - I Term Assessment - III (A)

Class - IIth
Subject-Hindi

प्रश्न -1 सही पर्यायवाची शब्द पर गोला ○ लगाइए।

- | | | | |
|----------|---|--------|-----|
| (क) पानी | - | जल | सुर |
| (ख) सूरज | - | स्त्री | रवि |

प्रश्न -2 दिए गए अंको को शब्दों में लिखिए।

- | | |
|----------------|----------------|
| (क) 12 - | (ग) 38 - |
| (ख) 20 - | (घ) 42 - |

प्रश्न-3 बोली बताइए:-

1. कुत्ता.....है।
2. चिड़िया.....है।
3. शेर.....है।
4. बिल्ली.....है।

प्रश्न-4 बताइए क्या आप:-

- | | हाँ | नहीं |
|-------------------------|--------------------------|--------------------------|
| 1. स्वंय नहाते हो ? | <input type="checkbox"/> | <input type="checkbox"/> |
| 2. स्वंय स्कूल आते हो ? | <input type="checkbox"/> | <input type="checkbox"/> |
| 3. स्वंय दूध पीते हो ? | <input type="checkbox"/> | <input type="checkbox"/> |

प्रश्न-5 विशेषण शब्द पर गोला ○ लगाओं

1. चिकने पत्ते
2. कच्चा आम
3. मीठा आम
4. कच्चा रास्ता

प्रश्न-6 मिलान करो:-

- | | |
|----------|----------|
| 1. घड़ी | टोपियों |
| 2. टोपी | कुरसियाँ |
| 3. कुरसी | घाड़ियाँ |
| 4. आलू | गाएँ |
| 5. गाय | आलुओं |

प्रश्न-7 लिंग बदलकर वाक्या पुनः लिखें:-

1. मोर नाच रहा है।

उ०

2. हाथी गन्ना खाता है।

उ०

क्रियाकलाप

प्रश्न-1 बाजार से रेशमी धागे, मोती, सितारे आदि लाकर एक सुंदर सी राखी बनाइए।

RING MIDWAYS SR. SEC. PUBLIC SCHOOL
Main Najafgarh Road, Vipin Garden, New Delhi-110059
Assessment For - I Term Assessment - IV (B)

Class - IIth
Subject-Hindi

प्रश्न -1 कौन-सी ऋतु कब आती है ?

- (1) मई-जून में
- (2) दिसंबर-जनवरी में
- (3) मार्च-अप्रैल में

प्रश्न -2 वाक्यांशों के लिए एक शब्द ढूँढिए और उस पर गोला लगाइए।

- (1) जिसका आकार हो ।
- (2) जिसका आकार न हो ।
- (3) जो किसी से न डरे ।
- (4) जो नभ में रहता हो ।
- (5) जिसका आधार न हो ।

	नि	रा	धा	र
ड	रा	ल	सा	
र	त	का	का	
	न	भ	च	र

प्रश्न -3 अनुस्वार (.) या अनुनासिक (॰) लगाकर शब्दों को पूरा कीजिए।

- (1) दग -
- (2) रग -
- (3) चाद -
- (4) हस -
- (5) आख -

प्रश्न -4 किन्हीं चार पेड़ों के नाम लिखिए।

- (1)
- (2)
- (3)
- (4)

प्रश्न -5 सप्ताह के दिनों के नाम लिखो।

(1)

(2)

(3)

(4)

(5)

(6)

(7)

प्रश्न -6 विशेषता बताने वाले शब्द :-

1) कैसा गुलाब ? ⇒

2) कैसी आइसक्रीम ⇒

3) कैसा कुत्ता ⇒

क्रियाकलाप

प्रश्न-1 एक चार्ट पेपर पर राष्ट्रीय ध्वज चित्र बनाकर रंग भरिए तथा राष्ट्रगान की प्रथम दो पक्तियाँ लिखिए:-

RING MIDWAYS SR. SEC. PUBLIC SCHOOL
Main Najafgarh Road, Vipin Garden, New Delhi-110059
Assessment For - II Perodic Assessment - V (A)
Class - IIth
Subject-Hindi

प्रश्न -1 वाक्य बनाइए।

- (1) दीपक
- (2) रोशनी

प्रश्न -2 लिंग बदलिए

- (1) मोर -
- (2) पुरुष -
- (3) हाथी -
- (4) बेटा -

प्रश्न -3 सही मिलान करो-

- | | |
|---------|------------------|
| (1) मैं | सो रहे थे |
| (2) तुम | कब आए ? |
| (3) वह | पुस्तक पढता हूँ। |
| (4) हम | मुंबई जाएँगे। |
| (5) वे | खाना खा रहा है। |

प्रश्न -4 विलोम शब्द लिखो

1. अच्छा -
2. न्याय -
3. नया -
4. अपना -

प्रश्न -5 नीचे लिखी बातों का शुद्ध भाषा में लिखिए

1. कठिन है मेरी सेवा

उ०

2. बात मान ली कबूतर ने

उ०

प्रश्न -6 वचन बदलिए:-

1. पक्षी

2. पिंजरा

क्रियाकलाप

प्रश्न -1 एक फूल का पौध लगाओं और स्कूल में लगकर दिखाओं।

RING MIDWAYS SR. SEC. PUBLIC SCHOOL
Main Najafgarh Road, Vipin Garden, New Delhi-110059
Assessment For - II Perodic Assessment - VI (B)
Class - IIth
Subject-Hindi

प्रश्न -1 नीचे दिया गया पहलवान शब्द पाँच वर्णों से मिलकर बना है इन वर्णों से कोई पाँच शब्द बनाइए।

प ह ल वा न

- (1)
- (2)
- (3)
- (4)
- (5)

प्रश्न -2 नीचे दिए गए शब्दों के पर्यायवाची लिखिए।

- 1) बादल ⇨
- 2) फूल ⇨
- 3) पवन ⇨
- 4) धरती ⇨

प्रश्न -3 निम्न लिखित शब्दों में 'ई' (ी) की मात्रा लगाकर लिखिए।

- 1) गरम ⇨
- 2) बिजल ⇨
- 3) धरत ⇨
- 4) कल ⇨

प्रश्न -4 किन्ही पाँच पक्षियों के नाम लिखिए।

- (1)
- (2)

(3)

(4)

(5)

प्रश्न -5 भारत में बोली जाने वाली किन्हीं चार भाषाओं के नाम लिखिए।

(1)

(2)

(3)

(4)

(5)

प्रश्न-6 शब्दों का सही मिलान करें:-

(1) मीठी

चटनी

(2) गरम

आइस्क्रीम

(3) ठंडी

खीर

(4) तीखी

चाय

प्रश्न-7 चित्र देखकर संज्ञा शब्द लिखो।


.....

.....

.....

.....

.....



क्रियाकलाप

प्रश्न -1 अपनी पूरी दिनचर्या को लिखो ए-4 शीट।

प्रश्न-2 किन्हीं इस चिड़ियों के चित्र अपनी file में चिपकाओं।

RING MIDWAYS SR. SEC. PUBLIC SCHOOL
Main Najafgarh Road, Vipin Garden, New Delhi-110059
Assessment For - II Term Assessment - VII (A)

Class - IIth
Subject-Hindi

प्रश्न -1 कविता की पंक्तियाँ पूरी करिए

(क) छोटी-सी.....

.....मानी जाती ।

सदा समय.....

.....सिखलाती

प्रश्न -2 तुक मिलाते शब्द लिखिए

(1) घड़ी

(2) पड़ी

(3) आस

(4) माला

प्रश्न -3 खाली स्थान भरें:-

(क) चाँद की कहानी की बात सुनकर बच्चे.....हो गए । (खुश/दुखी)

(ख)सूर्य और चंद्रमा से भी बड़े हैं । (तारे/ग्रह)

(ग) दूर की वस्तु.....दिखाई देती है । (बड़ी/ छोटी)

(घ) चाँद पर दिन में बहुत.....होती है । (गर्मी/सर्दी)

प्रश्न-4 पढ़ो और लिखो ।

1) आसमान में क्या-क्या दिखाई देता है ?

उ०

2) हमें प्रकाश कौन देता है ?

उ०

प्रश्न-5 लिंग बदलिए।

1) नाना

2) मामा

3) दादा

4) चाचा

क्रियाकलाप

प्रश्न -1 गत्ते से काटकर या रुई और कपड़े से चिड़िया बनाओं और कक्षा में सजाओं।

प्रश्न-2 लौह पुरुष (सरदार बल्लभ भाई पटेल का चित्र चिपकार इन पर दस लाइन लिखो।


RING MIDWAYS SR. SEC. PUBLIC SCHOOL
Main Najafgarh Road, Vipin Garden, New Delhi-110059
Assessment For - II Term Assessment - VIII (B)

Class - IIth
Subject-Hindi

प्रश्न -1 नए शब्द बनाइए:-

- | | | |
|---------|-------|-------|
| (क) ा | | |
| (ख) ॠ | | |
| (ग) न्य | | |
| (घ) क्ष | | |

प्रश्न-2 गर्मी से बचने कि लिए आप क्या-क्या करते हैं ? उनसे संबंधित चित्रों पर (✓) कर निशान लगाइए।



प्रश्न-3 निम्नलिखित मुहावरों का अर्थ लिखो:-

1. आँखें दिखना -
2. हवा लगना -
3. नानी याद आना -

प्रश्न-4 सर्वनाम शब्द पर गोला लगाओं

1. मैं पुस्तक पढ़ रहा हूँ

2. वह स्कूल गई है।

3. रवि तुम कब आए।

प्रश्न -5 वाक्यांश के लिए एक शब्द लिखो

1. जो काम से जी चुराता हो

2. जो दया करता हो

3. जो सदा सच बोलता हो

4. वर्ष में एक बार होने वाला

प्रश्न-6 पर्यायवाची शब्द लिखो

1. फूल

2. पर्वत

3. चाँद

प्रश्न-7 चित्र देखकर पाँच वाक्य बनाओ।



1.

2.

3.

4.

5.

क्रियाकलाप

प्रश्न -1 बाजार से रेशमी धागे, मोती, सितारे आदि लाकर एक सुंदर सी राखी बनाइए व सबको दिखाइए।

प्रश्न-2 गते को काटकर अपने स्कूल का दृश्य बनाओ।

RING MIDWAYS SR. SEC. PUBLIC SCHOOL
Main Najafgarh Road, Vipin Garden, New Delhi-110059
Assessment For - I Perodic Assessment - I (A)
Class - IInd
Subject- English

Q.1 Find the missing letter and complete the words

1. MO.....HER
2. HO.....SE
3. WA.....ER
4. CLO.....HES

Q.2 Match the following columns

Column A	Column B
1. Milk	(a) Day
2. Food	(b) Care
3. Father and Mother	(c) to drink
4. Night and	(d) to eat

Q.3 Use a or an in the blanks

1. Poor
2. River
3. is on axe
4. Story
5. golden axe

Q.4 The names of two more persons at your home

Father

Q.5 The names of two more places in your school.

Library

Q.6 The names of two more pet animals.

Dog

Q.7 Two more names of the days

Saturday

Q.8 Two more exact names for the festivals.

Eid

Q.9 The names of two more things in your school bag.

Books

Activity :-

1. Make a greeting card of birthday party with decorative items.

RING MIDWAYS SR. SEC. PUBLIC SCHOOL
Main Najafgarh Road, Vipin Garden, New Delhi-110059
Assessment For - I Perodic Assessment - II (B)

Class - IInd

Subject- English

Q.1 Write the opposite words

1. Come
2. Rise
3. Go
4. Close
3. Take

Q.2 Change form one to more than one by adding 'S' or '-es'

1. Seat
2. Friend
3. House
4. Glass
5. Shoe
6. Card

Q.3 Fill in the blanks

(Crying, Drinking, Helping, Praying)

1. He started.....
2. He began.....
3. He heard.....
4. He saw.....

Q.4 Circle the words which you eat :

1. Food eyes hands fruits milk.
2. Water bread chocolate brush comb

Q. 5 Go to your kitchen observe and write two more things that are more than one .

knives

Q. 6 Looks in your cupboard and write two more things that are more than one.

shirts

Activity :

1. Make a model of beautiful dancing peacock at a thermacol sheet

RING MIDWAYS SR. SEC. PUBLIC SCHOOL
Main Najafgarh Road, Vipin Garden, New Delhi-110059
Assessment For - I Term Assessment - III (A)

Class - IInd

Subject- English

Q.1 Put 'a' or 'an' before the word.

1. happy lady.
2.fat boy.
3.orange dress.
4.ugly girl.
5.deep sea.

Q.2 Pick out the verbs in the following sentences.

1. We drink milk.
2. The boys eat food.
3. I gather flowers in the garden.
4. The aeroplane flew over the city.
5. My brother wears clothes.

Q.3 Match the following :-

Column A

Column B

- | | |
|-------------------------|----------------------|
| 1. Children are playing | a) On the table |
| 2. There is a box | b) Are you? |
| 3. The old man is | c) In a park |
| 4. How | d) Crossing the road |

Q. 4 Begin each sentence with a capital letter also, use full stop(.), question mark (?) or an exclamation mark (!) to end sentence.

1. My mother cooks tasty food.

Ans.

2. Oh no we lost the match.

Ans.

3. How old are you.

Ans.

4. Sonal is my best friend.

Ans.

5. I go to school every day.

Ans.

Activity :

1. Make a model of a hut with ice -cream stick and decorative materials.

RING MIDWAYS SR. SEC. PUBLIC SCHOOL
Main Najafgarh Road, Vipin Garden, New Delhi-110059
Assessment For - I Term Assessment - IV (B)

Class - IInd

Subject- English

Q. 1 Show belonging to the naming words by adding's.

1. Raj pen
2. Boy eyes
3. Uncle car
4. Sheena cycle

Q. 2 Complete the following sentences by adding 's to the naming words given in the brackets.

1. The.....knife is very sharp (cook)
2. My.....newspaper is on the table.(father)
3. The.....bag is full of gifts.(santa)
4.room has many windows.(neena)
5. Thedress is very nice. (girl)

Q. 3 Circle a word from the list to form a compound word.

1. Any buddy some body.
2. Rain coat cloth hat.
3. black duster board chalk.
4. bath room groom broom.
5. door ball bell hale.

6. Some ware where were.

Q.4 Unjumble the following words.

1. RKCO

2. ESVA

3. NFU

4. CELOV

Q.5 How many members live in your family ? name them .

1.

2.

3.

4.

5.

Activity :

1. Make a model of bangle box thermocal with decoration.

RING MIDWAYS SR. SEC. PUBLIC SCHOOL
Main Najafgarh Road, Vipin Garden, New Delhi-110059
Assessment For - II Perodic Assessment - V (A)
Class - IInd
Subject- English

Q.1 Circle the describing words.

1. These are juicy mangoes.
2. Give me a hot coffee.
3. This is a havey bag.
4. There are two benches in a park.
5. He is a kind man.

Q.2 Tick (✓) the correct answer.

1. This is (my/its) box of crayons.
2. He is cleaning (her/ his) room.
3. Is this (its/your) bag?
4. Have you read (your/ their) chapter?

Q.3 Underline pronouns. circle the nouns they stand for.

1. Nisha wants her sister to study.
2. Buy the bangles ,they are the best in the shop!
3. Rosy study hard if you want to do well in the exams.
4. Shreya took part in the quiz. She won the first prize.

Q.4 Unjumble the following words.

1. KNATH
.....
2. PRASH
.....
3. TLITLE
.....
4. HUTREN
.....

Q. 5 Drop the last letter form these words and make a new word .

1. Party

2. They

3. Tear

Activity :-

1. Make a beautiful chart of colourful butterflies can full size chart paper.

RING MIDWAYS SR. SEC. PUBLIC SCHOOL
Main Najafgarh Road, Vipin Garden, New Delhi-110059
Assessment For - II Perodic Assessment - VI (B)

Class - IInd

Subject- English

Q.1 Write the rhyming words.

1. Rays
2. Grows
3. Bat
4. Right

Q. 2 Fill in the blanks with suitable noun against each adjective one is done for you.

	Adjective	Noun
1.	Tall
2.	Old
3.	Clever
4.	Many

Q.3 Fill in the blanks with was/were

1. IStudying
2. She.....helping the old man
3. We.....Studying
4. They.....playing with a dog

Q.4 Write five Action words

1.
2.
3.
4.
5.

Q. 5 Fill in the blanks with correct preposition

1. You must not talkthe library (in/ at)
2. Do not throw paper.....the floor (in/ on)
3. Dhrur is not.....home right now (at/in)
4. The ball fell.....the pond (into/ in)

Activity :-

1. Draw the rising 'Sun' on A4 size sheet.

RING MIDWAYS SR. SEC. PUBLIC SCHOOL
Main Najafgarh Road, Vipin Garden, New Delhi-110059
Assessment For - II Term Assessment - VII (A)
Class - IInd
Subject- English

Q.1 Fill in the blanks

	Cardinal adjectives	Ordinal adjectives
1.	Four
2.	Fourteen
3.	Twentieth
4.	Twelfth

Q.2 Tick (✓) the correct answer

1. She is lazy (but/because) her brother is very active.
2. Rajv has car (and/but) a bike.
3. I Saw zebras (because/and) lions in the zoo

Q.3 Write the opposites words.

	Words	Opposites
1.	Rich
2.	Big
3.	Extremely
4.	Poor

Q.4 Write the rhyming word

1. Bunch
2. High
3. String

Q. 5 Colour the turkey by number



1. Light Brown
2. Dark Brown
3. Orange
4. Red
5. Green
6. Purple

Activity:

1. Make a beautiful (Full size chart) garden with chirping bird

RING MIDWAYS SR. SEC. PUBLIC SCHOOL
Main Najafgarh Road, Vipin Garden, New Delhi-110059
Assessment For - II Term Assessment - VIII (B)
Class - IInd
Subject- English

Q. 1 Change the verbs, make a sentence.

1. (like, Practice the piano)

Ans.....

2. (Clove, browse in book shops)

Ans.....

3. (enjoy, email friends)

Ans.....

Q. 2 Fill in the blanks

1. Put theon the top

2. Theis not

3.is hopping in the pat

Q. 3 Circle the noun in each row that is out of place

1. Arm Ear chair leg

2. Cricket sea football hockey

3. Carrot potato onion pansy.

Q. 4 Write the Plurals of the following

1. School

2. Door

Q. 5 Look at the picture below this is your lunch time complete the sentences using acting words wards with-ing form the box



Sitting, eating, ringing, playing

1. The peon isthe bell
2. Some children aretheir lunch
3. Some children are.....with their friends.
4. A boy isunder a tree

Activity :

1. Make a collage of different animals on full size chart paper.

RING MIDWAYS SR. SEC. PUBLIC SCHOOL
Main Najafgarh Road, Vipin Garden, New Delhi-110059
Assessment For - I Perodic Assessment - I (A)

Class - IInd
Subject- Maths



Q.1 Put >, < or = in the box.

- a) 16 21 b) 35 84
c) 64 34 d) 74 47
e) 33 33

Q.2 Solve the following in horizontal form :-

- a) $71 + 8 =$ b) $5 \times 4 =$
c) $3 \times 9 =$ d) $71 - 29 =$

Q.3 Colour and name the shapes:-



Q.4 Write 'O' for odd and 'E' for even number :-

a) 7

d) 25

b) 10

c) 31

e) 11

f) 14

Q.5 Write the numerals for the given number names :-

a) Three hundred twenty nine

b) Two hundred eleven

c) Four hundred forty four

d) Seven hundred thirteen

Q.6 Circle the smallest number :-

a) 23, 46, 97

b) 43, 23, 41

c) 171, 131, 113

Q.7 Ring the greatest number :-

a) 192, 36, 191

b) 186, 196, 176

Activity :-

1. Make a model of Abacus (use thermocal sheet)

RING MIDWAYS SR. SEC. PUBLIC SCHOOL
Main Najafgarh Road, Vipin Garden, New Delhi-110059
Assessment For - I Perodic Assessment - II (B)

Class - IInd
Subject- Maths

Q.1 Add :-

a) $67 + 20 =$

b) $39 + 40 =$ c) $51 + 28 =$

d) $0 + 9 =$

e) $14 + 1 =$ f) $40 + 30 =$

Q.2 Add :-

a) $375 + 13$

	H	T	O
+			
=			

b) $421 + 44$

	H	T	O
+			
=			

Q.3 Add using expanded notation :-

a) $721 + 103 =$

b) $241 + 342 =$

c) $562 + 33 =$

d) $513 + 241 =$

Q.4 Adding 3 digit numbers with carry :-

a) $275 + 348$

	H	T	O
+			
=			

b) $374 + 465$

	H	T	O
+			
=			

Q.5 Word problem :-

1. Misha has 421 animals stickers. Tisha has 157 animal stickers. How many stickers are there in all ?

Sol.

2. There are 315 blue fish and 124 golden fish in the and. How many fish are there in total?

Sol.

Activity :-

1. Draw the calender on a chart paper.

RING MIDWAYS SR. SEC. PUBLIC SCHOOL
Main Najafgarh Road, Vipin Garden, New Delhi-110059
Assessment For - I Term Assessment - III (A)

Class - IInd

Subject- Maths

Q.1 Subtract :-

a) $434 - 2$

	H	T	O
	4	3	4
-			2

b) $329 - 5$

	H	T	O
	3	2	9
-			5

Q.2 Subtract using 2-digit number from 3-digit number with borrowing :-

a) $482 - 64$

	H	T	O
-			

b) $777 - 68$

	H	T	O
-			

Q.3 Match the boxes :-

a) 4×5

27

b) 9×3

12

c) 5×8

20

d) 2×6

35

e) 7×5

40

Q.4 Fill in the boxes :-

a) $10 \times 9 =$

b) $8 \times 8 =$

c) $6 \times 10 =$

d) $4 \times 7 =$

Q.5 Multiply :-

a)

T	O
4	3
	2

b)

T	O
2	4
	2

x

Activity :-

1. Draw the calender on a chart paper.

RING MIDWAYS SR. SEC. PUBLIC SCHOOL
Main Najafgarh Road, Vipin Garden, New Delhi-110059
Assessment For - I Term Assessment - IV (B)

Class - IInd
Subject- Maths

Q.1 Divide :-

a) $7 \div 7$ =

b) $13 \div 1$ =

c) $12 \div 7$ =

d) $14 \div 2$ =

e) $25 \div 5$ =

f) $21 \div 21$ =

Q.2 Divide using long division method :-

a) $\sqrt[8]{24}$

b) $\sqrt[3]{39}$

Q.3 Solve :-

a) $963 \div 3$ =

b) $488 \div 4$ =

c) $225 \div 5$ =

d) $693 \div 3$ =

Q.4 Write the given amount in long from :-

a) ₹ 75.50 \Rightarrow

b) ₹ 80.50 \Rightarrow

c) ₹ 150.50 \Rightarrow

Q.5 Write the given amount in long form :-

a) Two rupees fifty paise =

b) Eighty-nine rupees fifty paise =

c) Five hundred thirteen rupees fifty paise =

Q.6 Adding ₹ and paise :-

a) ₹ 13.50 + ₹ 28.00

b) ₹ 284.00 + ₹ 52.50

	₹			P		
	0	0	0			
+						
=						

	₹			P		
	0	0	0			
+						
=						

Activity :-

1. Make a chart of Even number (from 1 to 100) and colour it :-

RING MIDWAYS SR. SEC. PUBLIC SCHOOL
Main Najafgarh Road, Vipin Garden, New Delhi-110059
Assessment For - II Perodic Assessment - V (A)

Class - IInd
Subject- Maths

Q.1 Count the money :-

a) $\textcircled{₹ 1} + \textcircled{₹ 2} =$

b) $\textcircled{₹ 5} + \textcircled{₹ 5} + \textcircled{₹ 1} + \textcircled{₹ 2} =$

c) $\textcircled{₹ 5} + \textcircled{₹ 2} + \textcircled{₹ 1} + \textcircled{50p} + \textcircled{50 P} =$

Q.2 Subtract

a) ₹ 95.50 - ₹ 68.00

b) ₹ 80.00 + ₹ 48.50

	₹					
	P					
	0	0			0	0
-						
=						

	₹					
	P					
	0	0			0	0
-						
=						

Q.3 Fill in the blanks :-

1. 1 Km =m

2. 1 m =cm

3. 1 kg =g

4. 1 L =ml

Q.4 Tick the correct one:-

a) The length of a chocolate is measured in m L

b) The Weight of a pen is measured by ruler weighing machine

c) Quantity of water in a Jug is measured in m L.

Q.5 Add the given lengths :-

a) 42Cm + 24 cm

	cm	
	0	0
+		
=		

b) 46 cm + 24 cm

	cm	
+		
=		

Activity :-

1. Past currency in colour scrab book

RING MIDWAYS SR. SEC. PUBLIC SCHOOL
Main Najafgarh Road, Vipin Garden, New Delhi-110059
Assessment For - II Perodic Assessment - VI (B)
Class - IInd
Subject- Maths

Q.1 Fill in the blanks

1. 1 kilogram (kg) =grams (g)
2. $\frac{1}{2}$ kg=g
3. $\frac{1}{4}$ kg=g
4. $\frac{1}{10}$ kg=g

Q.2 Complete the sentence :-

Hi! My name is

I am.....cm tall and I weigh.....kg

My mother iscm tall and weight.....kg.

Tallest member of my family..... .

Heaviest member of my family.....

Q.3 Word problems :-

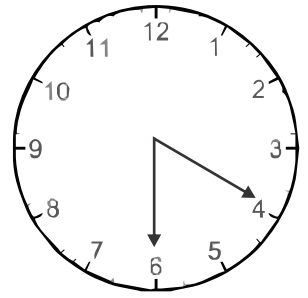
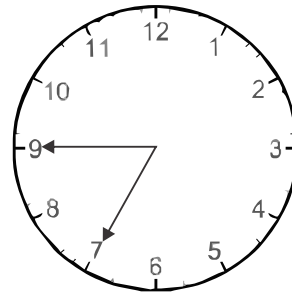
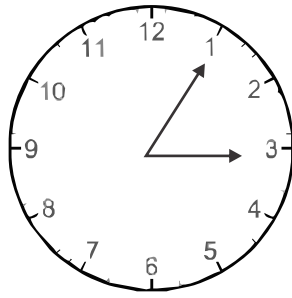
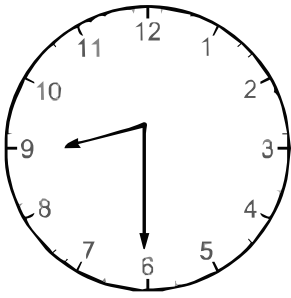
a) A milkman has 345 L of milk. He sold 265 L of milk during the day. How much milk is left with him?

Sol.....

b) Sara bought 1L 340 ml of oil Sunday and 3l 450 ml of oil on Tuesday. How much oil did Sara buy?

Sol.....

Q.4 Write the time shown by the clock as half past, quarter to or quarter past.



Q.5 Write Months name :-

1.

2.

3.

4.

5.

6.

7.

8.

9.

10.

12.

13.

Activity :-

Make a clock with the help of waste things :-

RING MIDWAYS SR. SEC. PUBLIC SCHOOL
Main Najafgarh Road, Vipin Garden, New Delhi-110059
Assessment For - II Term Assessment - VII (A)

Class - IInd
Subject- Maths


Q.1 Fill in the blanks :-


- a) 1 day = Hours.
b) 1 hour = minutes.
c) 1 week = days.
d) 1 year = Months.
e) 1 leap year = days,

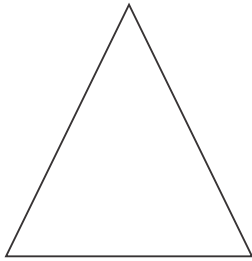
Q.2 Tick (✓) the event that takes more/ long time :-

- | | | | |
|-----------------------|--------------------------|----------------|--------------------------|
| a) Bathing | <input type="checkbox"/> | Brushing | <input type="checkbox"/> |
| b) Cooking food | <input type="checkbox"/> | Eating food | <input type="checkbox"/> |
| c) Washing Towel | <input type="checkbox"/> | Drying a towel | <input type="checkbox"/> |
| d) Writing a Sentence | <input type="checkbox"/> | Reading a book | <input type="checkbox"/> |

Q.3 Write the following names, Sides and corners.

1. 
- | | | |
|-------------------|---|-------|
| Name | ⇒ | |
| Number of sides | ⇒ | |
| Number of corners | ⇒ | |

- 
- | | | |
|-------------------|---|-------|
| Name | ⇒ | |
| Number of sides | ⇒ | |
| Number of corners | ⇒ | |



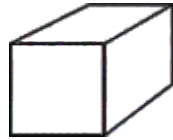
Name ⇒

Number of sides ⇒

Number of corners ⇒

Q.4 Match ups :-

1) Sphere



2) Cone



3) Cube



4) Cuboid



5) Cylinder



Activity:-

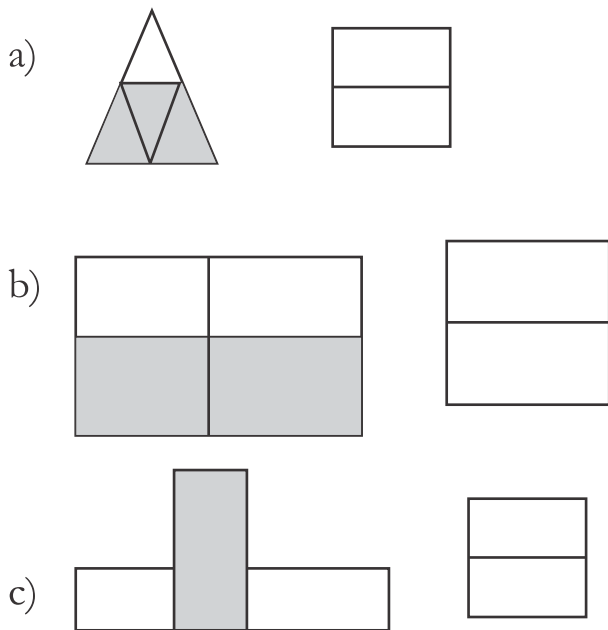
1. Make a wall clock on thermacol sheet

RING MIDWAYS SR. SEC. PUBLIC SCHOOL
Main Najafgarh Road, Vipin Garden, New Delhi-110059
Assessment For - II Term Assessment - VIII (B)

Class - IInd

Subject- Maths

Q.1 What fraction is shaded?



Q.2 Encircle the fraction with :-

a) Numerator 5

$$\frac{3}{5}, \frac{4}{7}, \frac{5}{16}, \frac{8}{10}, \frac{5}{23}$$

b) Denominator 7

$$\frac{9}{23}, \frac{3}{7}, \frac{4}{10}, \frac{6}{11}, \frac{4}{7}$$

c) Numerator 84

$$\frac{5}{79}, \frac{84}{89}, \frac{16}{84}, \frac{63}{92}, \frac{84}{100}$$

d) Denominator 55

$$\frac{35}{55}, \frac{19}{35}, \frac{14}{27}, \frac{80}{99}, \frac{23}{55}$$

Q.3 Add the following

a) $\frac{2}{7} + \frac{1}{7}$ = =

b) $\frac{4}{5} + \frac{0}{5}$ = =

c) $\frac{1}{10} + \frac{8}{10}$ = =

d) $\frac{5}{18} + \frac{6}{18}$ = =

Q.4 Observe and complete the following table:-

a) Aa	Bb	Cc
b) a	aa	aaa
		x x		
c) x	x	x x
	x	x x		
d) 1a	2b	3c

Activity :-

1. Make a flash cards of Roman number (from 1 to 20) with the help of matchsticks.

RING MIDWAYS SR. SEC. PUBLIC SCHOOL
Main Najafgarh Road, Vipin Garden, New Delhi-110059
Assessment For - I Perodic Assessment - I (A)

Class - IInd
Subject- E.V.S.

Q.1 Let us get to know about you and your best friend . Find and write the correct information in the table given below :-

	About You	About your best friend
Height		
Weight		
Size of shoes		
Hair (long/ short)		
Colour of eyes		
Left / right handed		

Q.2 .Answer in one word :-

1. Do plants and animals grow?
2. What happens as we grow?

Q.3 Tick (✓) the right answer and cross (✗) the wrong ones

1. A small child becomes adult in a few years ()
2. We do not change as we grow ()

3. We carry an umbrella on a rainy day ()

4. Silk is also got from sheep ()

Q.4 Fill in the blanks with :-


1. People wear..... coloured cotton cloths in summer.

2. We get wool from


3. Plants andalso grow.

4. As we grow we became


Q.5 Paste your pictures in the boxes given below :-



As a baby



When you were
3 Years old



Latest

Activity :-

1. Make collage of dresses worn in different states of our country.

RING MIDWAYS SR. SEC. PUBLIC SCHOOL
Main Najafgarh Road, Vipin Garden, New Delhi-110059
Assessment For - I Perodic Assessment - II (B)
Class - IInd
Subject- E.V.S.

Q.1 Answer in one word :-

- 1.Can we see air?
2. What is moving air called?.....
3. How many types of food are there?

Q.2 Draw two food items we get from plants and two food items .We get from animals in the boxes given below . Also colour them

Food items form plants

1.


2.

Food items form animals

1.

2.

Q.3 Think and draw to object that make use of air to do work .



Activity :-

Make a chart with a message that Junk food is bad for health.

RING MIDWAYS SR. SEC. PUBLIC SCHOOL
Main Najafgarh Road, Vipin Garden, New Delhi-110059
Assessment For - I Term Assessment - III (A)

Class - IInd
Subject- E.V.S.

Q.1 Unjumble the letters to get the name of the sources of water:-

- a) Vrier ⇒
- b) Kale ⇒
- c) Lewl ⇒

Q.2 Write any two ways in which you can save water:-

- a)
- b)

Q.3 Fill in the blanks:-

[Pollution, wind, everywhere, space]

- 1) Air is present
- 2) Air occupies
- 3) also helps in drying clothes.
- 4) Air contains carbon - di -oxide is harm to us.

Q.4 Tick (✓) the right answer and cross (×) the wrong one.

- 1. Animals do not give us food to eat. ()
- 2. Eggs, fish and meat are called non - vegetarian food. ()
- 3. We carry an umbrella on a rainy day. ()
- 4. Silk is also got from sheep. ()

Q.5 Write three good food habits that you follow at home.

- 1.
- 2.
- 3.

Activity :-

Prepare a short speech on how to reduce air pollution and speak during the school assembly:-

RING MIDWAYS SR. SEC. PUBLIC SCHOOL
Main Najafgarh Road, Vipin Garden, New Delhi-110059
Assessment For - I Term Assessment - IV (B)

Class - IInd
Subject- E.V.S.

Q.1 Fill in the missing letters to know who they are :-

1. D..... T R
2. N..... R..... E
3. P I..... O T
4. P O M..... N

Q.2 How do the food types given below help our body?

- a) Energy-giving foods ⇨
- b) Body- building foods ⇨
- c) Protective foods ⇨

Q.3 Tick (✓) or (✗) :-

1. We should do exercise daily. ()
2. A good posture does not keep us fit and active ()

Q.4 Fill in the blanks :-

1. The water that is underground is called.....
2. Dirty water is called.....water.
3. The water that is underground is called.....
4. is very important in our daily life

Q.5 Write three good habits you follow :-

at school

1.
2.

3.

Q.6 Write five Indian festival name :-

1.

2.

3.

4.




5.

Activity :-

When do you have your breakfast.....lunch.....

Dinner.....

Now draw hands on the clocks to show the timings of your meals



RING MIDWAYS SR. SEC. PUBLIC SCHOOL
Main Najafgarh Road, Vipin Garden, New Delhi-110059
Assessment For - II Perodic Assessment - V (A)
Class - IInd
Subject- E.V.S.

Q.1 Fill in the missing letters :-

1. B.....U S

2. C.....M B

3. T.....W.....L

4. M.....T.....E R

Q.2 Fill in the blanks with :-

(Kerala, Victory, Ganesh Chaturthi)

1. is celebrated in Maharashtra.

2. Onam is the biggest festival of

3. Dussehra marks theof Lord Rama over Ravana.

Q.3 Read the statements and guess the name :-

a) I am round and white

I can my shape every night.

who am I

b) I am big round and hat.

Low see me during the day.

who am I

Q.4 Draw and Colour :-

Mountain

Trees

Q.5 Classify the following in the living and non living things.

Table, Dog, Pencil, Car, Books, Tree, Cat, Boy, Bag, Cow

Living things

1.
2.
3.
4.

Non living things

1.
2.
3.
4.

Activity :-

1. Diya Decoration.

RING MIDWAYS SR. SEC. PUBLIC SCHOOL
Main Najafgarh Road, Vipin Garden, New Delhi-110059
Assessment For - II Perodic Assessment - VI (B)

Class - IInd
Subject- E.V.S.

Q.1 Who does these for 😊 good habits and a ☹️ for bad habits.

1. Have a bath everyday. ☐
2. Shout in the classroom. ☐
3. Chew the food well. ☐
4. Litter things on the floor. ☐

Q.2 Who does these for you in your family?

1. Cooks food.
2. Packs your bag.
3. Comb Your hair.
4. Helps with your homework

Q.3 Fill in the missing letters :-

1. Hari lays bricks. He is a.....S.....N.
2. Vaibhav paints the house. He is a P.....NT.....
3. Bharat fixes the water pipes. He is a P M..... FR.

Q.4 Write (G) for the good qualities and (B) for the had qualities.

1. Mrs. Nalini is throwing garbage from the window.
2. Rohan is helping an old lady in crossing the road.
3. Children are playing together in the neighbourhood.
4. Rohit is celebrating a festival with his neighbourhood.

Activity :-

Collect and write the following information about your neighbours.

1. Name of your two neighbours.

a)

b)

2. Their house numbers.

a)

b)

3. One thing you liked in them.

a)

b)

4. A kind of family they live in

a)

b)

RING MIDWAYS SR. SEC. PUBLIC SCHOOL
Main Najafgarh Road, Vipin Garden, New Delhi-110059
Assessment For - II Term Assessment - VII (A)

Class - IInd
Subject- E.V.S.

Q.1 When are the following functions celebrated at your school?

1. Republic day
2. Children's day
3. Independence day
4. Gandhi Jayanti
5. Teacher's day
6. Sports' day

Q.2 Pick out the correct word :-

1. Children's day is celebrated on Gandhi Jayanti/ Jawaharlal Neheru's birthday.....
2. Teacher's day is celebrated on 7 th September/5 th September.....
3. A place where you sit and read books is called a play ground/library.....

Q.3 Answer in one word :

1. We should play on the busy road-Yes or no
.....
2. We should not board a running bus-Yes or no
.....
3. Safety rules help avoid accidents-Yes or no.
.....

Q.4 Tick (✓) the correct answer :-

1. Summer is the hottest/ coldest season of the year.
2. In Winters, days are short/ long
3. When we go out in the hot sun we take an umbrella / a raincoat.

Activity :-

Q.5 Draw a picture of your favourite season in the scrapbook. Also colour it.

RING MIDWAYS SR. SEC. PUBLIC SCHOOL
Main Najafgarh Road, Vipin Garden, New Delhi-110059
Assessment For - II Term Assessment - VIII (B)
Class - IInd
Subject- E.V.S.

Q.1 Fill in the missing letters :-

1. M CH
2. P M R
3. J..... Y
4. A U..... S.....
5. E C..... ER
6. Y
7. A IL
8. T B

Q.2 Define :-

a) Plant-eaters

Ans

b) Flesh- eaters

Ans

Q.3 Answer in one word :-

1. Name any herbivores.

Ans

2. Name any carnivores.

Ans

3. Name any Omnivores.

Ans

Q.4 Give names of two plants whose :-

1. Leaves we eat ,

2. Seeds we eat ,
.....

3. Stems we eat ,
.....

4. Roots we eat ,
.....

Q.5 Select the things which we use during Summer, winter and rainy season from the help box and put under the correct headings.

Help box

Raincoat, ice-cream, Cold-drinks, Umbrella, fan, Heater, Coffee, Oranges, gumboots.

Summer Season

.....
.....
.....

Rainy Season

.....
.....
.....

Winter Season

.....
.....
.....

RING MIDWAYS SR. SEC. PUBLIC SCHOOL
Main Najafgarh Road, Vipin Garden, New Delhi-110059
Assessment For - I Perodic Assessment - I (A)
Class - IInd
Subject- G.K

Q.1 Write the flowers Name

1.
2.
3.
4.

Q.2 Fill in the blanks with the correct animal sounds.

1. A duck
2. A cat
3. A god
4. A bird

Q.3 Match the plants and animals with the products that we get from them


- | | |
|-----------------|------------|
| 1. Silkworm | a) Eggs |
| 2. Hen | b) Honey |
| 3. Sugarcane | c) Perfume |
| 4. Coconut tree | d) Sugar |
| 5. Cow | e) Oil |
| 6. Rose | f) Milk |
| 7. Bee | g) Saree |

Q.4 Fill in the blanks

1. It guards your house.....
2. It can mimic your voice.....

3. It is a soft pet.....

Q.5 Solve the crossword puzzle



Activity :-

1. Make a chart of national symbols.

Bird, Animal, flower, fruits, tree, emblem, currency.

RING MIDWAYS SR. SEC. PUBLIC SCHOOL
Main Najafgarh Road, Vipin Garden, New Delhi-110059
Assessment For - I Perodic Assessment - II (B)
Class - IInd
Subject- G.K

Q.1 Fill in the blanks

(Gandhi Jayanti, Republic day, Independence day)

1. It is celebrated on 26 th January

Ans

2. It is celebrated on 15th August

Ans

3. It is celebrated on 2nd October

Ans

Q.2 Write the Indian dishes Name

1.

2.

3.

4.

Q.3 Name these members of the primate family :





Q.4 Write five country name

1.
2.
3.
4.
5.

Q.5 Write five cartoon name

1.
2.
3.
4.
5.

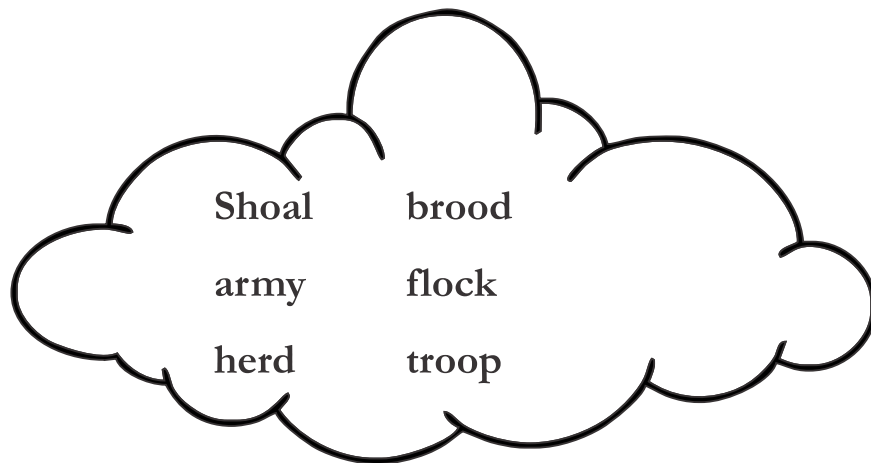
Activity :-

1. Draw a beautiful swimming 'Duck' in a pond on 'A4' size sheet

RING MIDWAYS SR. SEC. PUBLIC SCHOOL
Main Najafgarh Road, Vipin Garden, New Delhi-110059
Assessment For - I Term Assessment - III (A)

Class - IInd
Subject- G.K

Q.1 Write the names of the groups of animals in the blanks using the clue box.



1. A of monkeys
2. A of hens
3. A of birds
4. A of horses
5. A of fishes
6. A of caterpillars

Q.2 Circle the odd one out

- | | | | |
|----------|--------|-----------|-------|
| 1. Camel | Donkey | Butterfly | Horse |
| 2. Dog | Parrot | Cat | Lion |
| 3. Sheep | Cock | Elephant | Goat |
| 4. Cow | Hen | Buffalo | Goat |

Q.3 Name the place where the given monuments are located

1. Charminar
2. Qutubminar

3.Sun Temple

Q.4 Match the following :-

- | | |
|-----------------|------------------|
| 1. Kathakali | a) Uttar pradesh |
| 2. Odissi | b) Tamil Nadu |
| 3. Bhangro | c) Kerala |
| 4. Bharatnatyam | d) Manipur |
| 5. Manipuri | e) Odisha |
| 6. Kathak | f) Punjab |

Activity :-

1. Prepare the calender of a year 2017 on chart paper.

RING MIDWAYS SR. SEC. PUBLIC SCHOOL
Main Najafgarh Road, Vipin Garden, New Delhi-110059
Assessment For - I Term Assessment - IV (B)

Class - IInd
Subject- G.K

Q.1 Can you name these famous Indian Woman



Q.2 Complete their rhymes

Humpty Dumpty

Humpty Dumpty

All the king's horses,

And all the kings' men,

Couldn't put.....


Together again

Q.3 Write the Following words backwards to get new words. Use the picture clues

1. RATS




2. NET



3. DUB



4. GUM



Q.4 Write the Season's Glary

1.
2.
3.
4.
5.

Q.5 Write the five water animals

1.
2.
3.
4.
5.

Activity :-

1. Make a stick puppet of our helpers or paste the picture of our helper (in G.K copy)
2. Paste the pictures of different types of dances in different states in the note book.

RING MIDWAYS SR. SEC. PUBLIC SCHOOL
Main Najafgarh Road, Vipin Garden, New Delhi-110059
Assessment For - II Perodic Assessment - V (A)
Class - IInd
Subject- G.K

Q.1 Write five capitals name

1.
2.
3.
4.
5.

Q.2 Write the dates when we celebrate these important days.

1. This day is celebrated as children's day It falls on the birthday of Chacha Nehru

1.



.....

2. This day is the birthday of mahatma gandhi. It is celebrated as gandhi jayanti.

2.



.....

3. This day is celebrated as 'Yoga day' 'This is the longest day of the year.

3.



.....

4. This day is the birthday of Swami Vivekananda. It is celebrated as National Youth Day.

4




.....

Q.3 Missing words.

C	A		E
M		L	
P		N	
F		A	

Q.4 Write the correct action word under the pictures.

[Sleep, rise, run, sit, paint, water]



Activity :-

1. Collect leaves different plants and paste them an scrap look.
2. Collect picture of a few things you need to take care fo your body and paste them and A3 Sheet.

RING MIDWAYS SR. SEC. PUBLIC SCHOOL
Main Najafgarh Road, Vipin Garden, New Delhi-110059
Assessment For - II Perodic Assessment - VI (B)
Class - IInd
Subject- G.K

Q.1 Put a tick (✓) on the correct answer :-


1. The largest desert in the worlds is(Thar/Sahara)
2. The largest Ocean of the world is(Pacific/ Atlanta)
3. The largest country in the worlds is.....(Russia/ China)
4. The largest continent of the world is(Africa/ Asia)

Q.2 Name the following

1. Two flowers
2. Two insects
3. Two pet animals
4. Two dances of India
5. Two Cartoon characters

Q.3 Pictures of the national flag of some countries are given below write the name of the country below each flag

Q.3



Q.4 Write the name of the country below each currency



Rupee



Yen



Dollar



Kyat



Yuan

Q. 5 Write the five game board name

1.
2.
3.
4.
5.

Q. 6 Write five famous players name

1.
2.
3.
4.
5.

Activity

1. Draw a tree on chart paper and paste Vegetables Stickers on it.

RING MIDWAYS SR. SEC. PUBLIC SCHOOL
Main Najafgarh Road, Vipin Garden, New Delhi-110059
Assessment For - II Term Assessment - VII (A)

Class - IInd
Subject- G.K

Q.1 Match the following :-

- | | |
|---------------------|-----------------|
| 1. Lord Rama | a) Jainism |
| 2. Jesus Christ | b) Buddhism |
| 3. Prophet Mohammed | c) Sikhism |
| 4. Lord Mahavira | d) Hinduism |
| 5. Guru Nanak Dev | e) Lslam |
| 6. Goutam Buddha | f) Christianity |

Q.2 Write the colours Name

1.
2.
3.
4.
5.

Q.3 State 'True' or 'False'

- | | |
|--|--------------------------|
| 1. The largest desert in the world is Thar | <input type="checkbox"/> |
| 2. The old name of Thailand was Siam | <input type="checkbox"/> |
| 3. Rial is the currency of Myanmar | <input type="checkbox"/> |
| 4. Eiffel tower is located in France | <input type="checkbox"/> |
| 5. Radio was invented by Charles Babbage | <input type="checkbox"/> |

Q.4 Write the eight planets name :-

1.

2.
3.
4.
5.
6.
7.
8.

Q.5 Put a tick (✓) on the correct option

1. Lotus is the national flower of

- a) India ☐ b) Canada ☐ c) Australia ☐

2. Which is the biggest fish in the world?

- a) Dolphin ☐ b) Parrot ☐ c) Whale shark ☐

3. What is a group of monkeys called?

- a) Troop ☐ b) Herd ☐ c) Flock ☐

4. Which insect has ears on their bellies?

- a) Spider ☐ b) Beetle ☐ c) Grasshopper ☐

Q. 5 Identify the pictures of these prominent people of India write their name using the 'Clue Corner'





**Dr. APJ Abdul Kalam, Anna Hazare
Abhinav Bindra, Pranab Mukherjee
Arvind Kejriwal, Arundhati Roy
Sudha Cadran**

Activity :-

1. Make a chart of National symbols (Bird, Animal, Flower, Fruits, Tree, Emblem, Currency,)

RING MIDWAYS SR. SEC. PUBLIC SCHOOL
Main Najafgarh Road, Vipin Garden, New Delhi-110059
Assessment For - II Term Assessment - VIII (B)
Class - IInd
Subject- G.K

Q.1 Match the following

- | | |
|--------------------------|---------------|
| 1. Guglielmo Marconi | Radio |
| 2. J.L Baird | Telephone |
| 3. Wright Brothers | Electric Bulb |
| 4. Charles Babbage | Computer |
| 5. Alexander Graham bell | Aeroplane |
| 6. Thomas Alva edison | Television |

Q.2 Tick (✓) the correct answer :-

1. Which is the odd number?

- a) 5 b) 8

2. What is the place value of 5 in 520?

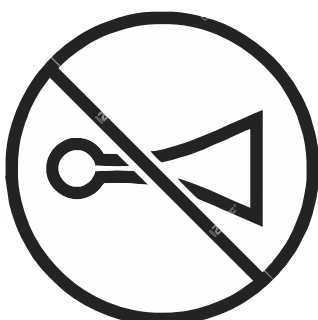
- a) 500 b) 50

3. Complete the series : 2, 4, 6, 8.....

- a) 10 b) 12

Q.3 Write the following road signs.

1.



.....

2.



.....

3.



.....

4.



.....

5.



.....

Q.4 Read the description and write the name of the festival

Q.1 Festival fo light

Ans

Q.2 Festival of colours.

Ans

Q.3 Birthday of Guru Nanak Dev ji

Ans

Q.4 Birthday of Jesus Christ.

Ans

Q.5 Makes the end of Ramzan

Ans

Activity :-

1. Make a chart of solar system on the black chart paper.

RING MIDWAYS SR. SEC. PUBLIC SCHOOL

Main Najafgarh Road, Vipin Garden, New Delhi-110059

Assessment For - I Perodic Assessment - I (A)

Class - IInd

Subject- Drawing

Q.1 Which colour you will find, if we mix

a)

Red

 +

White

 =

--

b)

Blue

 +

Red

 =

--

b)

Yellow

 +

Red

 =

--

b)

Blue

 +

White

 =

--

e)

Red

 +

Yellow

 =

--

f)

Yellow

 +

Blue

 =

--

Q.2 Write the name of some tools which are using for drawing and painting.

Ans

Q.3 Which materials are used for making paper collage?

Ans

Q.4 Write the colours name

Ans

Activity :-

1. Make a pen holder by bangles or ice-cream sticks and also use decorative material
2. Make a doll with the help of waste material.

RING MIDWAYS SR. SEC. PUBLIC SCHOOL
Main Najafgarh Road, Vipin Garden, New Delhi-110059
Assessment For - I Perodic Assessment - II (B)

Class - IInd

Subject- Drawing

Q.1 Fill in the missing letter?

1. R.....D
2. B.....a.....k
3. Y.....ll.....w
4. P.....n
5. Gr.....en

Q.2 What is the colour of parrot?

Ans.

Q.3 What is the colour of a apple?

Ans.

Q.4 What is the colour of tree?


Ans.

Q.5 How many colours in the rainbow?

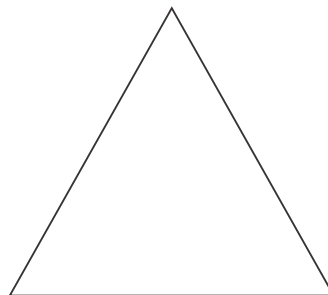
Ans.

Q.3 Fill the following with the help of your favourite colour

a)



b)



c)



Activity :-

1. Make a Dholak with the help of following items:

- a) Coloured chart paper
- b) Adhesive.
- c) Fabric colour oil pastel colour (Brown)
- d) Brush
- c) Scissors


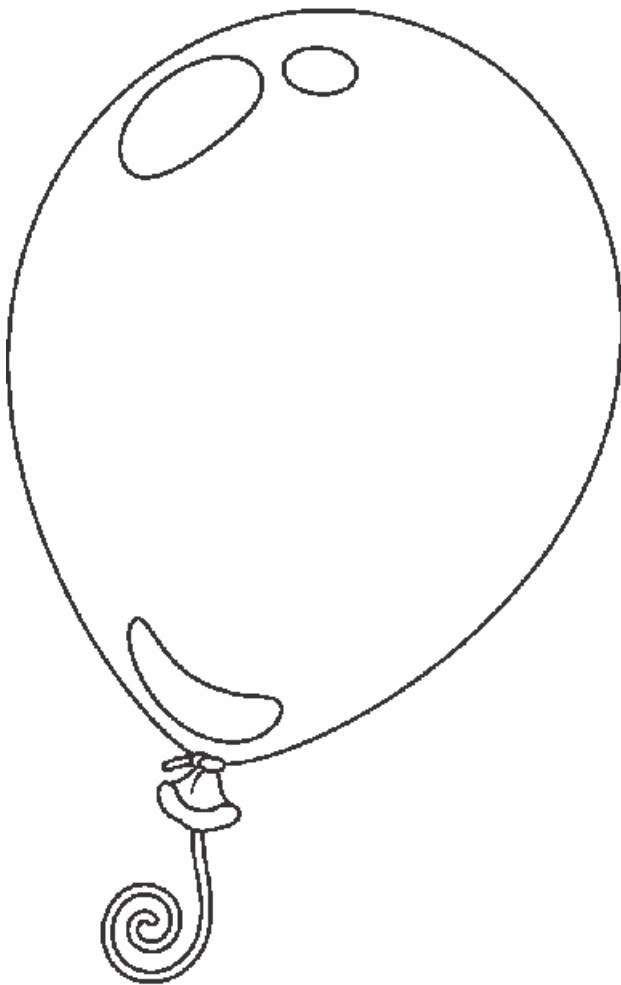
2) Make a paper mate with colour ful sheets.

RING MIDWAYS SR. SEC. PUBLIC SCHOOL
Main Najafgarh Road, Vipin Garden, New Delhi-110059
Assessment For - I Term Assessment - III (A)

Class - IInd

Subject- Drawing

Q.1 Colour the ballon



Q.2 Write three yellow fruits name?

1.
2.
3.

Q.3 Write two tree name?

1.

2.

Q.4 Colour the Mango



Q.5 Write two red Vegetables name?

1.

2.

Q.6 Write two green fruits name?

1.

2.

RING MIDWAYS SR. SEC. PUBLIC SCHOOL
Main Najafgarh Road, Vipin Garden, New Delhi-110059
Assessment For - I Term Assessment - IV (B)

Class - IInd

Subject- Drawing

Q.1 Write six colours name?

Ans.

Q.2 Which are the Primary colours?

Ans.

Q.3 Write two Secondary colours?

Ans.

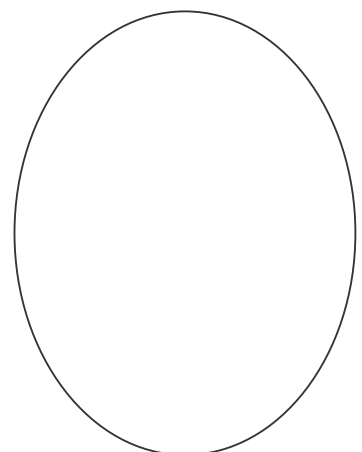

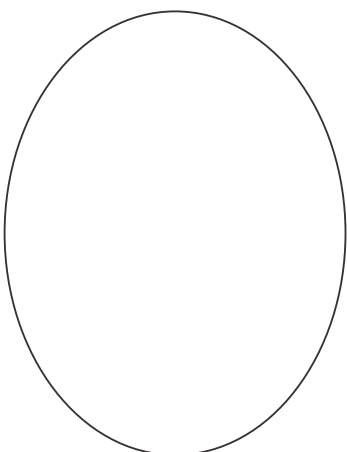
Q.4 Name the seven colours of Rainbow?

Ans.

Q.5 Which bird loves to eat green chillies and grains?

Ans.

Q.6 Fill these circles with the help of warm colours.



Q.7 Draw the favourite fruits that you eat (any four) and colour it.

Ans.....

RING MIDWAYS SR. SEC. PUBLIC SCHOOL
Main Najafgarh Road, Vipin Garden, New Delhi-110059
Assessment For - II Perodic Assessment - V (A)

Class - IInd

Subject- Drawing

Q.1 Match the following

- | | |
|----------|--------|
| 1. Red | Sky |
| 2. Blue | Tomato |
| 3. Black | Teeth |
| 4. Green | Hair |
| 5. White | Tree |

Q.2 What is the colour of your school dress?

Ans

Q.3 Which bird lover to eat green chilli and grain?

Ans

Q.4 Make the picture of your favourite vegetable and colour

a)



b)



c)



Q.5 Activity :-









1. Make a flower pot with the help of waste material

RING MIDWAYS SR. SEC. PUBLIC SCHOOL
Main Najafgarh Road, Vipin Garden, New Delhi-110059
Assessment For - II Perodic Assessment - VI (B)

Class - IInd

Subject- Drawing

Q.1 Colour the box


1. Green 
2. Pink 
3. Blue 
4. Yellow 
5. Red 
6. Orange 
7. White 
8. Black 

Q.2 Answer these

1.are used to making a candle
2. Plant need.....and.....to grow
3. Tortoise is an animals with a.....shell an its back
4. The largest bird in all birds.....
5. Which fish can stay up to 15 minutes under water

Q.3 What the name of the pictures and colour it





Activity :-

1. Make the cap of Santa Clause with the help of cotton and red sheet
2. Make the scene of your Favourite festival

RING MIDWAYS SR. SEC. PUBLIC SCHOOL
Main Najafgarh Road, Vipin Garden, New Delhi-110059
Assessment For - II Term Assessment - VII (A)

Class - IInd

Subject- Drawing

Q.1 Make a list of things which you need to draw painting

Ans.

Q.2 If you want to make a green colour which two colour you need to make green colour?

Ans.

Q.3 What are natural colours?

Ans.

Q.4 Write all alphabet letters with the help of different colour

Ans.

Q.5 Make a diagram of Indian flag and write four line

Ans.

Q.6 Draw the school bus colour it

Activity :-

1. Make a pen stand
2. Make a kite of your choice and decorate it

RING MIDWAYS SR. SEC. PUBLIC SCHOOL
Main Najafgarh Road, Vipin Garden, New Delhi-110059
Assessment For - II Term Assessment - VIII (B)

Class - IInd

Subject- Drawing

Q.1 Answer in one word.

- a)are the water transport.
- b).....Numbers of pencil are normally use for drawing
- c)andyou use mainly for spray painting.
- d)and.....are the water animals.
- e)fruit are used in Summer.

Q .2 Make a diagram of Indian flag and write four lines.

INDIAN FLAG

1)	
2)	
3)	
4)	

Q.3 Write two red Vegetables name?

- 1.
- 2.

Q.4 Write two green fruits name?

- 1.
- 2.

Q.5 Write rhyming words:-

- 1. Hug
- 2. Bat
- 3. Man

4. Throw.....

Q.6 Fill in the missing letter?

1. R.....D

2. B.....a.....k

3. Y.....ll.....w

4. P.....N

5. Gr.....en

Q.7 Activity :-

1. Make a bird with paper.

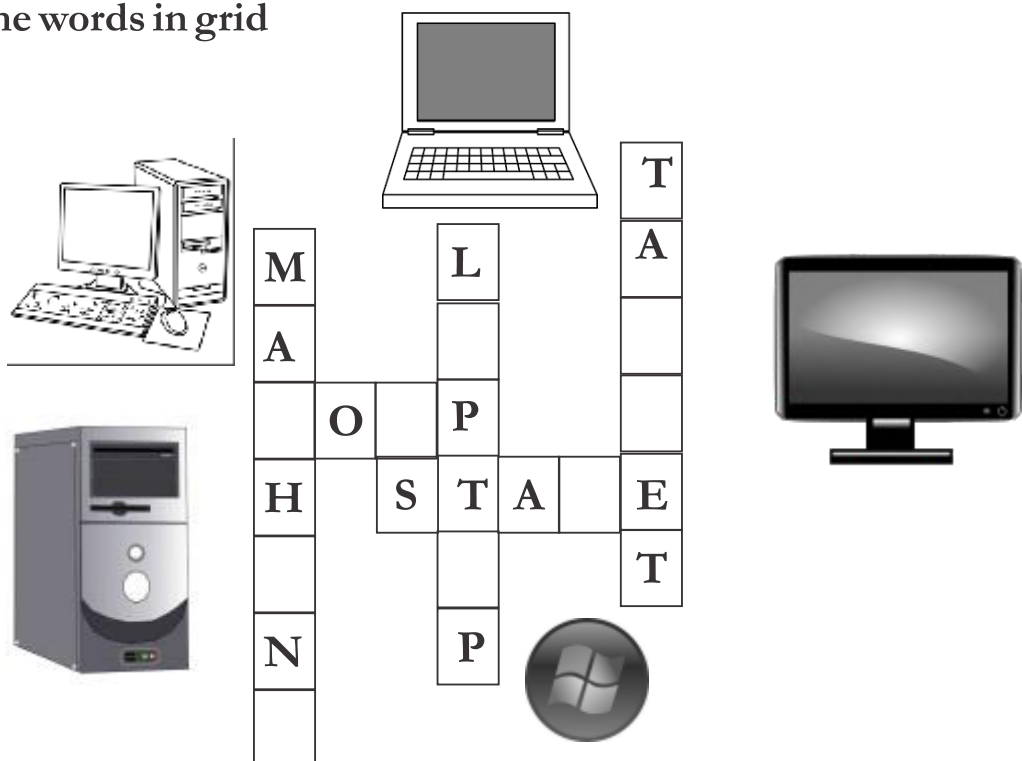
RING MIDWAYS SR. SEC. PUBLIC SCHOOL
Main Najafgarh Road, Vipin Garden, New Delhi-110059
Assessment For - I Perodic Assessment - I (A)
Class - lind

Subject- Computer

Q.1 Write five part of computer

1.
2.
3.
4.
6.

Q.2 Complete the words in grid





Q.3 Match the following

- | | |
|---------------------------|-------------------------|
| 1. Multipurpose computer | a) Slower than computer |
| 2. Apple Macintosh | b) PC |
| 3. Most powerful computer | c) Very fast |
| 4. Advantage of computer | d) Super computer |

Q.4 Fill in the blanks

1. is required to run a computer
2. are slower than computer
3. Most powerful computer is.....
4. is a type of computer

Q.5 Write first letter of the object of image and write the final output in the blanks.



RING MIDWAYS SR. SEC. PUBLIC SCHOOL
Main Najafgarh Road, Vipin Garden, New Delhi-110059
Assessment For - I Perodic Assessment - II (B)
Class - lind

Subject- Computer

Q.1 Make (✓) tick or (x) cross

1. Keyboard is an output device
2. Microphone is output device
3. CPU is known as brain of the computer
4. Monitor is an output device

Q.2 Match the following

- | | |
|------------|---------------|
| 1. Scanner | Output device |
| 2. Printer | Input device |
| 3. Webcam | Input device |

Q.3 Identify the devices and put (O) for output and (I) for input devices

1. Scanner
2. Printer
3. Speaker
4. Keyboard
5. Mouse
6. Microphone

7. Webcam

8. Monitor

Q.4 Fill in the boxes to complete the name

1. O E

2. M T

3. Y A D

4. P N R

5. P

Activity :-

1. Draw a laptop in your copy and colour it.

RING MIDWAYS SR. SEC. PUBLIC SCHOOL
Main Najafgarh Road, Vipin Garden, New Delhi-110059
Assessment For - I Term Assessment - III (A)
Class - IInd
Subject- Computer

Q. 1 Rearrange the jumbled words and write the correct words in the given blank

1. SLNIEEC

2. CMOPTUERLBA

3. ATNITVRSU

Q.2 Make smiley 😊 if true and sad face ☹ if false

1. Do not remove shoes when entering the computer room ☐

2. Always walk silently while entering the computer room ☐

3. Gently open the door ☐

4. Eat and drink in computer room ☐

Q.3 Circle the odd one

1. Table Wood Pencil Keyboard

2. Mango Potato Monitor Peas

3. Watch Sparrow Duck Hen

4. Printer Speaker Ear Mouse

Q.4 Write the missing letters

1. Sh.....p
2. b.....nk
3. Sch.....ls
4. H.....s.....i.....al

Activity :-

1. Draw a mouse and colour it . Use A4 sheet.

RING MIDWAYS SR. SEC. PUBLIC SCHOOL
Main Najafgarh Road, Vipin Garden, New Delhi-110059
Assessment For - I Term Assessment - IV (B)

Class - IInd
Subject- Computer

Q.1 Tick (✓) the correct answer :-

1. The small pictures on the left of the desktop are known as

a) Start button ☐

b) taskbar ☐

c) icons ☐

Q. 2. After finishing the work on the computer we should

a) Shut down the computer ☐

b) Keep the computer ☐

c) Cover the computer with a cloth ☐

Q.3 Re-arrange the jumble words

1. Fiwi

2. Visur

3. DDV

4. MAR


Q.3 Fill in the blanks

1. Software made for common work is also known asor application.

2. is a small flashing line on the screen

3. On clicking the shut down button on theturn off itself.

Q.5 Complete the words in grid



Activity :-

1. Write four steps to start a computer in your note book.

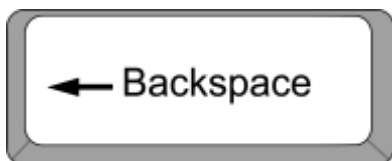
Subject- Computer

4.





D. Longest key on the keyboard

5.



E. Moves the cursor to next line

Q. 4 See the pictures and tick (✓) if right and cross (x) if wrong

☐☐☐☐



Activity :-

1. Draw a computer with mouse keyboard, CPU. and monitor (use full size chart)

RING MIDWAYS SR. SEC. PUBLIC SCHOOL
Main Najafgarh Road, Vipin Garden, New Delhi-110059
Assessment For - II Perodic Assessment - VI (B)
Class - IInd

Subject- Computer

Q.1 Tick (✓) the correct answer :

1. It is a type of mouse

- a) Left button ☐ b) Scroll mouse ☐ c) Right button ☐

Q.2 Answer the following question

1. Write any two uses of a mouse.

1.

2.

Q.2 Solve the following sums with the calculator

$16 + 4 = \dots\dots\dots$

$4 \times 9 = \dots\dots\dots$

$20 + 20 = \dots\dots\dots$

$25 - 10 = \dots\dots\dots$

$16 + 0 = \dots\dots\dots$


4. Tick the correct (✓) and cross (x) the wrong ones

1. The optical mouse has a ball at its bottom. ☐

2. Single click is used for dragging a file ☐

3. A mouse is used to point and select the things directly on the computer screen ☐

Q.5 Draw a wireless mouse and colour it



Activity :-

1. Make a list of different in A4 size sheet and decorate it.

RING MIDWAYS SR. SEC. PUBLIC SCHOOL
Main Najafgarh Road, Vipin Garden, New Delhi-110059
Assessment For - II Term Assessment - VII (A)

Class - IInd
Subject- Computer

Q.1 Name any six places where computers can be used

- | | |
|----------|----------|
| a) | b) |
| c) | d) |
| e) | f) |

Q.2 Rearrange the jumbled words

- | | |
|------------|-------|
| a) SRATT | |
| b) WNIODWS | |
| c) FLISE | |

Q.3 Match the following

- | | |
|------------------|--|
| 1. Taskbar | A. Home screen |
| 2. Folder | B. Bottom of screen |
| 3. Star button | C. Icon on home screen |
| 4. Desktop | D. Group of files |
| 5. Desktop icons | E. Door to operate features of windows |

Q.4 Make (✓) Tick or (x) Cross

1. All the deleted files are stored in Control Panel
2. Taskbar is at the bottom of the screen

Q.5 Complete the words in grid



A

1. Make a list of 4 places where computer are need. Explain one of these in your copy

RING MIDWAYS SR. SEC. PUBLIC SCHOOL
Main Najafgarh Road, Vipin Garden, New Delhi-110059
Assessment For - II Term Assessment - VIII (B)
Class - IInd

Subject- Computer




Q.1 Circle the correct spelling

- | | | |
|---------------|------------|-------------|
| 1. Texteditor | TextEditor | TextEditor |
| 2. Minu bar | Menu bar | Menubar |
| 3. Accesories | Acessories | Accessories |

Q.2 Make smiley 😊 if true and sad ☹ face if false

1. Eraser tool is used to draw lines
2. Fill with color tool colors closed shapes
3. A triangle, square, pentagon, etc. are all polygons

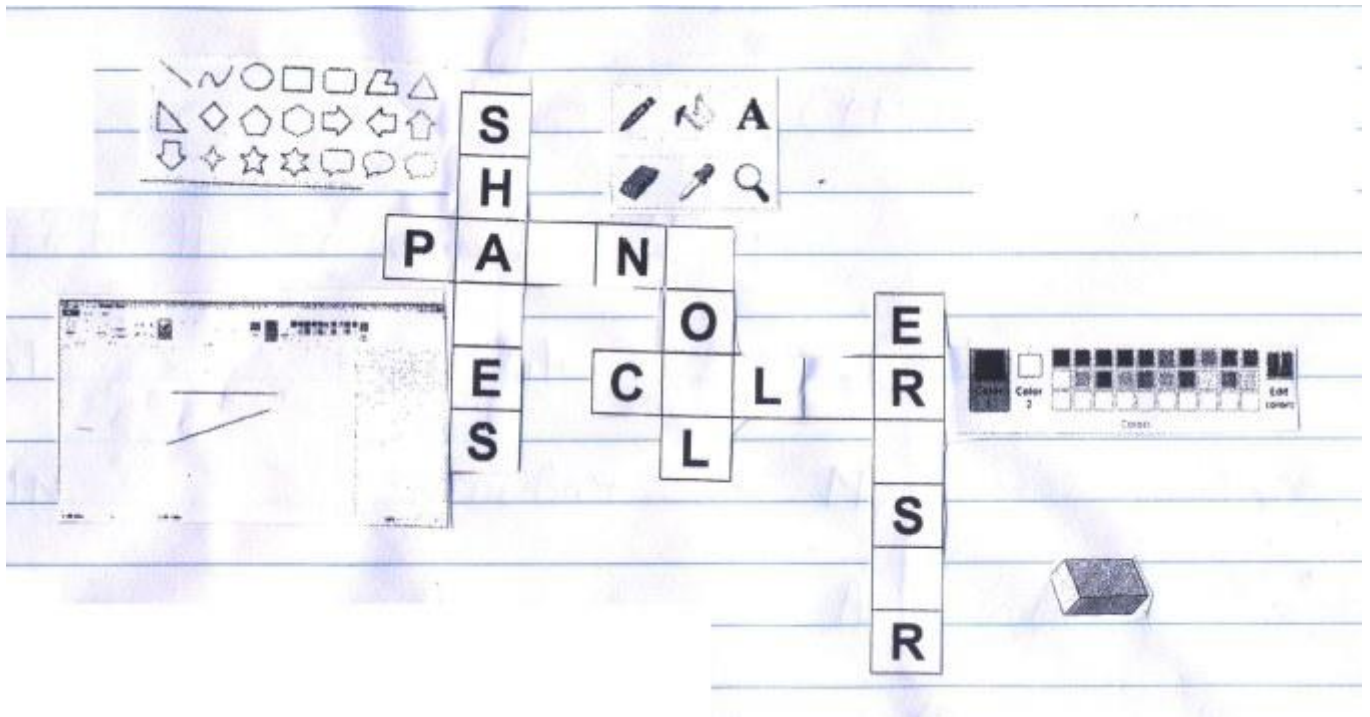
Q.3 Match the folloing

- | | |
|---------------------|---|
| 1. Text Tool |  |
| 2. Pencil Tool |  |
| 3. Eraser Tool |  |
| 4. Fill with colour | |

Q.4 Fill in the blanks

1. tool helps us to add text to our drawing
2. is a closed figure with any number of side.

Q.5 Complete the word in grid



Activity:

1. Draw the picture of CD and floppy disk (use A4 size sheet) and colour it :-